

1

$$m\ddot{x} = -\lambda \operatorname{sgn}(\dot{x}) |\dot{x}|^\alpha$$

$t > 0, \dot{x} > 0$ *gerumir fyrir*

$\dot{x}(t=0) = v_0, x(t=0) = x_0$

Breytum \dot{x} jöfnu fyrir v

$$\frac{d^2x}{dt^2} = -\frac{\lambda}{m} \left(\frac{dx}{dt}\right)^\alpha$$

$$\frac{dv}{dt} = -\frac{\lambda}{m} v^\alpha$$

$$\frac{dv}{v^\alpha} = -\frac{\lambda}{m} dt$$

heildum

$$\int_{v_0}^v \frac{dv'}{(v')^\alpha} = -\frac{\lambda}{m} \int_0^t dt$$

$$-\frac{v^{1-\alpha}}{\alpha-1} + \frac{v_0^{1-\alpha}}{\alpha-1} = -\frac{\lambda}{m} t$$

$$v^{1-\alpha} - v_0^{1-\alpha} = \frac{\lambda}{m} (\alpha-1) t$$

$$v^{1-\alpha} = v_0^{1-\alpha} + \frac{\lambda}{m} (\alpha-1) t$$

$$= (\alpha-1) \left(-\frac{v_0^{1-\alpha}}{1-\alpha} + \frac{\lambda t}{m} \right)$$

$$v = \left\{ (\alpha-1) \left(-\frac{v_0^{1-\alpha}}{1-\alpha} + \frac{\lambda t}{m} \right) \right\}^{\frac{1}{1-\alpha}}$$

$$\frac{dx}{dt} = \left\{ (\alpha-1) \left(-\frac{v_0^{1-\alpha}}{1-\alpha} + \frac{\lambda t}{m} \right) \right\}^{\frac{1}{1-\alpha}}$$

2

$$\int_{x_0}^x dx' = \int_0^t dt \left\{ (\alpha-1) \left(-\frac{v_0^{1-\alpha}}{1-\alpha} + \frac{\lambda t'}{m} \right) \right\}^{\frac{1}{1-\alpha}}$$

heildum

$$x - x_0 = \frac{m}{\lambda} \frac{(\alpha-1)^{\frac{1}{1-\alpha}}}{\left(\frac{2-\alpha}{1-\alpha}\right)} \left(-\frac{v_0^{1-\alpha}}{1-\alpha} + \frac{\lambda t'}{m} \right)^{\frac{1+1-\alpha}{1-\alpha}} \Big|_0^t$$

$$= -\frac{m}{\lambda(2-\alpha)} \left\{ (\alpha-1) \left(-\frac{v_0^{1-\alpha}}{1-\alpha} + \frac{\lambda t'}{m} \right)^{\frac{2-\alpha}{1-\alpha}} \right\} \Big|_0^t$$

$$= +\frac{m}{\lambda} \frac{v_0^{2-\alpha}}{(2-\alpha)} - \frac{m}{\lambda(2-\alpha)} \left\{ (\alpha-1) \left(\frac{v_0^{1-\alpha}}{(\alpha-1)} + \frac{\lambda t}{m} \right) \right\}^{\frac{2-\alpha}{1-\alpha}}$$

$$= \frac{m}{\lambda(2-\alpha)} \left[v_0^{2-\alpha} - \left\{ v_0^{1-\alpha} + \frac{\lambda t}{m} (\alpha-1) \right\}^{\frac{2-\alpha}{1-\alpha}} \right]$$

3

þú fast

$$x - x_0 = \frac{m v_0^{2-\alpha}}{\lambda(2-\alpha)} \left[1 - \left\{ 1 + \frac{\lambda t (\alpha-1)}{m v_0^{1-\alpha}} \right\}^{\frac{2-\alpha}{1-\alpha}} \right]$$

nálgum þegar t er lítið, þ.e. ef $\frac{\lambda t (\alpha-1)}{m v_0^{1-\alpha}} \ll 1$

(við þurfum alltaf viðmið, sem fast með því að gera breyturver veldislausar)

notum Taylor

$$(1+x)^\beta \approx 1 + \beta x + \frac{(\beta^2 - \beta)}{2} x^2 + \dots$$

$$x - x_0 \approx \frac{m v_0^{2-\alpha}}{\lambda(2-\alpha)} \left\{ -\frac{(2-\alpha) \lambda t (\alpha-1)}{(1-\alpha) m v_0^{1-\alpha}} - \frac{\left(\left(\frac{2-\alpha}{1-\alpha}\right)^2 - \frac{(2-\alpha)}{(1-\alpha)} \right)}{2} \frac{\lambda^2 t^2 (\alpha-1)^2}{m^2 v_0^{2(2-\alpha)}} + \dots \right\}$$

$$\approx v_0 t - \frac{\lambda}{2m} v_0^\alpha t^2 + \dots$$

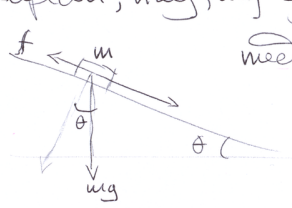
fyrir lítið t er líns og krömm λv_0^α sé á vötu hreyfingunnar

Sjá M. Razavy, Dissipative classical and quantum systems 1. kafla 2nd Ed.

4

2-15

sköplan, hreyfing ogjar í föstu þyngðarsviði og með vörðunskraft $f = kv^2$



Hve langan tíma þarf ögnin til að komast d úr kyrrstöðu?

Hreyfi jafnan er

$$m\ddot{x} = mg \sin \theta - kv^2 \rightarrow \frac{dv}{dt} = g \sin \theta - kv^2$$

þaða

$$dv = g \sin \theta \cdot dt - kv^2 \cdot dt = \{g \sin \theta - kv^2\} dt$$

og

$$\frac{dv}{\{g \sin \theta - kv^2\}} = dt$$

höfum ógrent breyturver t og v og getum því heildað beint

upphafsstílgrei

$$v(t=0) = v(0) = 0$$

$$\int_0^v \frac{dv'}{g \sin \theta - k(v')^2} = \int_0^t dt'$$

Hæði og nánar innvið eykst

$$\rightarrow \frac{dv}{dt} > 0$$

því sést þá (*) að

$$g \sin \theta > kv^2$$

$$\frac{1}{kg \sin \theta} \cdot \text{Arctanh} \left\{ \frac{kv'}{g \sin \theta} \right\} = t$$

$$t = \frac{\text{Arctanh} \left\{ \frac{kv}{g \sin \theta} \right\}}{kg \sin \theta}$$

$$\text{Arctanh} \left\{ \frac{kv}{g \sin \theta} \right\} = t \sqrt{kg \sin \theta}$$

$$\rightarrow \frac{kv}{g \sin \theta} = \tanh \left(t \sqrt{kg \sin \theta} \right)$$

$$v = \frac{g \sin \theta}{k} \tanh \left(t \sqrt{kg \sin \theta} \right)$$

$$\frac{dx}{dt} = \frac{g \sin \theta}{k} \tanh \left(t \sqrt{kg \sin \theta} \right)$$

$$\lim_{kd \rightarrow 0} t = \frac{\sqrt{2 \cdot kd}}{kg \sin \theta} = \sqrt{\frac{2d}{g \sin \theta}}$$

d fasti
k → 0

þetta lausn þegar
engin vörðingur er

þetta getum við helgað

$$\int_0^d dx = \int_0^t dt' \left(\frac{g \sin \theta}{k} \tanh \left(t' \sqrt{kg \sin \theta} \right) \right)$$

$$d = \frac{g \sin \theta}{k} \frac{\ln \left\{ \cosh \left(t \sqrt{kg \sin \theta} \right) \right\}}{\sqrt{kg \sin \theta}}$$

$$\rightarrow d = \frac{1}{k} \ln \left\{ \cosh \left(t \sqrt{kg \sin \theta} \right) \right\}$$

Henni er hægt að skrifa útd

$$\exp \{ kd \} = \cosh \left(t \sqrt{kg \sin \theta} \right) \rightarrow$$

$$t \sqrt{kg \sin \theta} = \text{ArCosh} \{ \exp(kd) \}$$

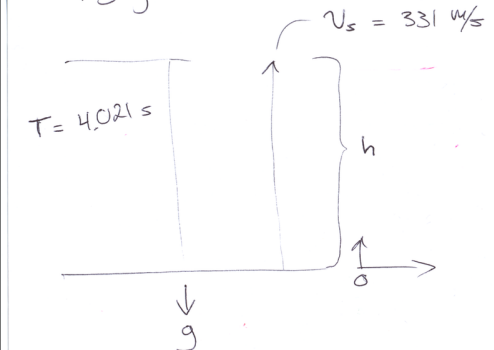
$$t = \frac{\text{ArCosh} \{ \exp(kd) \}}{\sqrt{kg \sin \theta}}$$

$$\lim_{kd \rightarrow 0} t = \sqrt{\frac{2d}{g \sin \theta}}$$

d fasti
k → 0

þetta lausn þegar
engin vörðingur er

2-3D Þyngdarhröðun



lödrett fall $m\ddot{y} = -mg$

lausn

$$y = y_0 + \dot{y}_0 t - \frac{1}{2} g t^2$$

$$\left. \begin{aligned} y(0) &= h \\ \dot{y}(0) &= 0 \end{aligned} \right\} 0 = h - \frac{1}{2} g t^2$$

$$\rightarrow t_f = \sqrt{\frac{2h}{g}}$$

Hljóð upp $t_s = \frac{h}{v_s} \rightarrow$

helðertími þ.t. hljóð heyrast er

$$T = t_s + t_f = \frac{h}{v_s} + \sqrt{\frac{2h}{g}}$$

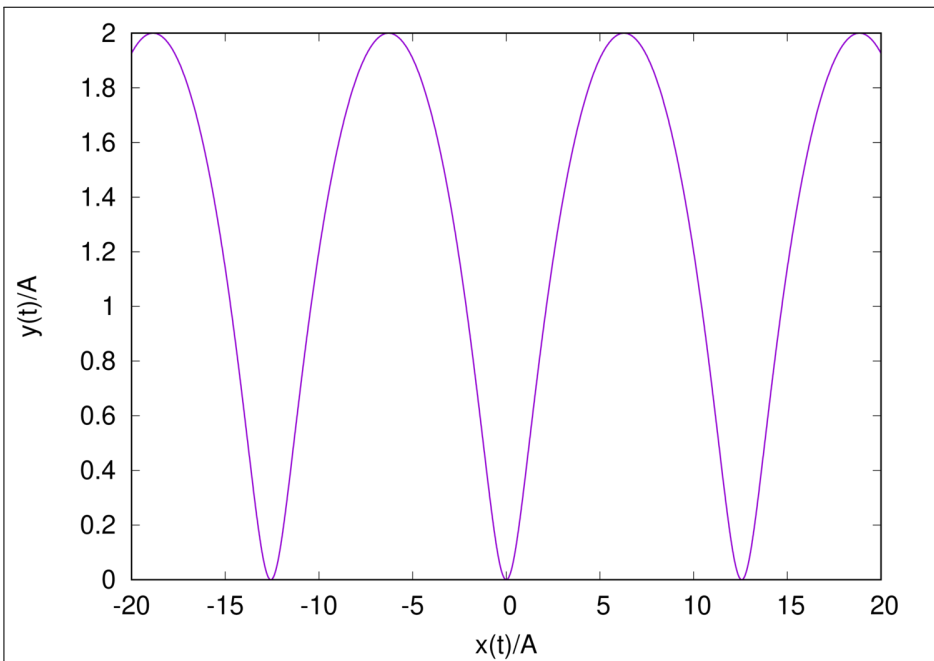
$$\frac{h}{v_s} + \sqrt{\frac{2h}{g}} - T = 0$$

Annarsstigs þrjú fyrir breytuna \sqrt{h}

$$h = \frac{-\left(\frac{2}{g}\right) \pm \sqrt{\left(\frac{2}{g}\right)^2 + \frac{4T}{v_s}}}{2/v_s} = \frac{v_s}{2g} \left[-1 \pm \sqrt{1 + \frac{2gT}{v_s}} \right]$$

h er jákvæð stærð \rightarrow tökum jákvæðu rótuna

$$\rightarrow h = 71.063 \text{ m of } g = 9.81 \text{ m/s}^2$$



2-4) Þú á breyt

$$x(t) = A(2\alpha t - \sin(\alpha t))$$

$$y(t) = A(1 - \cos(\alpha t))$$

Hraðinn er alltaf suerföll
öð breytina

Skilgreinum $\vec{v}(t) = v(t)\vec{T}(t)$ suerföll breytur

$$\rightarrow \vec{a}(t) = \frac{dv}{dt} = \frac{dv}{dt} \cdot \vec{T} + v \frac{d\vec{T}}{dt}$$

$$= a_t \vec{T} + a_n \vec{N}$$

sjá mynd á næsta síðu

$$\vec{T} \cdot \vec{T} = 1 \rightarrow \frac{d}{dt}(\vec{T} \cdot \vec{T}) = 0 = \vec{T} \cdot \frac{d\vec{T}}{dt} + \frac{d\vec{T}}{dt} \cdot \vec{T}$$

$$= 2 \vec{T} \cdot \vec{N}$$

\vec{N} og \vec{T} eru horthöf

Einingavektor $\vec{T}(t) = \frac{\dot{\vec{r}}(t)}{|\dot{\vec{r}}(t)|}$, $\vec{N} = \frac{\ddot{\vec{r}}(t)}{|\ddot{\vec{r}}(t)|}$

$$\dot{x}(t) = A(2\alpha - \alpha \cos(\alpha t)) = A\alpha(2 - \cos(\alpha t))$$

$$\dot{y}(t) = A\alpha \sin(\alpha t)$$

$$\rightarrow v = \sqrt{\dot{x}^2 + \dot{y}^2} = A\alpha \sqrt{(2 - \cos(\alpha t))^2 + \sin^2(\alpha t)}$$

$$= A\alpha \sqrt{5 - 4\cos(\alpha t)}$$

$$\rightarrow a_t = \frac{dv}{dt} = \frac{2A\alpha^2 \sin(\alpha t)}{\sqrt{5 - 4\cos(\alpha t)}}$$

variað $\dot{\vec{r}} \neq \vec{N} \rightarrow a_n \neq v$ ($\dot{\vec{r}}$ er ekki stefndur)

en $a^2 = a_t^2 + a_n^2$, og

$$a = \sqrt{(\ddot{x}(t))^2 + (\ddot{y}(t))^2} \rightarrow a_n = \sqrt{a^2 - a_t^2}$$

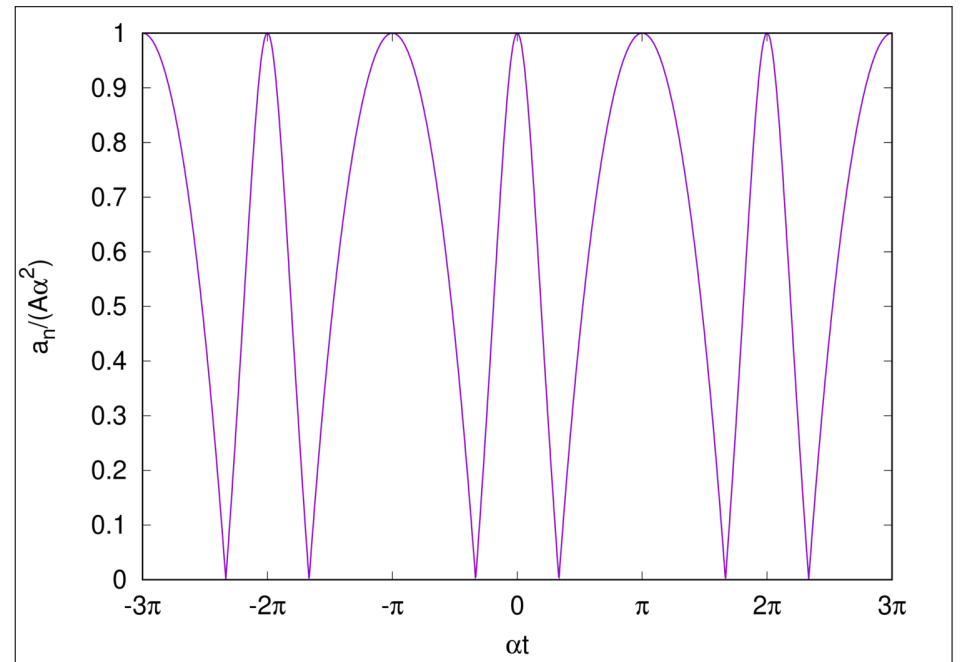
$$= A\alpha^2$$

$$a_n = \sqrt{\frac{A^2 x^4 - \frac{4A^2 x^4 \sin^2(xt)}{5-4\cos(xt)}}{5-4\cos(xt)}} = Ax^2 \sqrt{1 - \frac{4\sin^2(xt)}{5-4\cos(xt)}} \quad (13)$$

$$= Ax^2 \sqrt{\frac{5-4\cos(xt) - 4\sin^2(xt)}{5-4\cos(xt)}} = Ax^2 \sqrt{\frac{1-4\cos(xt) + 4\cos^2(xt)}{5-4\cos(xt)}}$$

$$= Ax^2 \sqrt{\frac{(1-2\cos(xt))^2}{5-4\cos(xt)}} = Ax^2 \frac{|1-2\cos(xt)|}{\sqrt{5-4\cos(xt)}}$$

sjá graf á vefu síðu, sem sýnir max-gildi
 a_n í punktum $xt = n\pi$, $n \in \mathbb{Z}$



2-52

$$U(x) = U_0 \left\{ 2\left(\frac{x}{a}\right)^2 - \left(\frac{x}{a}\right)^4 \right\} \quad (\text{sjá mynd á vefu síðu}) \quad (15)$$

$$U_0, a > 0$$

a) Krafturinn vegna málisins $U(x)$

$$F(x) = -\frac{d}{dx} U(x) = -\frac{U_0}{a} \left\{ 4\left(\frac{x}{a}\right) - 4\left(\frac{x}{a}\right)^3 \right\}$$

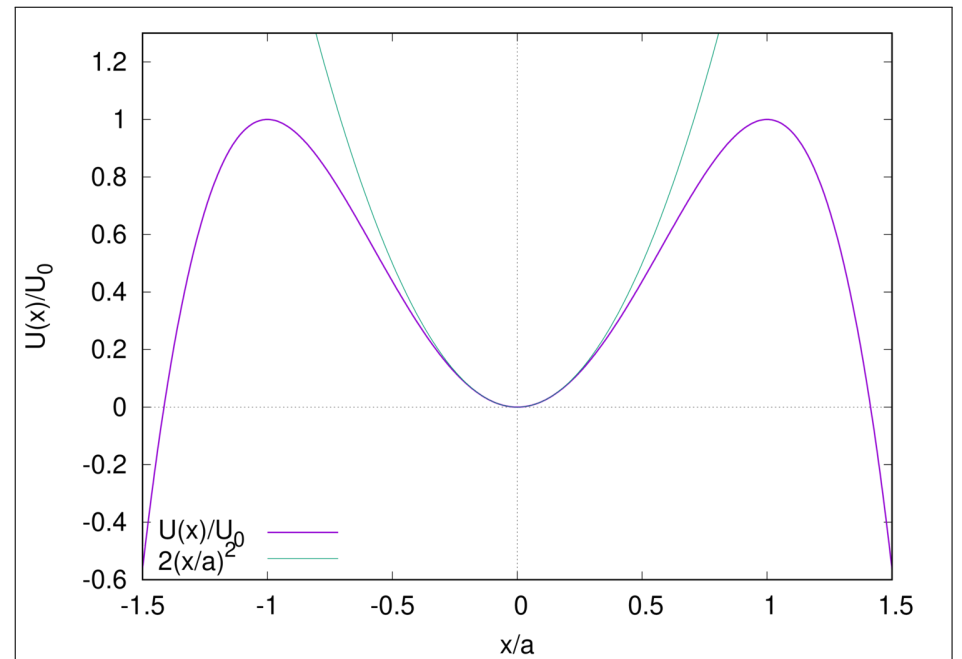
$$= -4\left(\frac{U_0}{a}\right)\left(\frac{x}{a}\right) \left\{ 1 - \left(\frac{x}{a}\right)^2 \right\}$$

b) stöðugt stöðubundið lögmark þ. $x=0$

$$\text{þú þar er } \frac{\partial^2 U}{\partial x^2} > 0$$

Östöðug hámark þegar $\left(\frac{x}{a}\right) = \pm 1$ þú þar gildir

$$\text{er } \frac{\partial^2 U}{\partial x^2} < 0$$



c) Hver er korttíðni sveifluna og hver um $x=0$ þar er málteð

$$U(x) \approx U_0 \frac{2}{a^2} x^2$$

Ein vörður hreintóna sveifill er ~~á~~ hreyfingjöfnu,

$$\ddot{x} + \omega^2 x = 0, \quad \omega = \sqrt{\frac{k}{m}}$$

málteð $U(x) = \frac{1}{2} kx^2$ og kraftinn $F(x) = -kx$

þú er korttíðnin hér

$$\omega = \sqrt{\frac{4U_0}{ma^2}}$$

d) minnsti hraði fyrir ögu til að sleppa frá lögurli í $x=0$. Þá verur hreyfingartíðni í $x=0$ jöfn málteðisortu í $x = \pm a$

$$\frac{mU_{\min}^2}{2} = U(a) = U_0 \rightarrow U_{\min} = \sqrt{\frac{2U_0}{m}}$$

(17)

e) Ef í $t=0$ $x(0) = 0$ og $v = v_{\min}$ Hér er textinn ekki skýr, en ég geri það fyrir að höfundur vilji vita hvernig þessi verk hreyfing lítur út frá $x=0$ að $x=a$

Orkan er vörðveitt, í $x=0$ er

$$E_{\min} = \frac{mU_{\min}^2}{2}, \quad E_{\min} = U_0$$

og í hvernju punkti

$$E_{\min} = \frac{mU^2}{2} + U(x) = \frac{mU^2}{2} + U_0 \left\{ 2\left(\frac{x}{a}\right)^2 - \left(\frac{x}{a}\right)^4 \right\}$$

$$\rightarrow U_0 = \frac{mU^2}{2} + U_0 \left\{ 2\left(\frac{x}{a}\right)^2 - \left(\frac{x}{a}\right)^4 \right\}$$

$$\rightarrow \frac{mU^2}{2} = U_0 - U_0 \left\{ 2\left(\frac{x}{a}\right)^2 - \left(\frac{x}{a}\right)^4 \right\} = U_0 \left\{ 1 - 2\left(\frac{x}{a}\right)^2 + \left(\frac{x}{a}\right)^4 \right\}$$

(18)

$$v = \sqrt{\frac{2U_0}{m} \left\{ 1 - 2\left(\frac{x}{a}\right)^2 + \left(\frac{x}{a}\right)^4 \right\}} = v(x)$$

$$\text{en } v = \frac{dx}{dt} \rightarrow dt = \frac{dx}{v(x)}$$

$$\rightarrow t = \sqrt{\frac{m}{2U_0}} \int_0^x \frac{dx'}{\sqrt{1 - 2\left(\frac{x'}{a}\right)^2 + \left(\frac{x'}{a}\right)^4}} = \sqrt{\frac{ma^2}{2U_0}} \int_0^{\frac{x}{a}} \frac{du}{\sqrt{1 - 2u^2 + u^4}}$$

þegar $\frac{x}{a} < 1$

$$t = \sqrt{\frac{ma^2}{8U_0}} \left\{ \ln \frac{1 + \frac{x}{a}}{1 - \frac{x}{a}} \right\} \rightarrow \frac{t}{\sqrt{\frac{ma^2}{8U_0}}} = \ln \left(\frac{a+x}{a-x} \right)$$

(19)

og þú

$$\exp \left\{ t \sqrt{\frac{8U_0}{ma^2}} \right\} = \frac{a+x}{a-x}$$

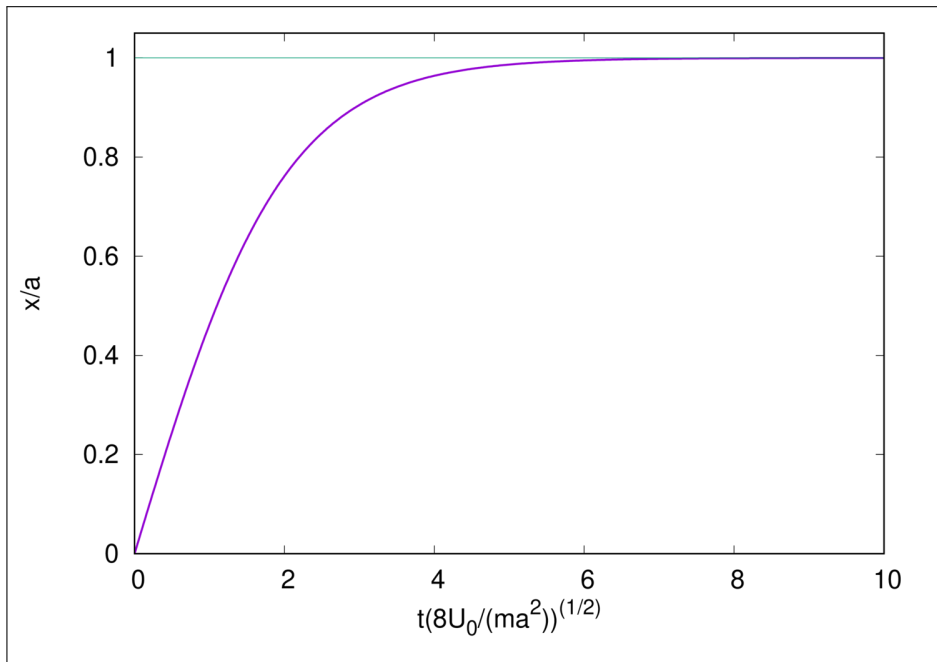
$$\rightarrow x(t) = a \frac{\left\{ \exp \left(t \sqrt{\frac{8U_0}{ma^2}} \right) - 1 \right\}}{\left\{ \exp \left(t \sqrt{\frac{8U_0}{ma^2}} \right) + 1 \right\}}$$

með $\lim_{t \rightarrow \infty} x(t) = a$

ögnin tekur óendanlegan tíma að komast í $x=a$

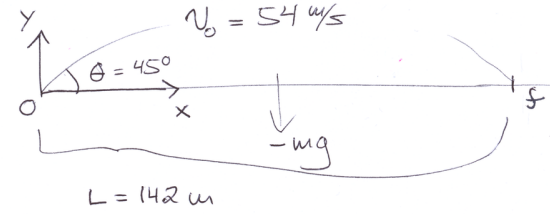
sjá mynd á næstu síðu

(20)



Groskeiv $m = 5 \text{ kg}$, $F = -k v$

á kvörðu k



Hreyfijöfnur

x-páttur: $m a_x = F_x = -k v_x$
 eða $m \frac{dv_x}{dt} = -k v_x \rightarrow \frac{dv_x}{v_x} = -k dt$ ①

→ eins er höft að fá

$\frac{dv_x}{dt} = -k \frac{dx}{dt} \rightarrow dv_x = -k dx$ ②

Heildun ②

$$\int_{v_{x0}}^{v_{xf}} dv'_x = -k \int_0^{x_f} dx'$$

$$v_{xf} - v_{x0} = -k x_f$$

$v_{xf} = v_{x0} \exp(-k t_f)$ ②③

$$x_f = \frac{v_{x0}}{k} \{1 - \exp(-k t_f)\}$$
 (*)

y-páttur:

$$m \frac{dv_y}{dt} = -mg - k v_y$$

$$\rightarrow \frac{dv_y}{dt} = -g - k v_y$$

$$\rightarrow \frac{dv_y}{g + k v_y} = -dt$$
 ③

Heildun ①

$$\int_{v_{y0}}^{v_{yf}} \frac{dv'_y}{v'_y} = -k \int_0^{t_f} dt$$

$$\ln \left\{ \frac{v_{yf}}{v_{y0}} \right\} = -k t_f$$

Eins má umrita hreyfijöfnuna sem

$$\frac{dv_y}{dt} = -g - k \frac{dy}{dt} \rightarrow \frac{dv_y}{dt} + k \frac{dy}{dt} = -g$$

eða

$$dv_y + k dy = -g dt$$

notum $\frac{dy}{dt} = v_y$
 $\rightarrow dt = \frac{dy}{v_y}$

$$dv_y + k dy = -g \frac{dy}{v_y} \rightarrow dv_y = -k dy - g \frac{dy}{v_y} = -(k + \frac{g}{v_y}) dy$$

$$\rightarrow \frac{dy}{v_y} = - \frac{dv_y}{(k v_y + g)}$$

eða

$$dy = - \frac{v_y dv_y}{(k v_y + g)}$$
 ④

heildun ③

$$\int_{u_{y0}}^{u_{yf}} \frac{du_y}{g + ku_y} = - \int_0^{t_f} dt$$

sem gefur

$$\frac{1}{k} \ln \left(\frac{g + ku_{yf}}{g + ku_{y0}} \right) = -t_f$$

þá

$$g + ku_{yf} = (g + ku_{y0}) \exp(-kt_f)$$

heildun ④

$$\int_0^x dy = - \int_{u_{y0}}^{u_{yf}} \frac{u_y du_y}{(ku_y + g)}$$

⑤

$$0 = \frac{g}{k^2} \ln \left\{ \frac{ku_{yf} + g}{ku_{y0} + g} \right\} - \frac{(u_{yf} - u_{y0})}{k}$$

Notum ⑤ og ⑥ til að losna við u_{yf} , sem er óþekkt stöð.

$$\frac{g}{k^2} \ln \left(\frac{ku_{yf} + g}{ku_{y0} + g} \right) = -\frac{g}{k} t_f$$

$$0 = -\frac{g}{k} t_f - \frac{u_{yf} - u_{y0}}{k}$$

$$\frac{g}{k} t_f = -\frac{u_{yf}}{k} + \frac{u_{y0}}{k}$$

$$\frac{g}{k} t_f = + \frac{u_{y0}}{k} - \frac{1}{k^2} (g + ku_{y0}) e^{-kt_f} + \frac{u_{y0}}{k}$$

$$= + \frac{1}{k^2} (g + ku_{y0}) (1 - e^{-kt_f})$$

$$\rightarrow (1 - e^{-kt_f}) = \frac{gkt_f}{g + ku_{y0}}$$

leysu saman með (*):

$$x_f = \frac{u_{x0}}{k} [1 - e^{-kt_f}]$$

tvar jöfnur, tvær óþekktar stöðir t_f og k

(x_f, u_{ox}, u_{oy} þekkt)
 óútlögðar

$$e^{-kt_f} = 1 - \frac{x_f k}{u_{x0}}$$

$$-kt_f = \ln \left(1 - \frac{x_f k}{u_{x0}} \right)$$

sem líka hefur farið

⑦ og ⑧

$$\frac{x_f k}{u_{x0}} = \frac{gkt_f}{g + ku_{y0}}$$

⑨

$$\frac{x_f k}{u_{x0}} = -\frac{g}{g + ku_{y0}} \ln \left(1 - \frac{x_f k}{u_{x0}} \right)$$

ein jafna, ein óþekkt stöð, k

$$-\frac{x_f k}{u_{x0}} \frac{(g + ku_{y0})}{g} = \ln \left(1 - \frac{x_f k}{u_{x0}} \right)$$

$$\rightarrow \exp \left\{ -\frac{x_f k (g + ku_{y0})}{u_{x0} g} \right\} = 1 - \frac{x_f k}{u_{x0}}$$

$$x_f = \frac{u_{x0}}{k} \left\{ 1 - \exp \left[-\frac{x_f k (g + ku_{y0})}{u_{x0} g} \right] \right\}$$

$k \rightarrow 0$ skilur hvernig hluturinn stöðvirðir á x_f , eins og áður er sýnt

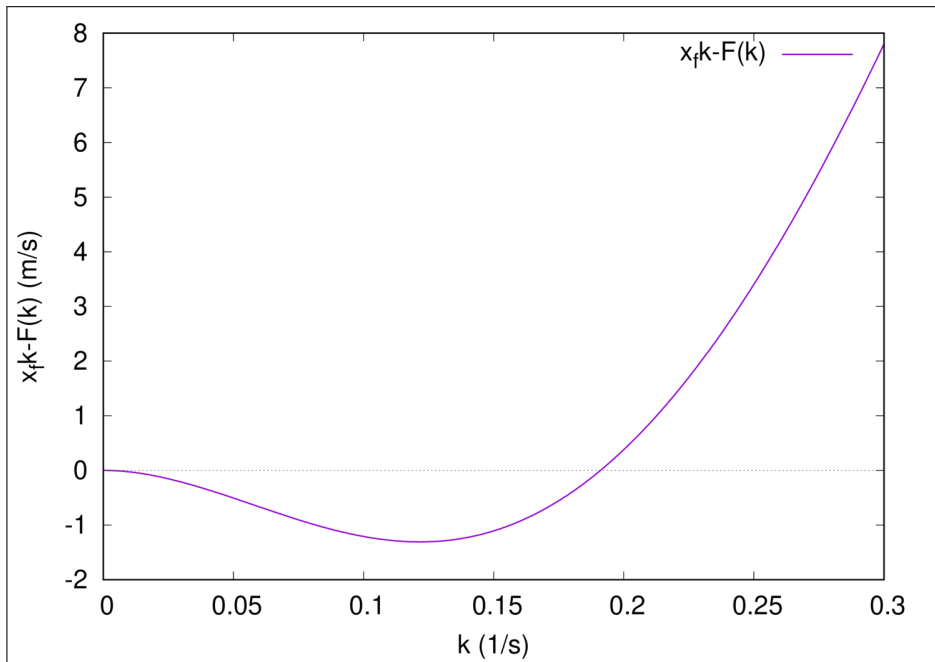
óútlögð jafna sem við leysum tölulega

$u_0 = 54 \text{ m/s}$, $x_f = 142 \text{ m}$, $u_{oy} = 54 \cdot \cos(\frac{\pi}{4}) \approx 38.2 \text{ m/s}$
 $\theta = 45^\circ$, $g = 9.81 \text{ m/s}^2$, $x_f k = F(k)$

leysu

$$x_f k - F(k) = 0$$

Groft á nokkursvona sýmir að $k=0$ er lausn, eins og við höfum séð áður, en líka sést önnur lausn sem $w \times \text{Maxima}$ gefur sem $k = 0.19105 \dots \text{s}^{-1}$



```
(%i2) find_root(142-x-38.2*(1-exp(-(142*x+(9.81+x*38.2)))/(38.2*9.81)))=0, x, 0.1, 0.3);
```

```
(%o2) 0.1910528801334695
```

Created with [wxMaxima](#).

3-15

$$x(t) = A e^{-\beta t} \cos(\omega_1 t - \delta)$$

$$\dot{x}(t) = -A e^{-\beta t} \left\{ \beta \cos(\omega_1 t - \delta) + \omega_1 \sin(\omega_1 t - \delta) \right\}$$

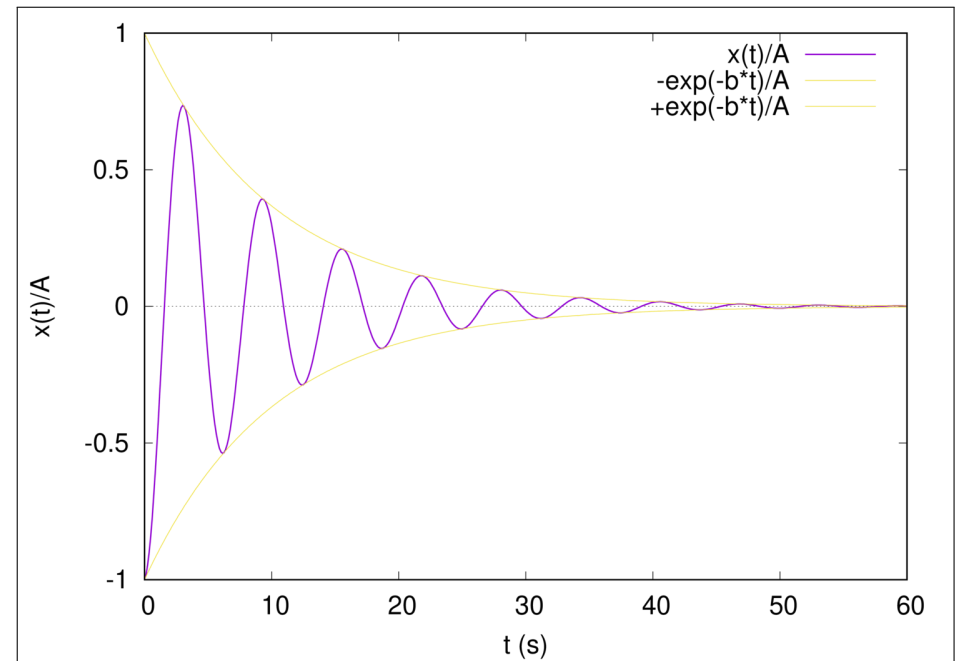
$$\omega_1 = \sqrt{\omega_0^2 - \beta^2}$$

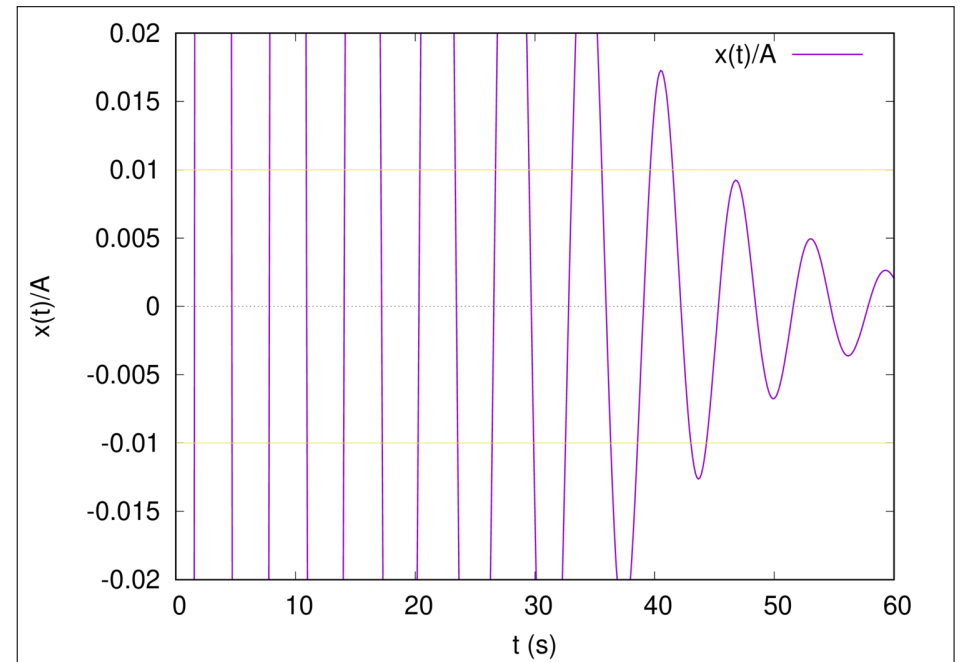
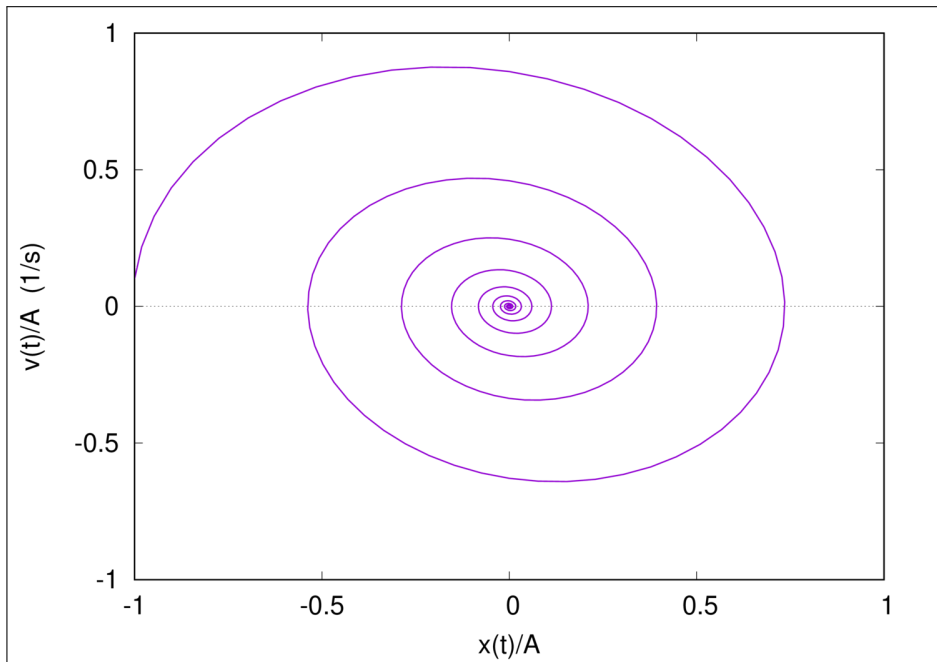
$$A = 1, \omega_0 = 1 \text{ rad/s}$$

$$\beta = 0.1 \text{ s}^{-1} \quad \delta = \pi \text{ rad}$$

Har marginer sejter adur en $\frac{x}{A} < 10^{-2}$

sja vad for 3 gröt par sem $t \in [0, 60]$ s





3-42

Ordningur kreintöna sölufüll.

$$m\ddot{x} + m\omega_0^2 x = \Theta(t) F_0 \sin(\omega t)$$

upphafsstærðir

$$\begin{aligned} x(0) &= 0 \\ v(0) &= 0 \end{aligned}$$

Finna lausn þegar $\omega \rightarrow \omega_0$

Almenn lausn óhliðruðu jöfnunnar

$$x(t) = A \sin(\omega_0 t) + B \cos(\omega_0 t)$$

einserstök lausn

$$C \sin(\omega t) \rightarrow (-m\omega^2 + m\omega_0^2) C = F_0 \quad (*)$$

$$\rightarrow x(t) = A \sin(\omega_0 t) + B \cos(\omega_0 t) + C \sin(\omega t)$$

$$0 = B \cos(\omega_0 t) \rightarrow B = 0$$

$$0 = A\omega_0 + C\omega \rightarrow$$

5

$$(*) \rightarrow C = \frac{F_0}{m(\omega_0^2 - \omega^2)} \quad \text{og þú} \quad A\omega_0 = -\frac{F_0\omega}{m(\omega_0^2 - \omega^2)} \quad (6)$$

$$A = -\frac{F_0\omega}{m\omega_0} \frac{1}{(\omega_0^2 - \omega^2)}$$

$$\rightarrow x(t) = -\frac{F_0\omega}{m\omega_0} \frac{\sin(\omega_0 t)}{(\omega_0^2 - \omega^2)} + \frac{F_0 \sin(\omega t)}{m(\omega_0^2 - \omega^2)}$$

$$= \frac{F_0}{m\omega_0} \frac{1}{(\omega_0^2 - \omega^2)} \left\{ \omega_0 \sin(\omega t) - \omega \sin(\omega_0 t) \right\}$$

b)

$$x(t) = \frac{F_0}{m\omega_0(\omega_0 + \omega)} \left\{ \frac{\omega_0 \sin(\omega t) - \omega \sin(\omega_0 t)}{\omega_0 - \omega} \right\}$$

$$\lim_{\omega \rightarrow \omega_0} \left\{ \frac{\omega_0 \sin(\omega t) - \omega \sin(\omega_0 t)}{\omega_0 - \omega} \right\} = \sin(\omega_0 t) - (\omega_0 t) \cos(\omega_0 t)$$

→ fyrir $\omega \rightarrow \omega_0$

$$x(t) = \frac{F_0}{2m\omega_0^2} \left\{ \sin(\omega_0 t) - (\omega_0 t) \cos(\omega_0 t) \right\}$$

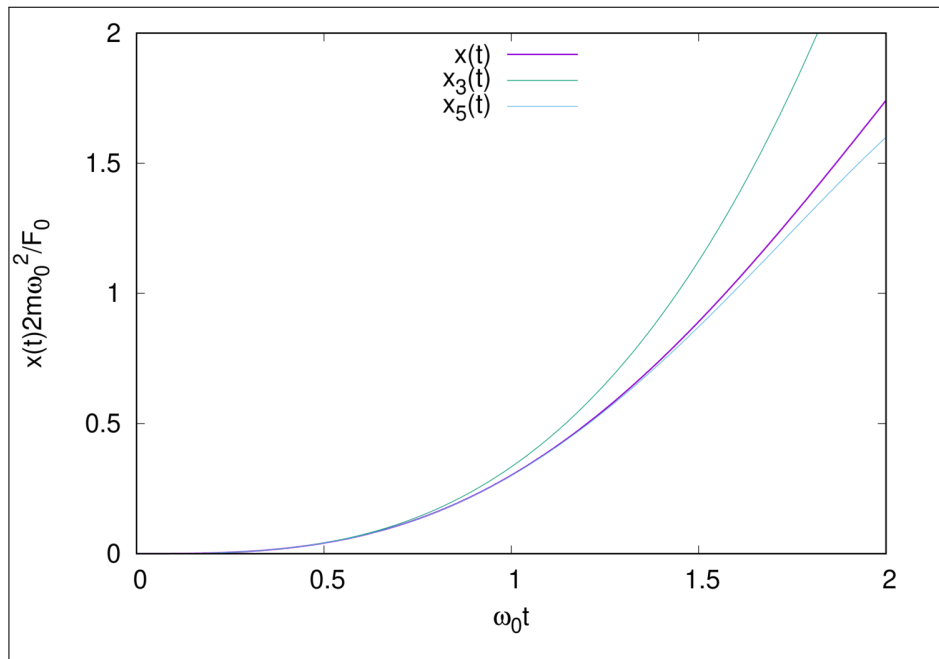
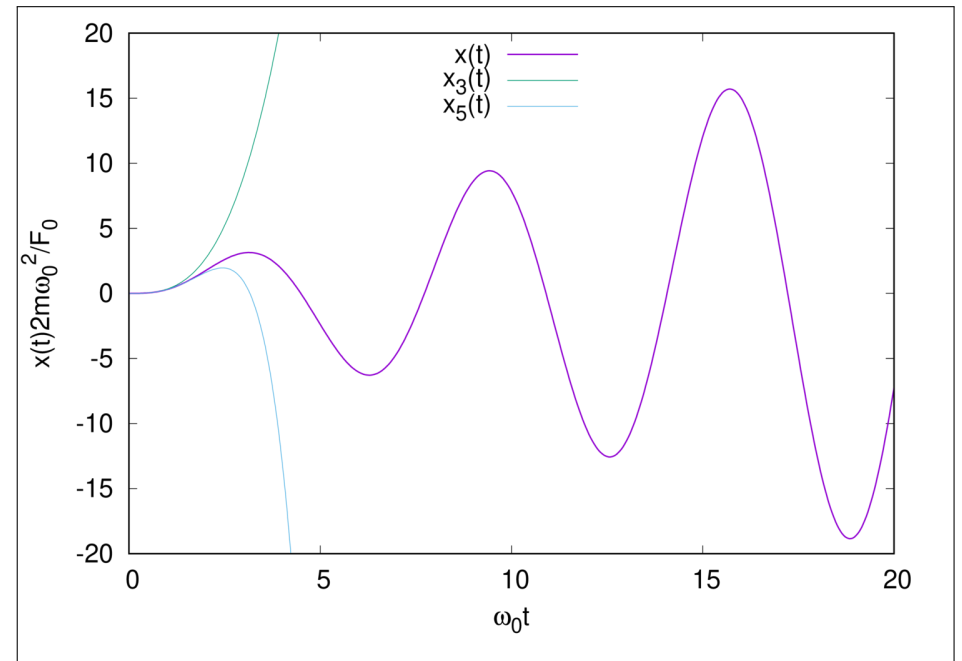
Síðan má sjá

$$x(t) = \frac{F_0}{2m\omega_0^2} \left\{ \frac{(\omega_0 t)^3}{3} - \frac{(\omega_0 t)^5}{30} + \dots \right\}$$

fyrir $(\omega_0 t) \rightarrow 0$

$x_3(t)$

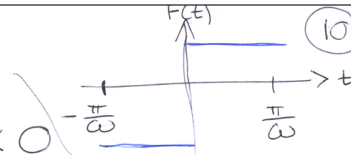
$x_5(t)$



3-28

Fourier ríð fyrir

$$F(t) = \begin{cases} -1 & -\frac{\pi}{\omega} < t < 0 \\ +1 & 0 < t < \frac{\pi}{\omega} \end{cases}$$



Öðrastað fall

$$F(t) = \sum_{n=1}^{\infty} b_n \sin(n\omega t)$$

$$b_n = \frac{\omega}{\pi} \int_{-\pi/\omega}^{\pi/\omega} dt' F(t') \sin(n\omega t')$$

$$= \frac{\omega}{\pi} \left[- \int_{-\pi/\omega}^0 dt' \sin(n\omega t') + \int_0^{\pi/\omega} dt' \sin(n\omega t') \right]$$

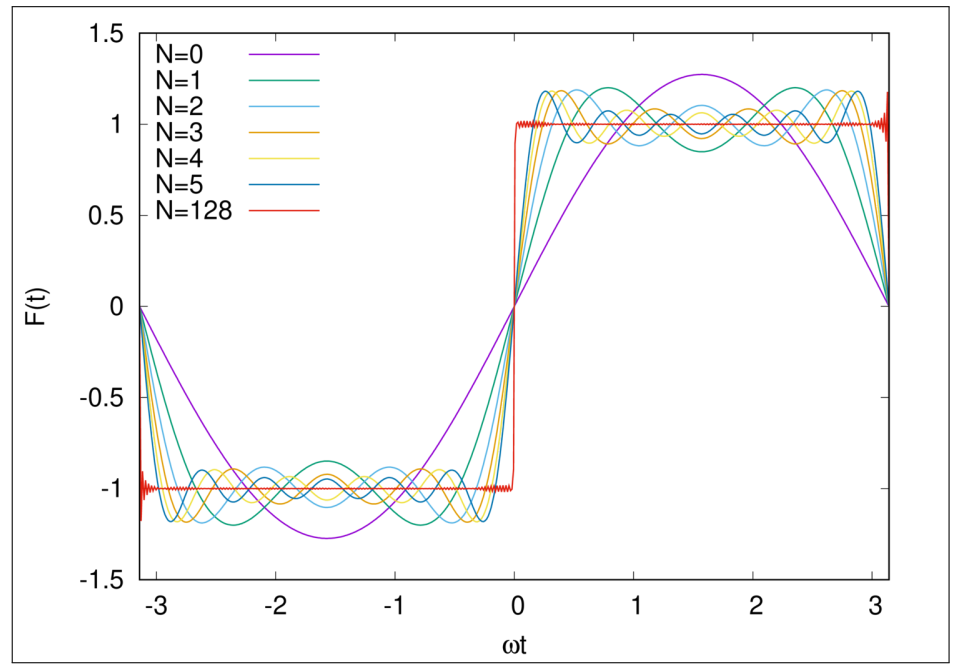
10

$$= \frac{\omega}{\pi} \left\{ \frac{\cos(n\omega t)}{n\omega} \Big|_{-\pi/\omega}^0 + \left(-\frac{\cos(n\omega t)}{n\omega} \Big|_0^{\pi/\omega} \right) \right\}$$

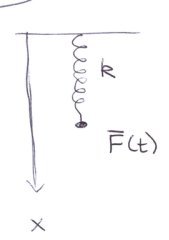
$$= -\frac{\omega}{\pi} \left\{ 2 \frac{\cos(n\pi)}{n\omega} - 2 \frac{\cos(0)}{n\omega} \right\}$$

$$= \frac{2}{\pi n} \left\{ 1 - \cos(n\pi) \right\} = \begin{cases} \frac{4}{\pi n} & n \text{ odd} \\ 0 & n \text{ even} \end{cases}$$

$$\rightarrow F(t) = \frac{4}{\pi} \sum_{n=0,1,2,\dots}^{\infty} \frac{\sin((2n+1)\omega t)}{(2n+1)}$$



03-09



$$\bar{F}(t) = \theta(t)\theta(t_0-t)F$$

$$0 < t < t_0$$

$$m\ddot{x} = -k(x-x_0) + F$$

$$t > t_0$$

$$m\ddot{x} = -k(x-x_0)$$

Sgva að eftir t_0 sé lausnin

$$x - x_0 = \frac{F}{k} \left\{ \cos(\omega_0(t-t_0)) - \cos(\omega_0 t) \right\}$$

með $\omega_0^2 = \frac{k}{m}$

Skipta um breytu $y = x - x_0$

$$\rightarrow \text{Heypfjórnam verður} \begin{cases} m\ddot{y} = -ky + F & \text{p. } 0 < t < t_0 \text{ (1)} \\ m\ddot{y} = -ky & \text{p. } t > t_0 \text{ (2)} \end{cases}$$

Lausn (2) er

$$y(t) = Ae^{i\omega t} + Be^{-i\omega t}, \quad \omega = \sqrt{\frac{k}{m}} \quad t > t_0$$

Lausn (1) er

$$y(t) = Ce^{i\omega t} + De^{-i\omega t} + \frac{F}{k} \quad 0 < t < t_0$$

→ Þar sem síðasti liðurinn er sérlausn á hljóðinu jöfnunni (1)

Veljum upphafsstýringi

$$\begin{aligned} y(0) &= 0 \\ \dot{y}(0) &= 0 \end{aligned} \quad \Leftarrow \quad \begin{aligned} &F(t) \text{ kemur kerfinu} \\ &\text{í gang} \dots \end{aligned}$$

$$\left. \begin{aligned} y(0) = 0 &\rightarrow C + D + \frac{F}{R} = 0 \\ \dot{y}(0) = 0 &\rightarrow i\omega C - i\omega D = 0 \end{aligned} \right\} \rightarrow C = D = -\frac{F}{2R} \quad (15)$$

lausnin er samfeld i t_0 , bæði y og \dot{y}

$$y(t_0^-) = y(t_0^+)$$

$$-\frac{F}{2R} e^{i\omega t_0} - \frac{F}{2R} e^{-i\omega t_0} + \frac{F}{R} = A e^{i\omega t_0} + B e^{-i\omega t_0}$$

$$\dot{y}(t_0^-) = \dot{y}(t_0^+)$$

$$-\frac{F}{2R} i\omega e^{i\omega t_0} + \frac{F}{2R} i\omega e^{-i\omega t_0} = i\omega A e^{i\omega t_0} - i\omega B e^{-i\omega t_0}$$

$$\frac{F}{R} \{1 - \cos(\omega t_0)\} = A e^{i\omega t_0} + B e^{-i\omega t_0} \quad (16)$$

$$-\frac{F}{R} \sin(\omega t_0) = A e^{i\omega t_0} - B e^{-i\omega t_0}$$

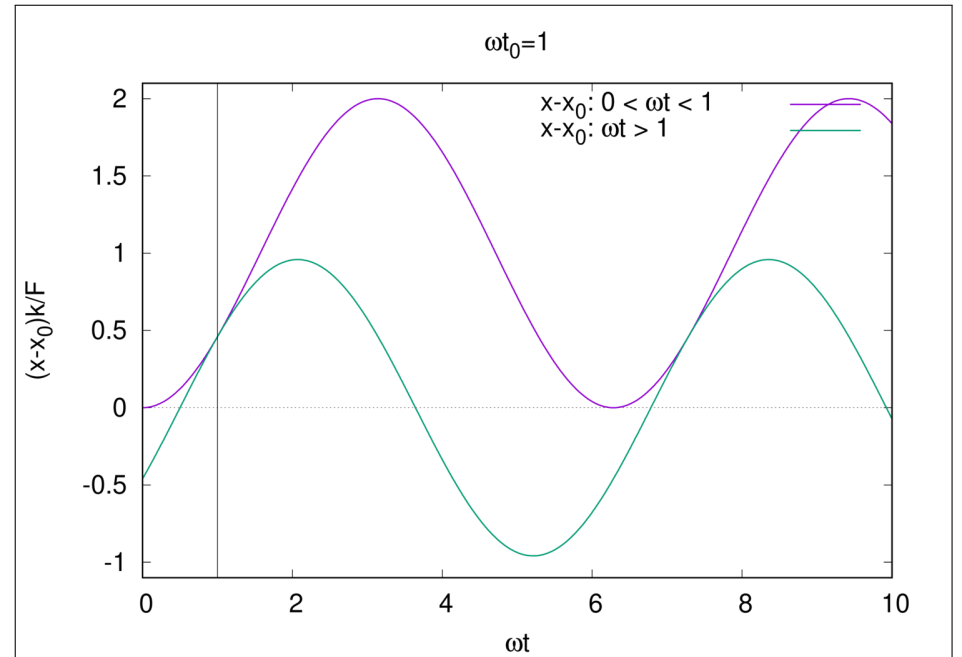
$$\begin{pmatrix} e^{i\omega t_0} & e^{-i\omega t_0} \\ e^{i\omega t_0} & -e^{-i\omega t_0} \end{pmatrix} \begin{pmatrix} A \\ B \end{pmatrix} = \frac{F}{R} \begin{pmatrix} 1 - \cos(\omega t_0) \\ -\sin(\omega t_0) \end{pmatrix}$$

$$\rightarrow \begin{cases} A = \frac{F}{2R} e^{-i\omega t_0} (1 - e^{+i\omega t_0}) \\ B = \frac{F}{2R} e^{+i\omega t_0} (1 - e^{-i\omega t_0}) \end{cases}$$

lausnin

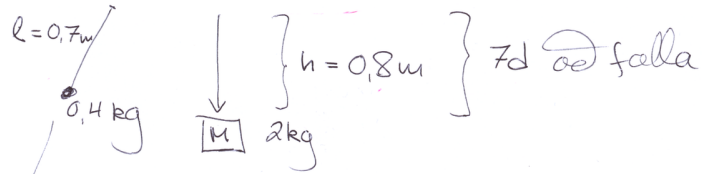
$$y(t) = \frac{F}{R} \left\{ 1 - \frac{e^{i\omega t}}{2} - \frac{e^{-i\omega t}}{2} \right\} = \frac{F}{R} \{1 - \cos(\omega t)\}, \quad 0 < t < t_0 \quad (17)$$

$$y(t) = \frac{F}{2R} \left\{ e^{i\omega(t-t_0)} (1 - e^{i\omega t_0}) + e^{-i\omega(t-t_0)} (1 - e^{-i\omega t_0}) \right\} = \frac{F}{R} \{ \cos(\omega(t-t_0)) - \cos(\omega t) \}, \quad t > t_0$$



3-45

Finna Q fyrir klutta, $Q = \frac{\omega_R}{2\beta}$



$\theta_{max} = 0,03$

$\omega_R^2 = \omega_0^2 - 2\beta^2, \omega_0 = \sqrt{\frac{g}{l}}$

fyrir veita deyfingu erlausum fyrir sveifluna

$\theta(t) = \theta_{max} \cdot e^{-\beta t}$ p.s. β er dæmuvörstudullinn úr hreyfijöfnunni

$\ddot{\theta} + 2\sqrt{\frac{g}{l}} \dot{\theta} + \frac{g}{l} \theta = 0$

hér vantar í reum lid sem betur er ortu

21

$E_p(t) - E_p(0) \approx mgl \theta_{max}^2 \beta t$

þess vegna fyrir tíma bilid τ

$mgl \theta_{max}^2 \beta T \left(\frac{\tau}{T}\right) = mgl \theta_{max}^2 \beta \tau$

sú ortu verður að vera jöfnu stöðu ortu M

$\rightarrow mgl \theta_{max}^2 \beta \tau = Mgh$

$\rightarrow \beta = \frac{Mh}{m l \theta_{max}^2 \tau}$

$Q = \frac{\omega_R}{2\beta} = \frac{\sqrt{\frac{g}{l} - 2\beta^2}}{2\beta} = \frac{1}{2} \sqrt{\frac{g}{2\beta^2} - 2}$
 $= \frac{1}{2} \sqrt{\frac{gm^2 l \theta_{max}^4 \tau^2}{M^2 h^2} - 2} \approx 178.3$

19

03-23

þarftum að meta max gæði á β sem er þannig að ortan út úr kerfinu jafnist á við stöðu ortu Lóts

$E_{pot} = Mgh$

sem vegir í 7d t.a. kalda þú gangandi, $\tau = 7d$
Upphafsorta punktis

$E_p(\theta) = \frac{1}{2} mgl \theta^2$

Lota hans er $T = 2\pi \sqrt{\frac{l}{g}}$

$\rightarrow E_p(T) = \frac{1}{2} mgl \theta^2(T) = \frac{1}{2} mgl \theta_{max}^2 e^{-2\beta T}$

þú er ortan týnd í einni sveiflu

$E_p(T) - E_p(0) = \frac{1}{2} mgl \theta_{max}^2 \{1 - e^{-2\beta T}\}$

22

03-23

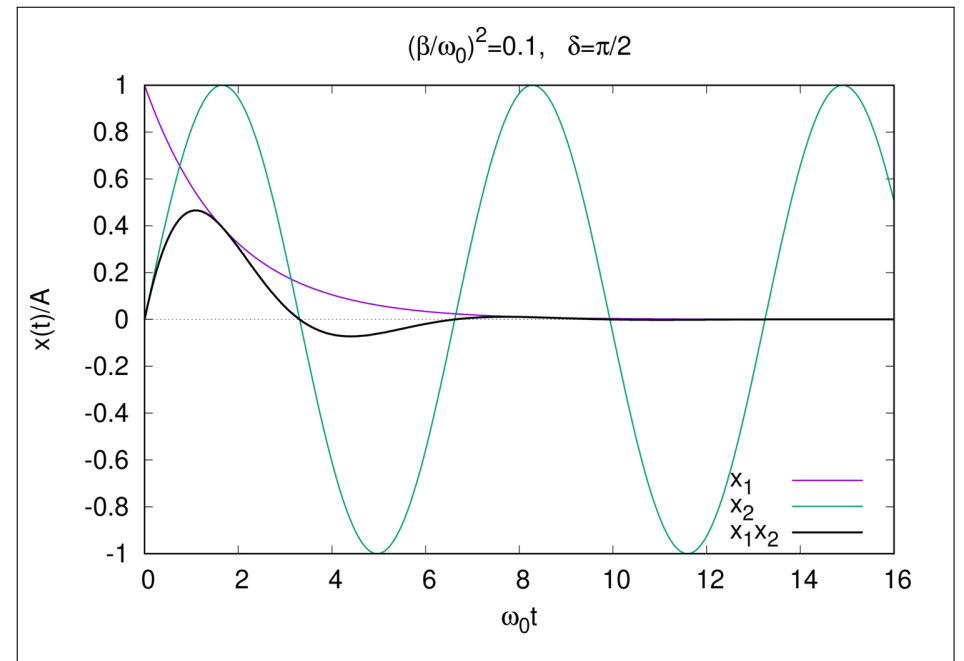
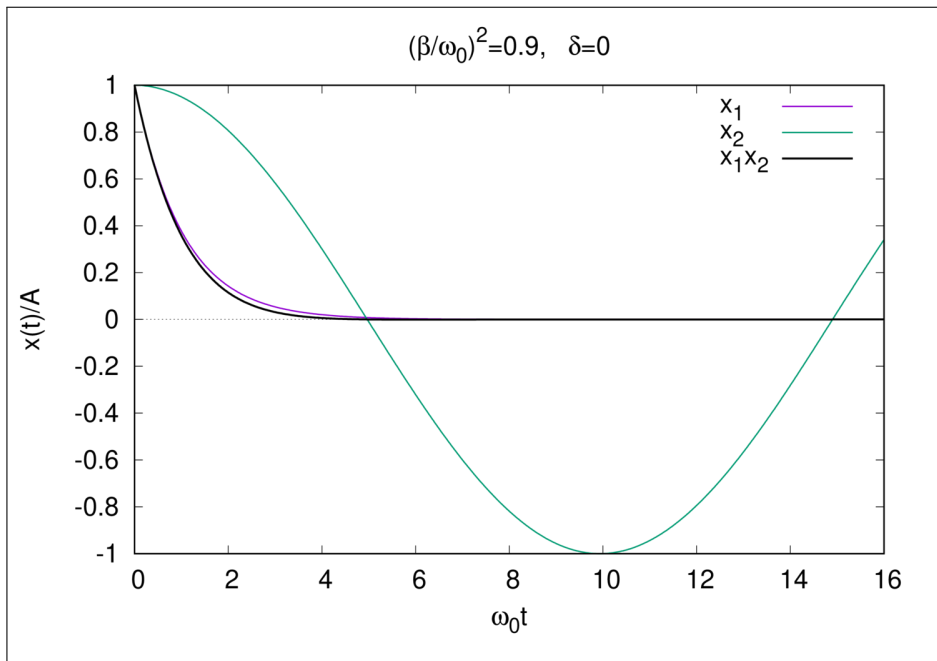
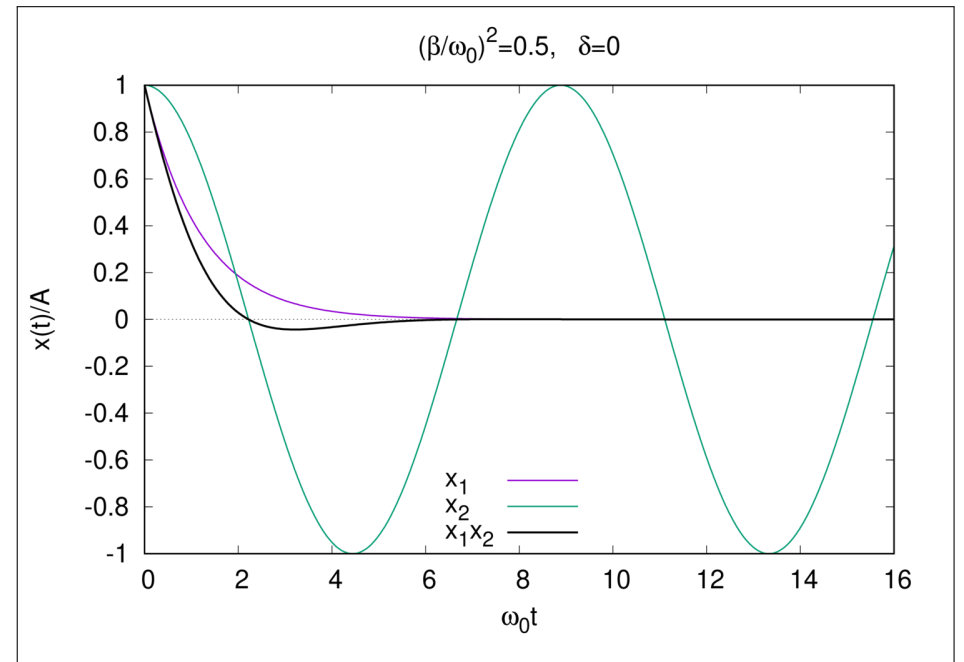
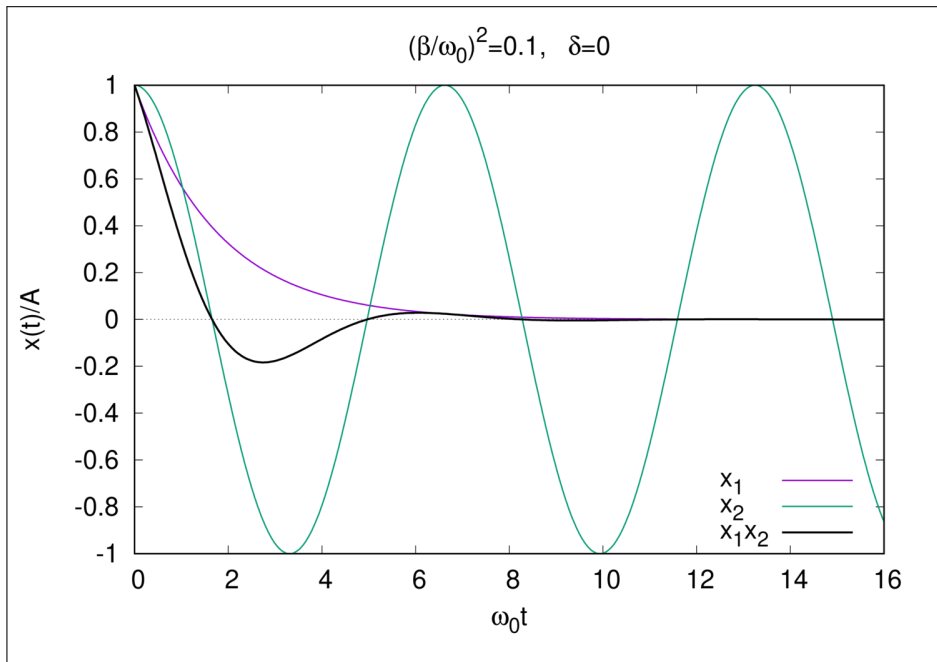
$x(t) = A e^{-\beta t} \cos(\omega_1 t - \delta)$

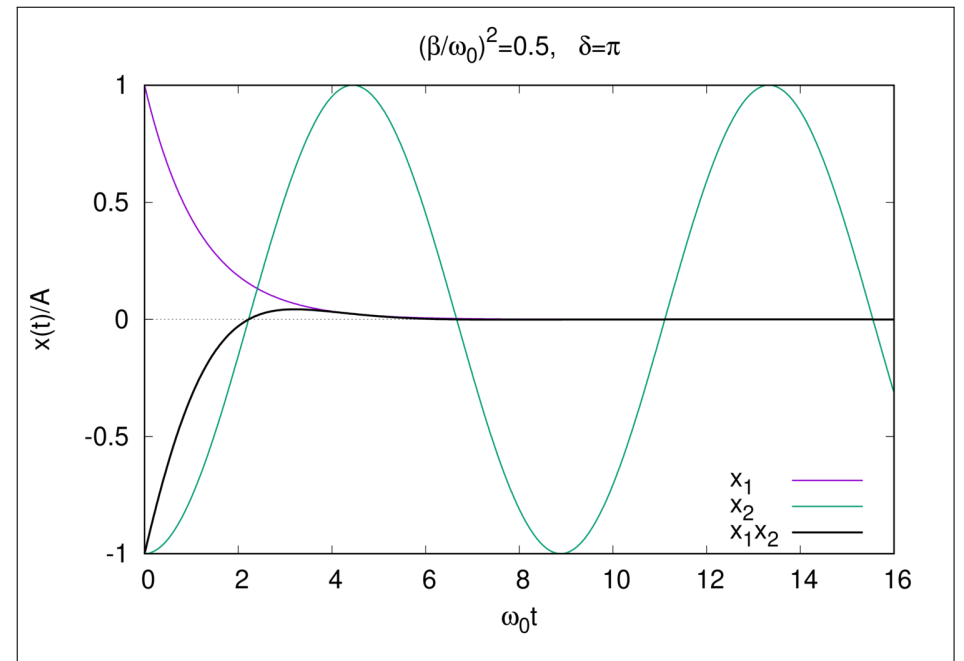
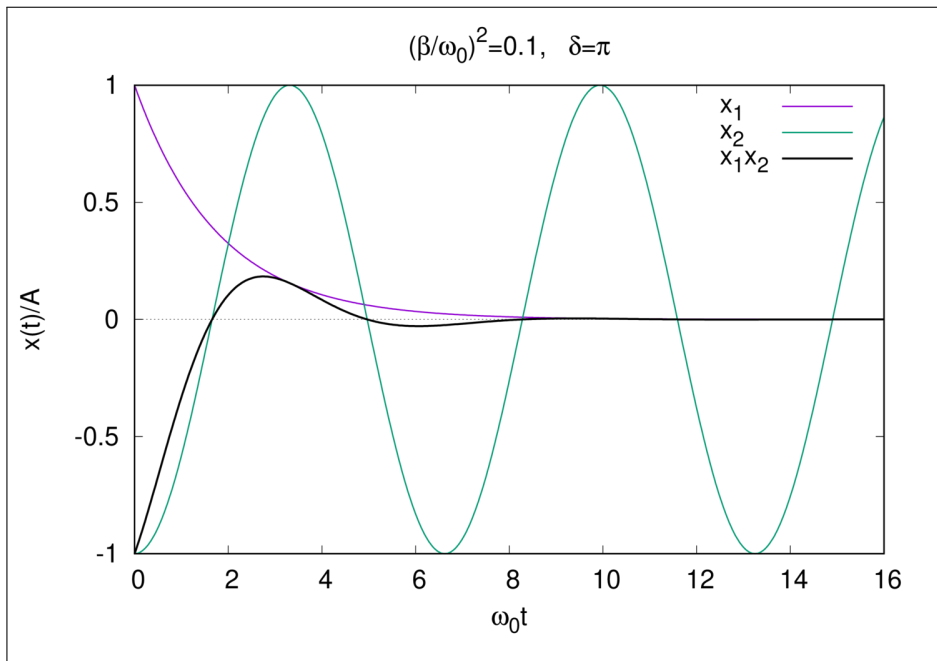
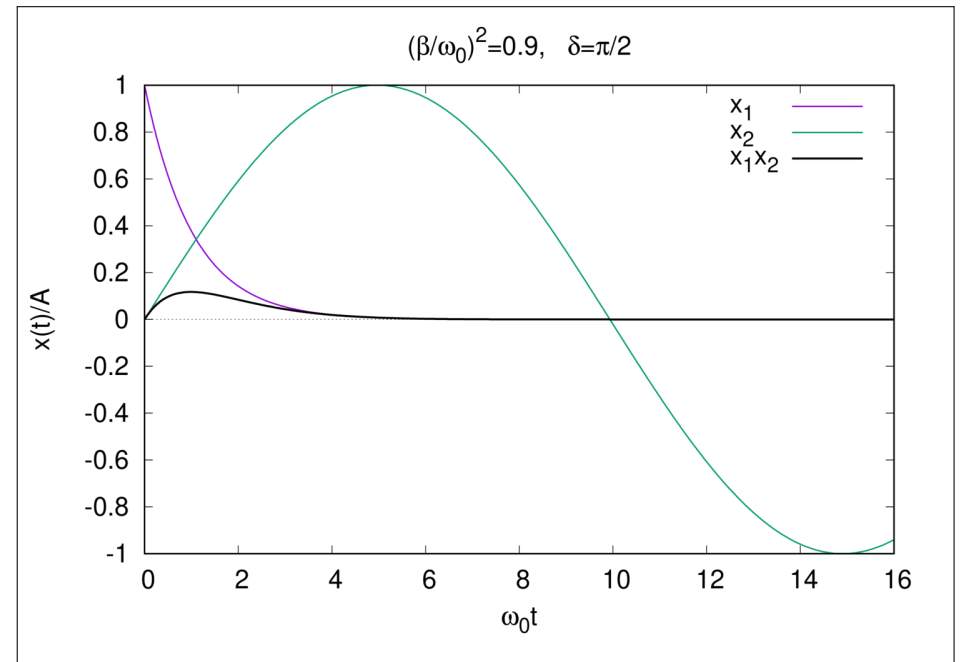
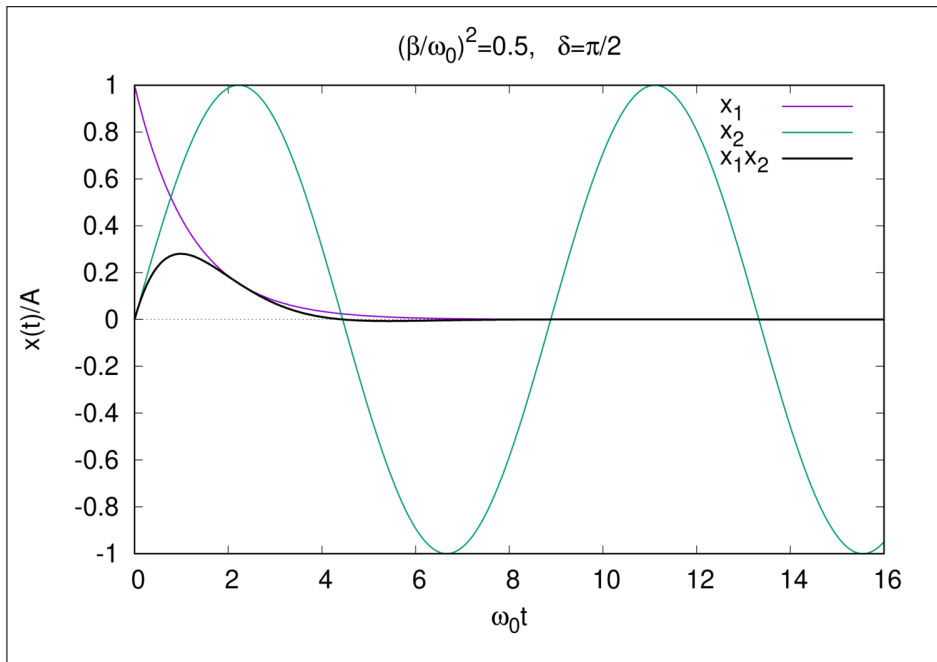
$\omega_1 = \sqrt{\omega_0^2 - \beta^2} = \omega_0 \sqrt{1 - \frac{\beta^2}{\omega_0^2}}$

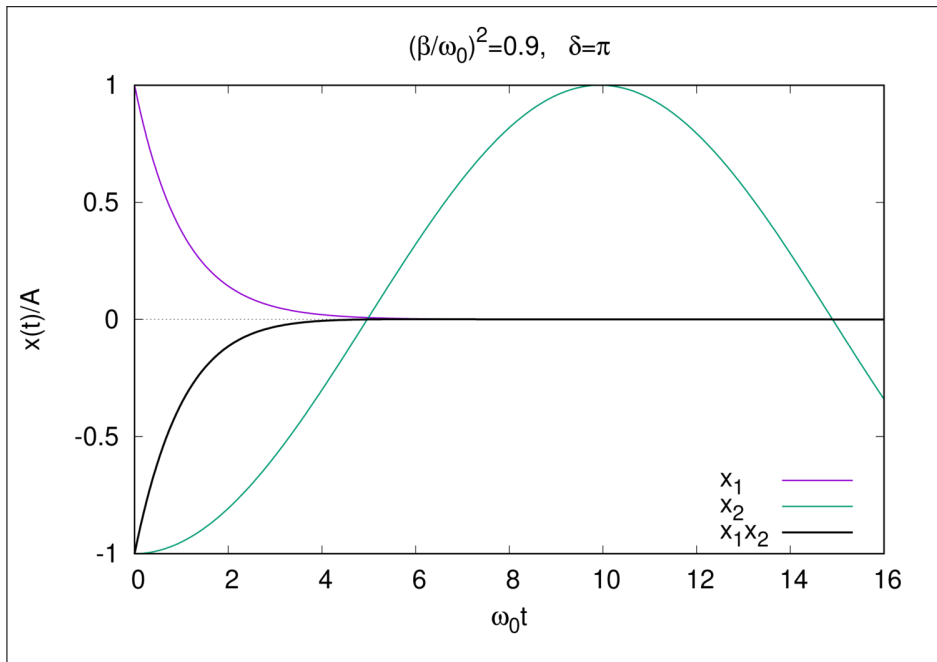
$\frac{\beta^2}{\omega_0^2} = 0.1, 0.5, 0.9 \quad \delta = 0, \frac{\pi}{2}, \pi$

$\frac{x(t)}{A} = \underbrace{\exp\left\{-\left(\frac{\beta}{\omega_0}\right)t\omega_0\right\}}_{X_1(t)} \underbrace{\cos\left\{t\omega_0 \sqrt{1 - \left(\frac{\beta}{\omega_0}\right)^2} - \delta\right\}}_{X_2(t)}$

Gröfum fylgja







04-06 Einvíður pendull með massa m og lengd l ①

Stöðuorka, mætti: $-U = mgl \{-\cos\theta\}$

Hreyfiorka: $T = \frac{1}{2} m v^2 = \frac{1}{2} m l^2 \dot{\theta}^2$

Mættið $U(\theta)$ er lotubandið eins og sést á mynd á síðu ③.

Könnun feril í fasa rúmnum $\{\theta, \dot{\theta}\}$ fyrir orku $\frac{1}{2} mgl$ og sítu hvorn megin við. Þ.e. þegar hreyfingin er að verða hringur í $\{t, \theta\}$ sláttunni

$E = T + U$, ekkert tap
 $= \frac{1}{2} m l^2 \dot{\theta}^2 + mgl \{1 - \cos\theta\}$

②

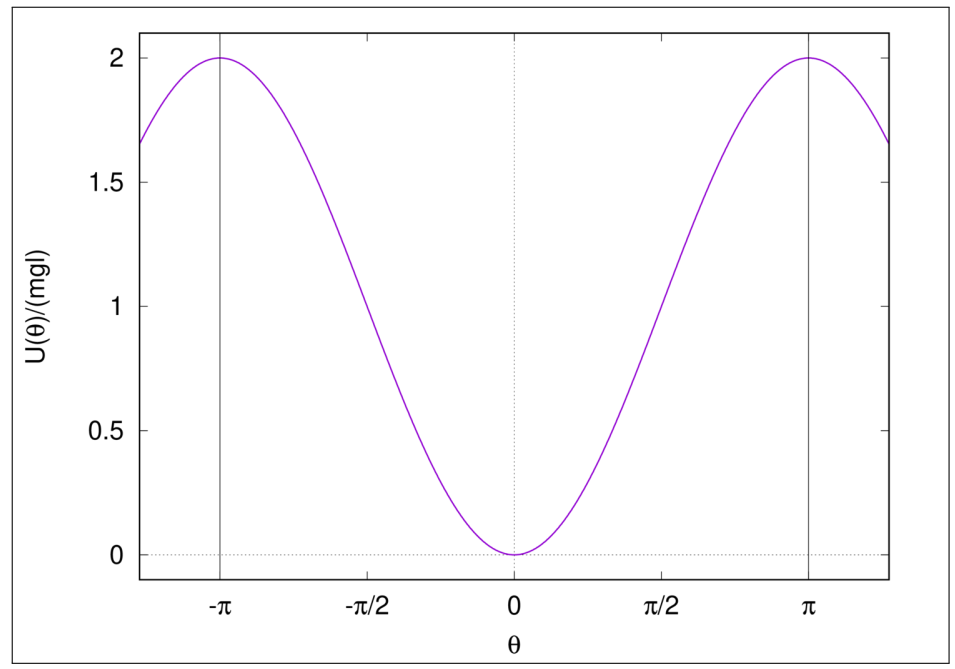
$\rightarrow \frac{1}{2} m l^2 \dot{\theta}^2 = E - mgl \{1 - \cos\theta\}$

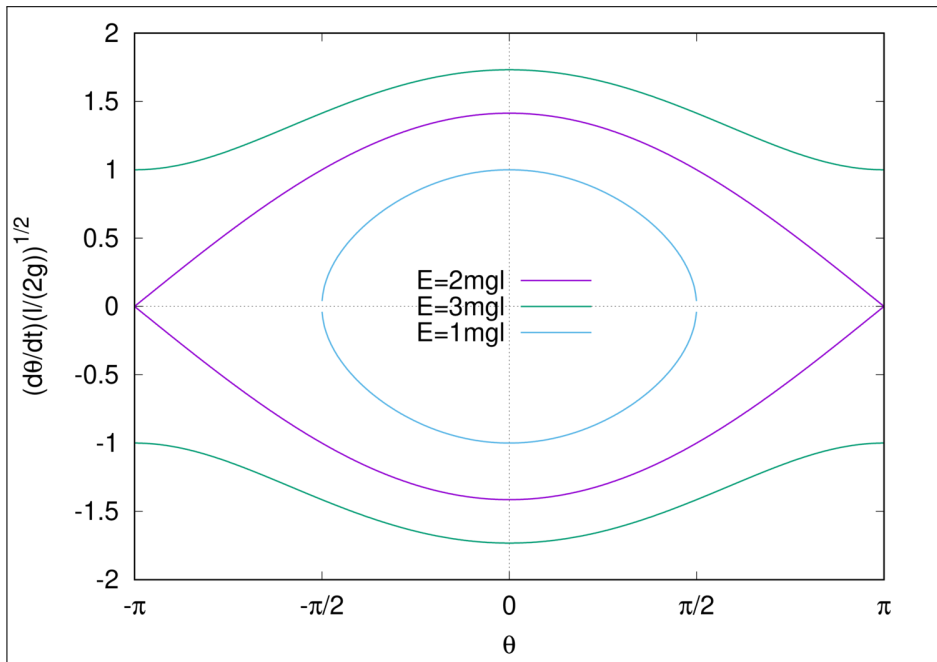
$\rightarrow \dot{\theta}^2 = \frac{2}{m l^2} [E - mgl \{1 - \cos\theta\}]$

$\rightarrow \dot{\theta} = \sqrt{\frac{2}{m l^2} [E - mgl \{1 - \cos\theta\}]}^{1/2}$ ↑ munum eftir tölum róttum hér

fyrir graf: $\dot{\theta} = \sqrt{\frac{2g}{l} \left[\frac{E}{mgl} - (1 - \cos\theta) \right]}^{1/2}$ sjá mynd á síðu ④

$\rightarrow \dot{\theta} \sqrt{\frac{l}{2g}} = \left[\frac{E}{mgl} - (1 - \cos\theta) \right]^{1/2}$ Edlisger vörð-
lausir breytur
fyrir graf





04-09 Taplaus hreyfing í krafti ⑥

$$F(x) = \begin{cases} -kx & |x| < a \\ -(k+s)x + sa & |x| > a \end{cases}$$

Kraftinum má ljáa með matlinu ($F = -\frac{d}{dx}U$)

$$U(x) = \begin{cases} \frac{kx^2}{2} & |x| < a \\ \frac{(k+s)x^2}{2} - sax & |x| > a \end{cases}$$

Stöllum fyrir graf

$$= \begin{cases} \frac{ka^2}{2} \left(\frac{x}{a}\right)^2 & \left|\frac{x}{a}\right| < 1 \\ \frac{(k+s)a^2}{2} \left(\frac{x}{a}\right)^2 - sa^2 \left(\frac{x}{a}\right) & \left|\frac{x}{a}\right| > 1 \end{cases}$$

8

$$E = T + U, \quad T = \frac{1}{2} m v^2 = \frac{1}{2} m \dot{x}^2$$

Variablaust

$$T = E - U \rightarrow \frac{1}{2} m v^2 = E - U(x)$$

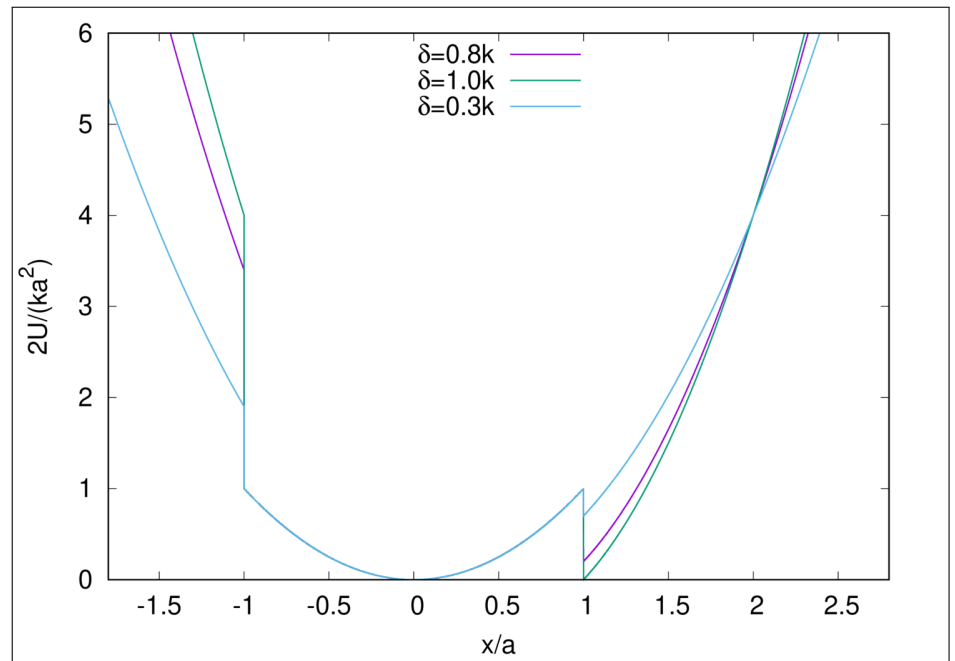
$$v = \sqrt{\frac{2}{m} (E - U(x))} = \sqrt{\frac{2}{m} \left(E - \frac{ka^2}{2} V(x) \right)^{1/2}}$$

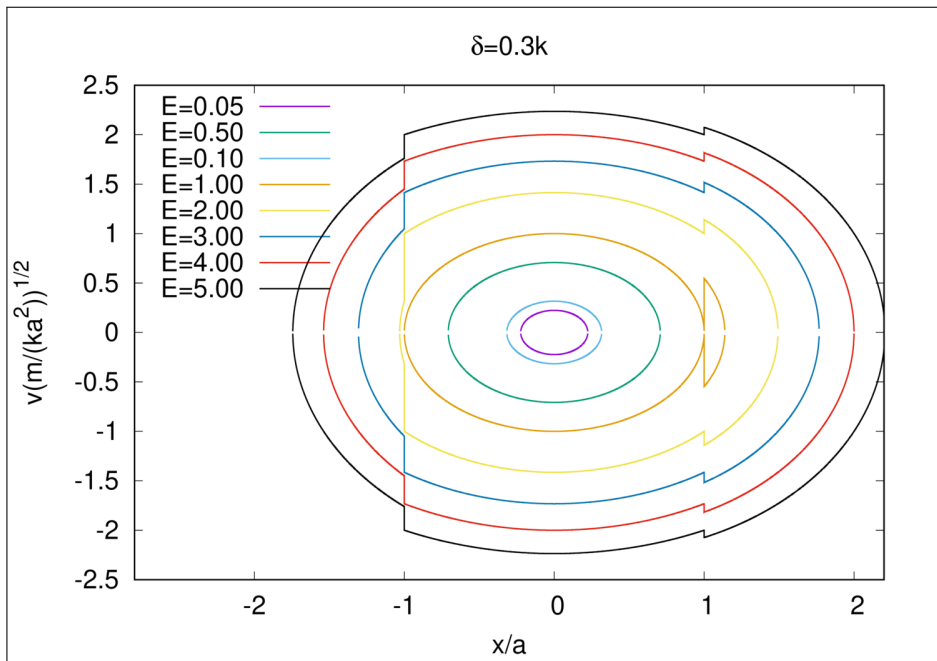
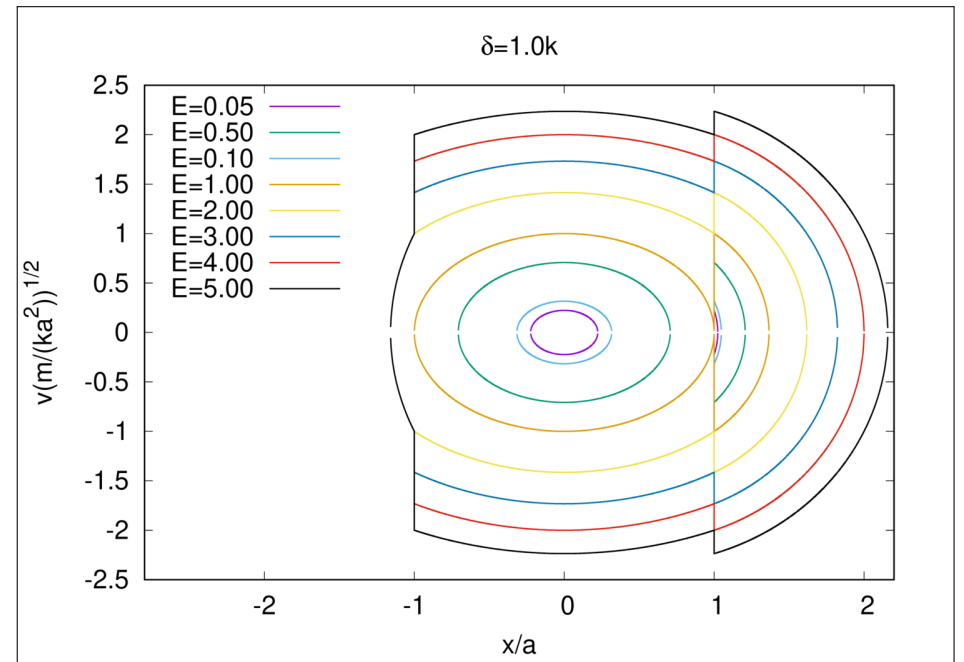
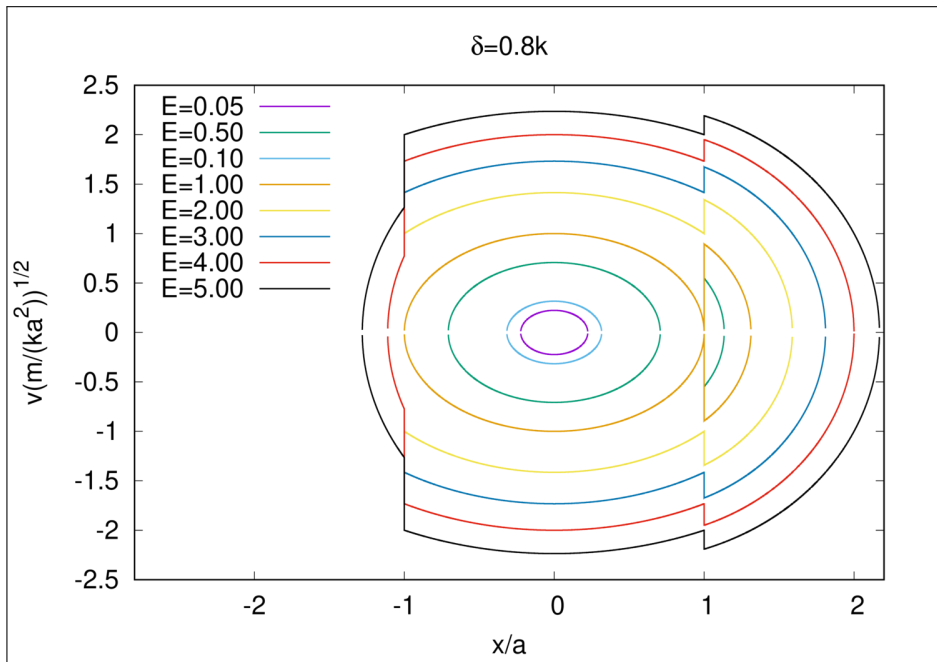
$$v = \sqrt{\frac{2}{m} \frac{ka^2}{2} \left(\frac{2E}{ka^2} - V(x) \right)^{1/2}}$$

$$= \sqrt{\frac{ka^2}{m} \left(\frac{2E}{ka^2} - V(x) \right)^{1/2}}$$

Stöllum orku notað á grófum á í foraræminu

Gröfin eru á nafni 3 síðum





(13)

(04-03)

$$U(x) = -\left(\frac{\lambda}{3}\right)x^3$$

Eins og \tilde{e} domina á undan er

$$v = \sqrt{\frac{2}{m}} \left(E - U(x) \right)^{1/2}$$

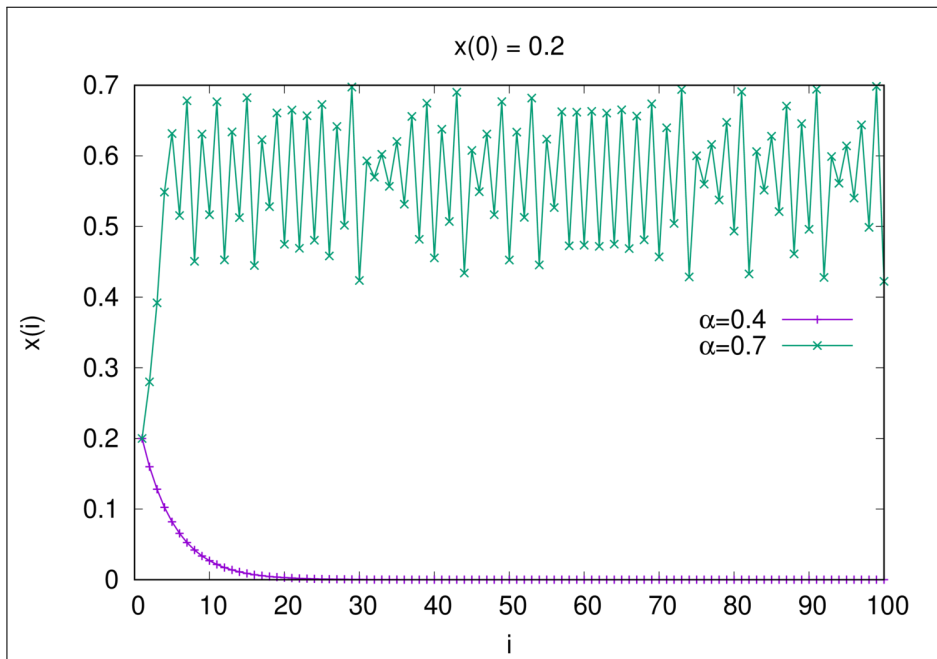
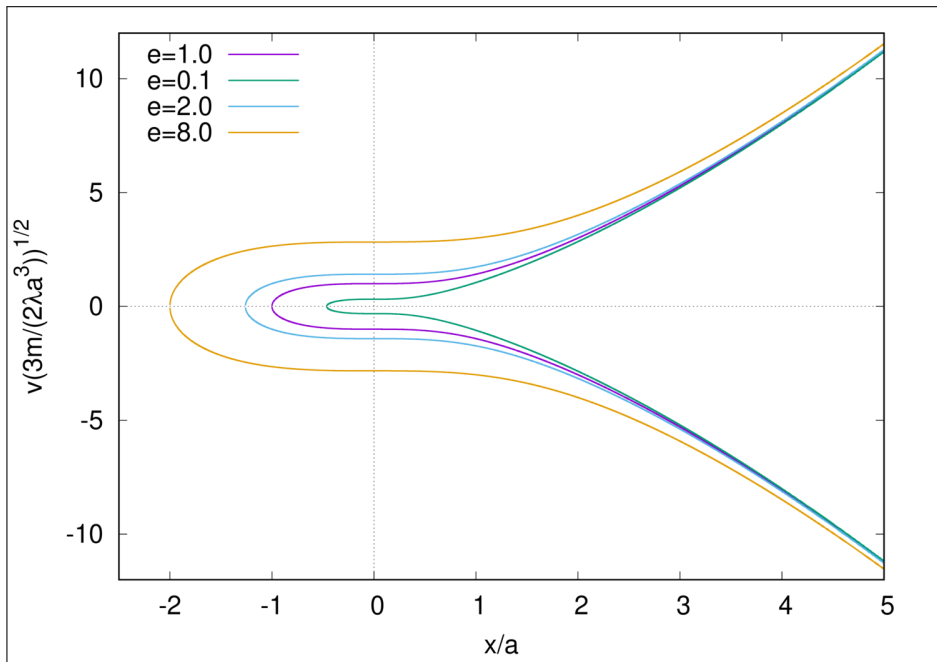
$$= \sqrt{\frac{2}{m}} \left(E + \frac{\lambda}{3}x^3 \right)^{1/2}$$

stólum

$$v = \sqrt{\frac{2}{m}} \left(E + \frac{\lambda a^3}{3} \left(\frac{x}{a}\right)^3 \right)^{1/2}$$

$$= \sqrt{\frac{2\lambda a^3}{3m}} \left(\frac{3E}{\lambda a^3} + \left(\frac{x}{a}\right)^3 \right)^{1/2}$$

$v \sqrt{\frac{3m}{2\lambda a^3}}$
 $= \left(\frac{3E}{\lambda a^3} + \left(\frac{x}{a}\right)^3 \right)^{1/2}$
 "e" á grafi
 Sjá ustu síðu



04-17 Tjald-vörpemin

$$x_{n+1} = 2\alpha x_n \quad 0 < x < 1/2$$

$$x_{n+1} = 2\alpha(1-x_n) \quad 1/2 < x < 1$$

$$0 < \alpha < 1$$

komma fyrir $\alpha = 0.4$ og 0.7 með $x_1 = 0.2$

Sjá graf á vefsíðu

04-04 Jafna Rayleigh er

$$\ddot{x} - (a - bx^2)\dot{x} + \omega_0^2 x = 0 \quad (*)$$

Sýna að breytustíptin $y = \sqrt{\frac{3b}{a}} \dot{x}$

leiðir til jöfnu van der Pol

$$\ddot{y} - \frac{a}{y_0^2} (y_0^2 - y^2)\dot{y} + \omega_0^2 y = 0$$

Breytustíptin benda til þess að best sé að diffa (*)

$$\ddot{x} + 2bx\dot{x} - (a - bx^2)\dot{x} + \omega_0^2 x = 0$$

$$\rightarrow \ddot{x} - \{a - 3bx^2\}\dot{x} + \omega_0^2 x = 0$$

$$Y = Y_0 \sqrt{\frac{3b}{a}} \dot{x} \rightarrow \dot{x} = \sqrt{\frac{a}{3b}} \frac{y}{Y_0}$$

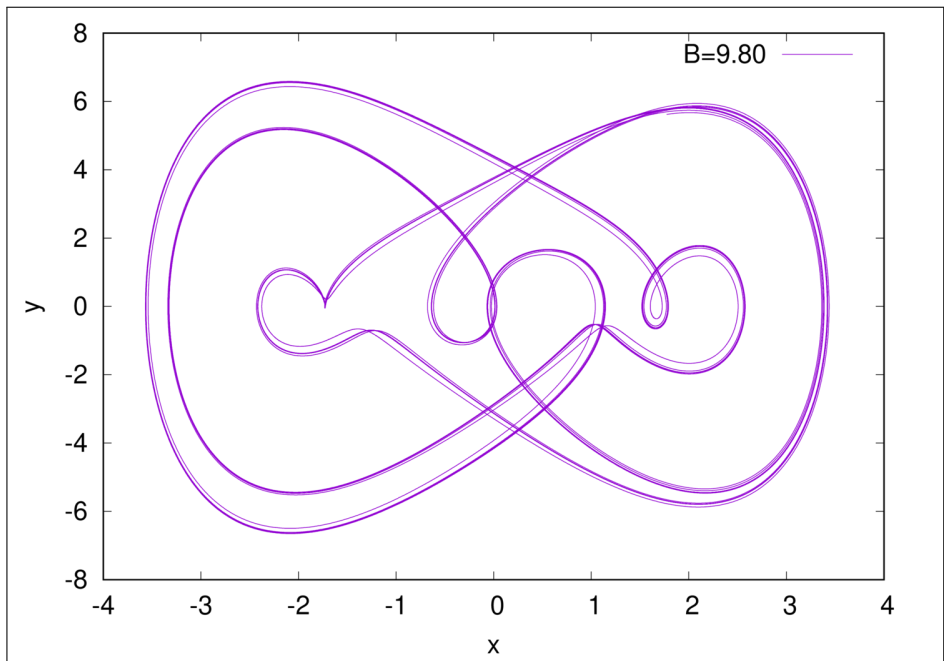
$$\ddot{x} = \sqrt{\frac{a}{3b}} \frac{\dot{y}}{Y_0}$$

Innsetning

$$\sqrt{\frac{a}{3b}} \left\{ \frac{\ddot{y}}{Y_0} - \left[a - 3b \frac{a}{3b} \frac{y^2}{Y_0^2} \right] \frac{\dot{y}}{Y_0} + \omega_0^2 \frac{y}{Y_0} \right\} = 0$$

$$\rightarrow \ddot{y} - \frac{a}{Y_0^2} \{ Y_0^2 - y^2 \} \dot{y} + \omega_0^2 y = 0$$

Jakua van der Pol's



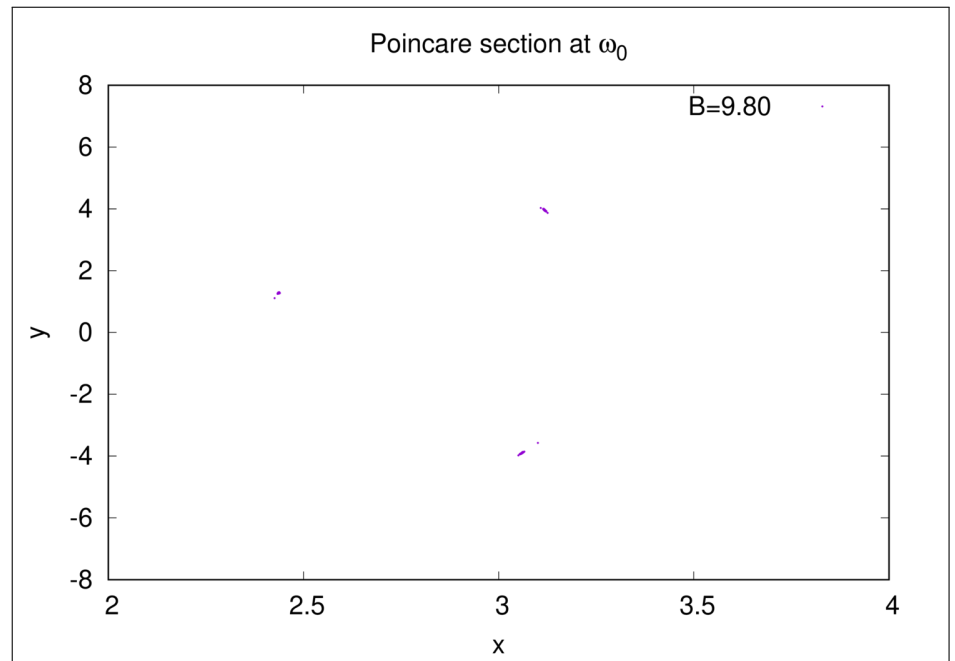
04-22

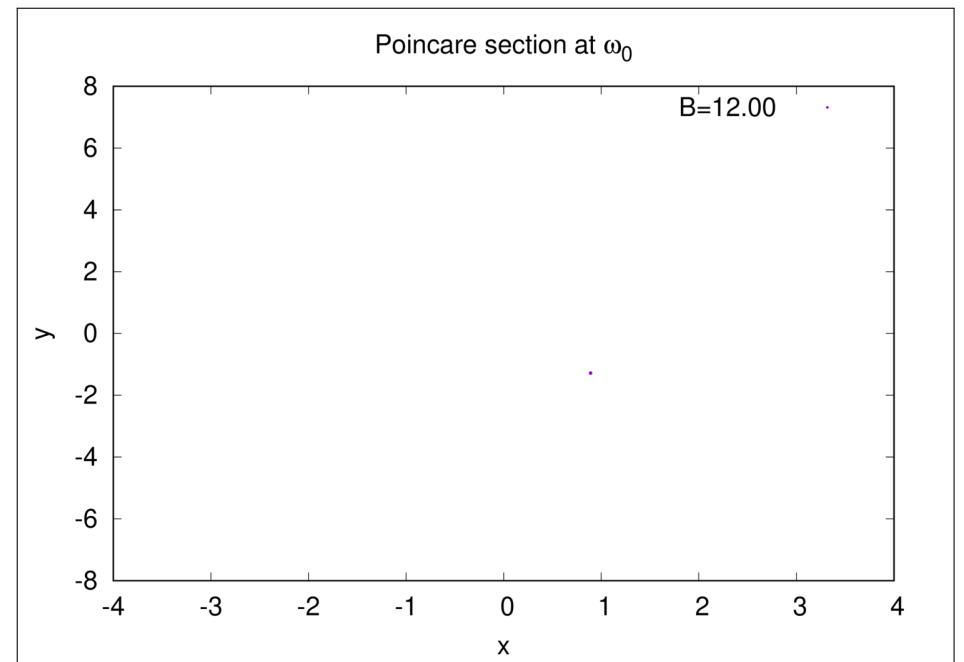
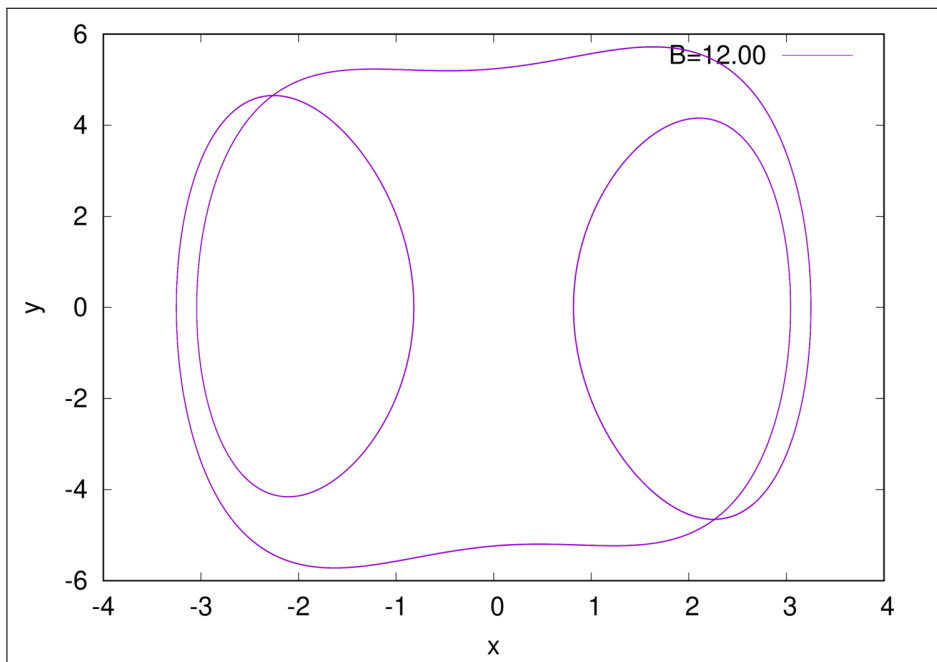
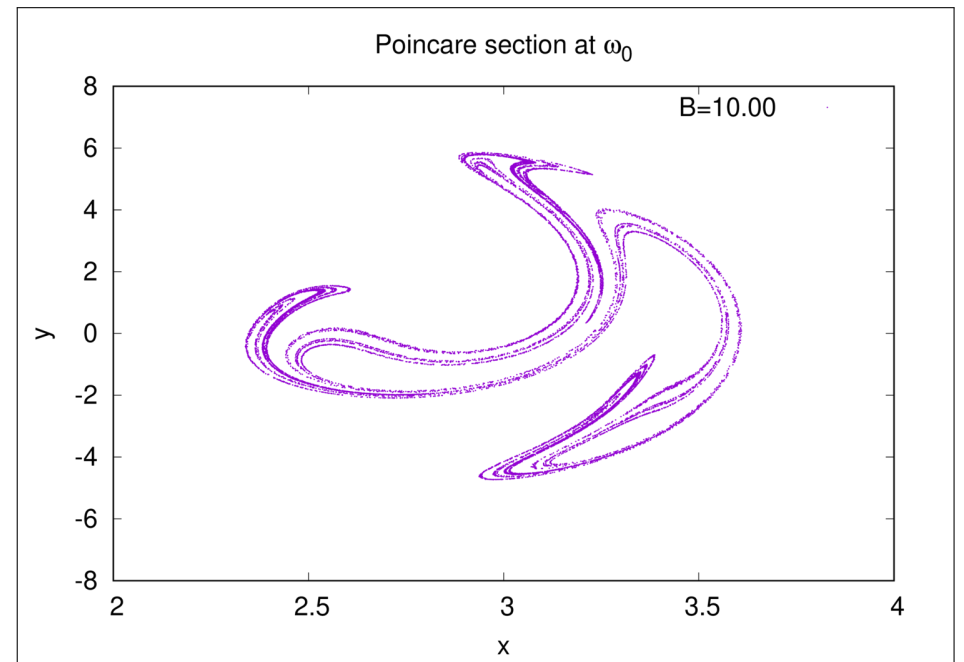
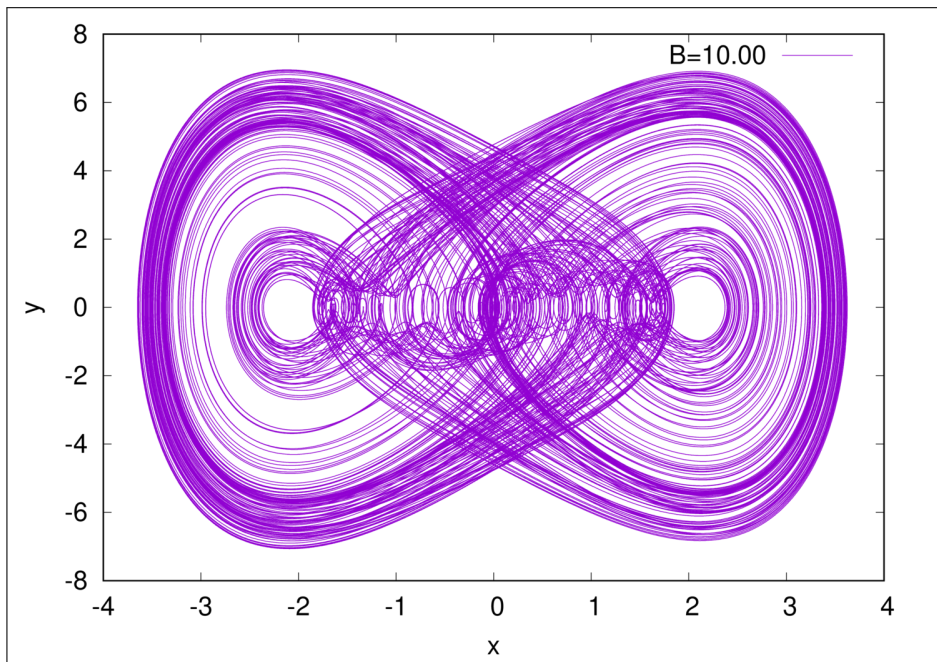
$$\frac{dx}{dt} = y$$

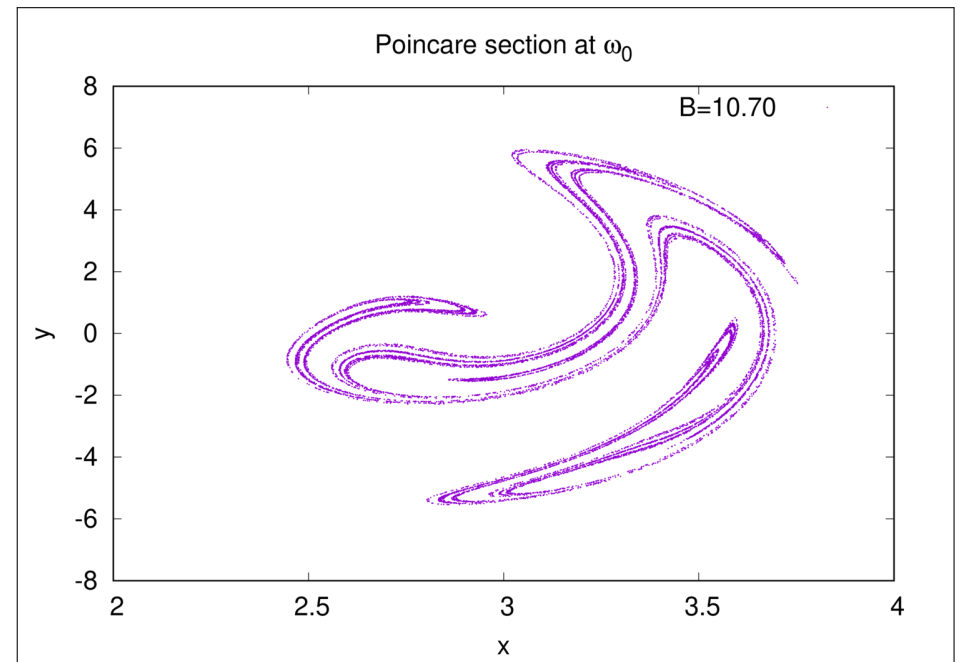
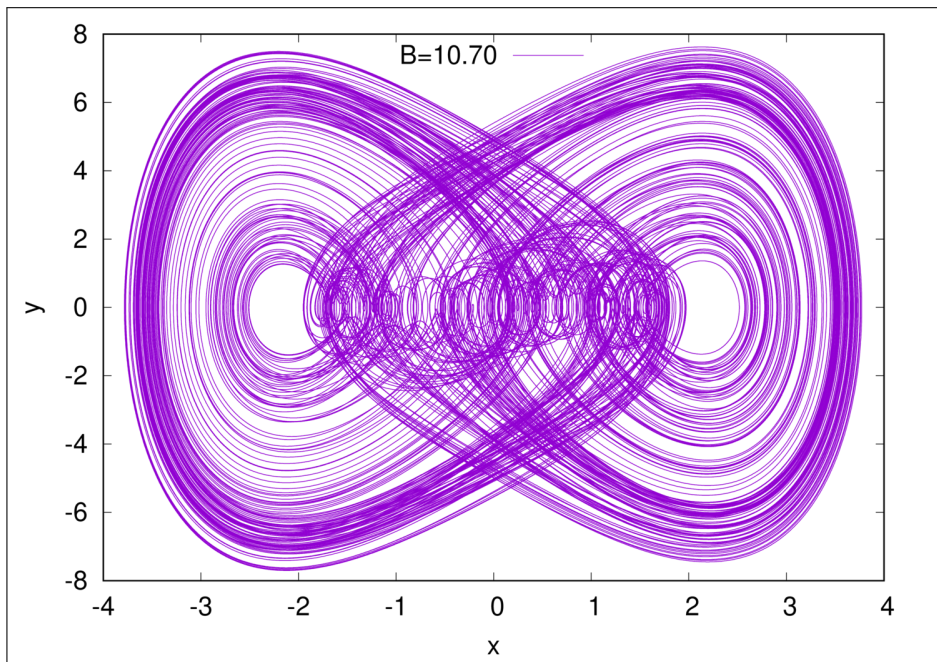
$$\frac{dy}{dt} = -ky - x^3 + B \cos t$$

Poincaré snið : $k=0.1$ $9.8 < B < 13.4$

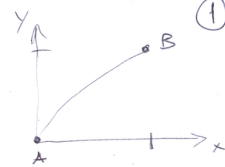
Ég bý til fasa rit fyrir 4 gildi á B , en kannu ekki allt snið. Ég nota 100000 punkta í tíma og sleppi 100000 fyrstu punktum. Í fasa ritin er $\Delta t = 0.001$, en í sniðin nota ég $t_n = 2\pi n$.
 Sem samsvarar $\omega_0 = 1$ hér.
 Hver keppla í gortönu tekur $\sim 2s$.
 Upphafspunktur $(x,y) = (0,0)$







6-1 Milli punkta (0,0) og (1,1) í sléttu hníkka



$$y(\alpha, x) = x + \alpha \cdot \sin[\pi(1-x)]$$

til að sjá að $y(0, x) = x$ sé stöðug ferillinn (sjá mynd á næstu síðu).

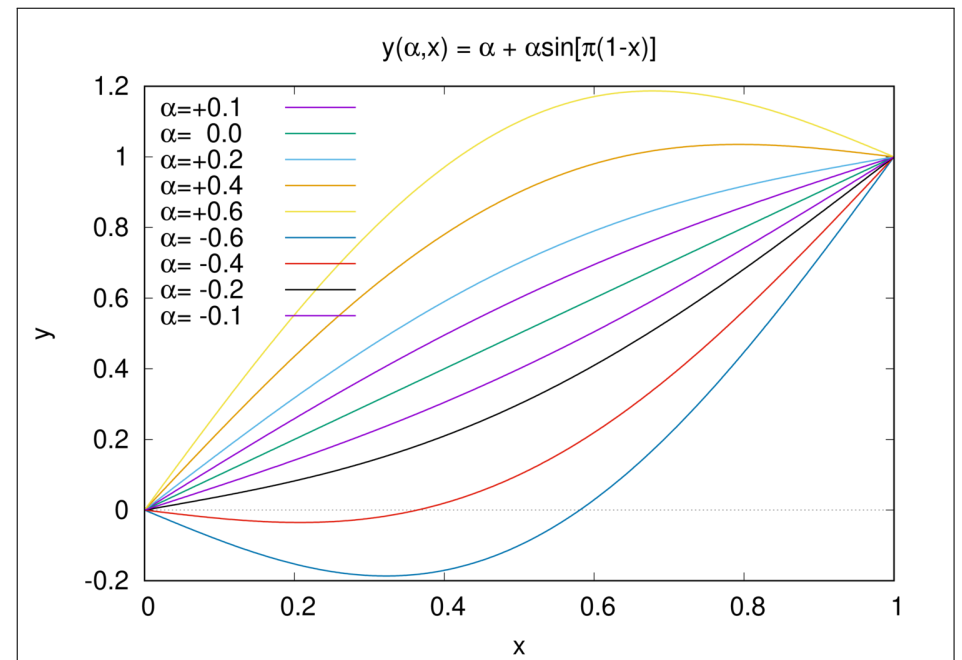
lengd stöðvarinnar er

$$S = \int_A^B \sqrt{dx^2 + dy^2}$$

sem er útförum með $y(x, \alpha)$ sem

$$S(\alpha) = \int_0^1 \sqrt{1 + \left(\frac{dy}{dx}\right)^2} dx$$

$$\frac{dy(\alpha, x)}{dx} = 1 - \alpha\pi \cos[\pi(1-x)]$$



$$S(\alpha) = \int_0^1 dx \sqrt{1 + \left\{ 1 - \alpha \pi \cos[\pi(1-x)] \right\}^2} \quad \text{genum breytu skipti} \quad (3)$$

$$u = \pi(1-x)$$

$$= \frac{1}{\pi} \int_0^\pi du \sqrt{1 + \left\{ 1 - \alpha \pi \cos(u) \right\}^2}$$

$$= \frac{\sqrt{2}}{\pi} \int_0^\pi du \sqrt{1 - \alpha \pi \cos(u) + \frac{(\alpha \pi)^2}{2} \cos^2(u)} \quad \text{Elliptisk heildi}$$

$$\approx \frac{\sqrt{2}}{\pi} \int_0^\pi du \left\{ 1 - \frac{1}{2} \left(\alpha \pi \cos(u) - \frac{(\alpha \pi)^2}{2} \cos^2(u) \right) - \frac{1}{8} \left(\alpha \pi \cos(u) - \frac{(\alpha \pi)^2}{2} \cos^2(u) \right)^2 + \dots \right\}$$

genum það fyrir $\alpha \ll 1$

nú þarf að tæna saman liði með minnst veldi $(\alpha \pi)^2$ og heilda

$$S(\alpha) \approx \sqrt{2} + \frac{\sqrt{2}}{\pi} \int_0^\pi du \left\{ -\frac{\alpha \pi}{2} \cos(u) + \frac{(\alpha \pi)^2}{4} \cos^2(u) - \frac{(\alpha \pi)^2}{8} \cos^2(u) \right\} + \dots$$

$$\approx \sqrt{2} + \frac{\sqrt{2}}{\pi} \int_0^\pi du \frac{(\alpha \pi)^2}{8} \cos^2(u) + \dots \approx \sqrt{2} + \frac{\sqrt{2}}{\pi} \frac{(\alpha \pi)^2}{8} \frac{\pi}{2}$$

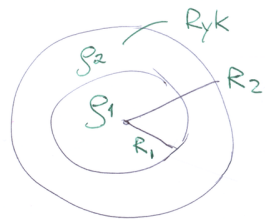
$$= \sqrt{2} + \frac{\sqrt{2}}{16} (\pi \alpha)^2 + \dots$$

$$\frac{\partial S(\alpha)}{\partial \alpha} = \frac{\sqrt{2} \pi \alpha}{8} \rightarrow 0 \quad \text{þegar } \alpha = 0$$

→ Jána fyrir beinátömu

Átlugið að hér finnst lágmark þ. $\alpha = 0$ og $\alpha \ll 1$ við gættum misst af öðrum lágmarkum ky-stærni $\alpha \dots$

5-3



Reikistjörna

Finna kraftinn á ryk ögn með massa m

Lögmál Gauss gældir

$$\oint \vec{g} \cdot d\vec{s} = -4\pi G M$$

Ef $\rho = \rho(r)$, óháð θ og ϕ þá er \vec{g} einslikt $\vec{g} = g \hat{e}_r$
 M geti líka allt eins verið punktmassi, massinn utan r -skiptis ekki máli

$$\rightarrow \vec{F}(r) = m \vec{g}(r) = -m \frac{GM(r)}{r^2} \hat{e}_r$$

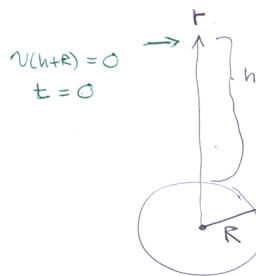
$$M(r) = \frac{4\pi}{3} R_1^3 \rho_1 + \frac{4\pi}{3} (r^3 - R_1^3) \rho_2$$

massi reikistjörnu

massinn úr rykhyrpinum

05-05

Fall að jöfvi, sýna að fall um $\frac{h}{2}$ taki um það bil $\frac{g}{11T}$ þ.s. T er falltíminu



Hreyfingafnan er

$$m \ddot{r} = -G \frac{Mm}{r^2} \quad (1)$$

Orkuvörðsla

$$\frac{1}{2} m \dot{r}^2 - G \frac{Mm}{r} = E = -G \frac{Mm}{h+R} \quad (2)$$

Endurritun 2

$$\frac{1}{2} m \dot{r}^2 = GMm \left\{ \frac{1}{r} - \frac{1}{R+h} \right\}$$

$$\rightarrow \dot{r} = \frac{dr}{dt} = \sqrt{2GM \left\{ \frac{1}{r} - \frac{1}{R+h} \right\}}$$

hæðinn er minni en við
við er á við

$$\rightarrow dt = - \frac{dr}{\sqrt{2GM \left\{ \frac{1}{r} - \frac{1}{R+h} \right\}}}$$

hæðum

$$\int_0^t dt' = - \int_{R+h}^r \frac{dr'}{\sqrt{2GM \left\{ \frac{1}{r'} - \frac{1}{R+h} \right\}}}$$

$$t = \frac{\sqrt{R+h}}{\sqrt{2GM}} \left\{ \sqrt{r'(R+h-r')} - (R+h) \arcsin \left(\sqrt{\frac{r'}{R+h}} \right) + (R+h) \frac{\pi}{2} \right\}$$

fall úr $r = h+R \leq R$

$$t(R) = \frac{\sqrt{R+h}}{\sqrt{2GM}} \left\{ \sqrt{R+h} - (R+h) \arcsin \left(\sqrt{\frac{R}{R+h}} \right) + \frac{(R+h)\pi}{2} \right\}$$

fall úr $r = h+R \leq R + \frac{h}{2}$

$$t\left(R + \frac{h}{2}\right) = \frac{\sqrt{R+h}}{\sqrt{2GM}} \left\{ \sqrt{R + \frac{h}{2}} \sqrt{\frac{h}{2}} - (R+h) \arcsin \left(\sqrt{\frac{R + \frac{h}{2}}{R+h}} \right) + \frac{(R+h)\pi}{2} \right\}$$

$h \gg R$

$$t(R) = \frac{h^{3/2}}{\sqrt{2GM}} \left\{ \frac{R}{h} - \left(1 + \frac{R}{h}\right) \arcsin \left(\sqrt{\frac{R}{1 + \frac{R}{h}}} \right) + \frac{\left(1 + \frac{R}{h}\right)\pi}{2} \right\}$$

$$t = - \int_{R+h}^r \frac{1}{\sqrt{GM^2}} dr' \sqrt{\frac{r'(R+h)}{R+h-r'}}$$

skiptum um breytu

$$y^2 = r' \rightarrow 2y dy = dr', \rightarrow \sqrt{r'} dr' = 2y^2 dy$$

$$t = - \int_{R+h}^R \frac{2}{GM} y^2 dy \sqrt{\frac{R+h}{R+h-y^2}}$$

notum haldi úr við E (E7)

$$= - \frac{2}{GM} \left[- \frac{y}{2} \sqrt{R+h-y^2} + \frac{R+h}{2} \arcsin \left(\frac{y}{\sqrt{R+h}} \right) \right]_{R+h}^R$$

$$t\left(R + \frac{h}{2}\right) = \frac{h^{3/2}}{\sqrt{2GM}} \left\{ \frac{1}{2} \sqrt{1 + \frac{2R}{h}} - \left(1 + \frac{R}{h}\right) \arcsin \left(\frac{\frac{1}{2} + \frac{R}{h}}{1 + \frac{R}{h}} \right) + \frac{\left(1 + \frac{R}{h}\right)\pi}{2} \right\}$$

$h \gg R$, reynum að finna nálgun

$$t(R) \approx \frac{h^{3/2}}{\sqrt{2GM}} \frac{\pi}{2}, \quad t\left(R + \frac{h}{2}\right) \approx \frac{h^{3/2}}{\sqrt{2GM}} \left\{ \frac{1}{2} - \arcsin\left(\frac{1}{2}\right) + \frac{\pi}{2} \right\}$$

$$= \frac{h^{3/2}}{\sqrt{2GM}} \left\{ \frac{1}{2} - \frac{\pi}{6} + \frac{\pi}{2} \right\}$$

$$\rightarrow \frac{t\left(R + \frac{h}{2}\right)}{t(R)} = \frac{\left(\frac{3 - \pi + 3\pi}{6}\right)}{\pi/2}$$

$$= \frac{2}{6} \left(\frac{3 + 2\pi}{\pi} \right) = \frac{1}{3\pi} (3 + 2\pi)$$

$$= \frac{2\pi}{3\pi} \left(1 + \frac{3}{2\pi} \right) = \frac{2}{3} \left(1 + \frac{3}{2\pi} \right) = 0.985$$

05-04

(11)

$F = -\frac{mk^2}{r^3}$, Sjua að $T_d = \frac{d^2}{k}$
 $\vec{F} = -\nabla U$ þú getur verið valdið $U(r) = -\frac{mk^2}{2r^2}$
 Miðlagt velli og gegnum keflur

Orkuskipta

$$E = \frac{m}{2} \dot{r}^2 - \frac{mk^2}{2r^2} = -\frac{mk^2}{2d^2}$$

Ef upphafsorkan er núll er velli skilríkt, $U(d) = 0$
 Sjá $U(t=0) = 0$

$$\frac{m\dot{r}^2}{2} = \frac{mk^2}{2} \left[\frac{1}{r^2} - \frac{1}{d^2} \right]$$

$$\left(\frac{dr}{dt} \right)^2 = k^2 \left[\frac{1}{r^2} - \frac{1}{d^2} \right] \rightarrow dt = \frac{dr}{k \sqrt{\frac{1}{r^2} - \frac{1}{d^2}}}$$

$$\int_0^t dt' = - \int_d^0 \frac{dr}{k \sqrt{\frac{1}{r^2} - \frac{1}{d^2}}} = -\frac{d}{k} \int_d^0 \frac{r dr}{\sqrt{d^2 - r^2}}$$

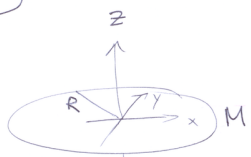
$$= + \frac{d}{k} \sqrt{d^2 - r^2} \Big|_d^0 = \frac{d^2}{k} = T_d$$

formúlan á réttinni er valdið til að t væri þegar r minnir

(12)

5-20

(13)

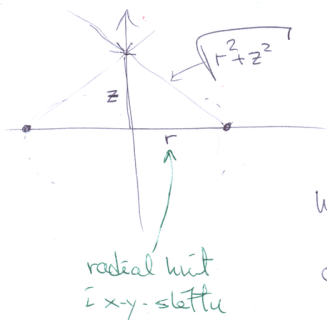


Reitna $\Phi(z)$ og $\vec{g}(z)$

á z-ás

Athugið velli þú fær grónum hring

Einfaldast er að nota Ex. 5.4 í bók og selja saman Φ beint



$$d\Phi = -G \frac{dM}{\sqrt{r^2 + z^2}}$$

hugsan $dM = \int^{2D} dA = \int^{2D} \rho r dr$

og $\int^{2D} = \frac{M}{\pi R^2}$

↑ tvívíð massaþéttningur

$$dM = \left(\frac{M}{\pi R^2} \right) 2\pi r dr = 2M \frac{r dr}{R^2} \leftarrow \text{gefðu sjá rétta veldi}$$

$$\rightarrow d\Phi = -G \frac{2M r dr}{R^2 \sqrt{r^2 + z^2}}$$

$$\Phi(z) = -\frac{2GM}{R^2} \int_0^R \frac{r dr}{\sqrt{r^2 + z^2}} = -\frac{GM}{R^2} \sqrt{r^2 + z^2} \Big|_0^R$$

Hér höfum við reusitandi ekkert tölfræði og myndum þess punkt velli.

$$= -\frac{2GM}{R^2} \left[\sqrt{R^2 + z^2} - z \right]$$

$$\vec{g}(z) = -\hat{e}_z \frac{d\Phi}{dz} = + \frac{2GM}{R^2} \hat{e}_z \left[\frac{z}{\sqrt{R^2 + z^2}} - 1 \right]$$

$$= -\frac{2GM}{R^2} \hat{e}_z \left[\frac{\sqrt{R^2 + z^2} - z}{\sqrt{R^2 + z^2}} \right]$$

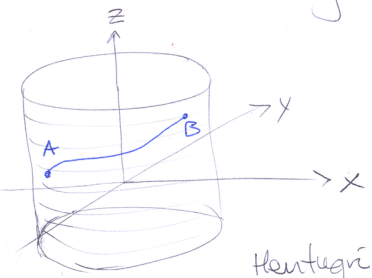
(14)

Ef $R \rightarrow \infty$ þarf að muna að $\frac{M}{R^2}$ er fasti og í ljós kemur að g verður óháð z . Enginn lengibrástali er eftir í kerfinu til að muna z við, og krafturinn er allstóður í sömu átt.

(15)

06-04

Stýsta lína milli tveggja punkta á sivalningi er um gann feril.



Gæði fastur $p = a$

Í kórðistum hnitum er leiðarfræmni

$$ds = \sqrt{(dx)^2 + (dy)^2 + (dz)^2}$$

Hentugri eru sivalningsskrif

$$\begin{aligned} x &= a \cos \phi \\ y &= a \sin \phi \\ z &= z \end{aligned}$$

$$\begin{aligned} dx &= -a \sin \phi \cdot d\phi \\ dy &= +a \cos \phi \cdot d\phi \end{aligned} \quad dz = dz$$

(16)

$$\rightarrow ds = \sqrt{(a d\phi)^2 + (dz)^2} = \sqrt{a^2 + \left(\frac{dz}{d\phi}\right)^2} \cdot d\phi$$

þarfum að lagmarka

$$S = \int_A^B d\phi \sqrt{a^2 + \left(\frac{dz}{d\phi}\right)^2} = \int_A^B d\phi f\left(z, \frac{dz}{d\phi}\right)$$

en $f = f\left(\frac{dz}{d\phi}\right)$ og z er fest í a

Attugið að leiðarafleiðan $\frac{dz}{d\phi}$ leysir þú hvernig z breytist á leiðinni þegar ϕ breytist. $\frac{\partial f}{\partial \phi} = 0$, en $\frac{df}{d\phi} \neq 0$

Höfum engar upplýsingar um $\frac{dz}{d\phi}$, þar sem við höfum enga stíkan fyrir leiðina.

(17)

\rightarrow notum að S lagmarkast þegar

$$\frac{\partial f}{\partial z} - \frac{\partial}{\partial \phi} \frac{\partial f}{\partial \left(\frac{dz}{d\phi}\right)} = 0 \quad \text{Jafna Eulers}$$

$$\rightarrow \frac{\partial}{\partial \phi} \frac{\left(\frac{dz}{d\phi}\right)}{\sqrt{a^2 + \left(\frac{dz}{d\phi}\right)^2}} = 0 \quad \rightarrow \frac{\left(\frac{dz}{d\phi}\right)}{\sqrt{a^2 + \left(\frac{dz}{d\phi}\right)^2}} = \text{fasti} = C$$

$$\rightarrow \left(\frac{dz}{d\phi}\right) = \sqrt{\frac{C^2}{1-C^2}} a = \text{fasti}$$

Jafnan fyrir einstættum gnumi

7.4

Ögn í slattu með krafti $f = -Ar^{\alpha-1}$ og úrsliti $A, \alpha > 0$

Vel þókhútt sem alhútt, $\vec{f} = -Ar^{\alpha-1} \hat{e}_r$

$\vec{f} = -\nabla U \rightarrow U = \frac{A}{\alpha} r^\alpha$

þar sem við veljum $U(0) = 0$

$$\begin{aligned} T &= \frac{m}{2} \{\dot{x}^2 + \dot{y}^2\} \\ &= \frac{m}{2} \{\dot{r}^2 + (r\dot{\theta})^2\} \end{aligned}$$

$$\begin{aligned} L &= T - U \\ &= \frac{m}{2} \{\dot{r}^2 + (r\dot{\theta})^2\} - \frac{Ar^\alpha}{\alpha} \end{aligned}$$

Notum Euler-Lagrange jöfnur til að finna hreyfijöfnur

$$\frac{\partial L}{\partial q_i} - \frac{d}{dt} \frac{\partial L}{\partial \dot{q}_i} = 0 \quad \rightarrow \begin{cases} q_1 = r \\ q_2 = \theta \end{cases}$$

r : $m r \ddot{\theta}^2 - A r^{\alpha-1} - m \ddot{r} = 0$

Það $m \ddot{r} - m r \ddot{\theta}^2 + A r^{\alpha-1} = 0$

Hverfipunginn er fasti
 $\rightarrow m r^2 \ddot{\theta} = l$: fasti
 notum $\dot{\theta}$ hreyfj. fyrir r

θ : $-\frac{d}{dt} \{ m r^2 \dot{\theta} \} = 0$

Hverfipunginn

$\vec{L} = \vec{r} \times \vec{p} = r \hat{e}_r \times \{ \vec{p}_r + \vec{p}_\theta \}$
 $= r \hat{e}_r \times \vec{p}_\theta$

$\rightarrow |\vec{L}| = l = r \cdot m r \dot{\theta} = m r^2 \dot{\theta}$

Þú er hreyfijafnan fyrir θ
 stöðfestur á að hverfipunginn
 sé varðveittur.

$m \ddot{r} - \frac{l^2}{m r^3} + A r^{\alpha-1} = 0$

↑ losnum við breytuna θ

Margföldum með \dot{r}

$m \dot{r} \ddot{r} - \frac{\dot{r} l^2}{m r^3} + A \dot{r} r^{\alpha-1} = 0$

Sjáum að jafnan er

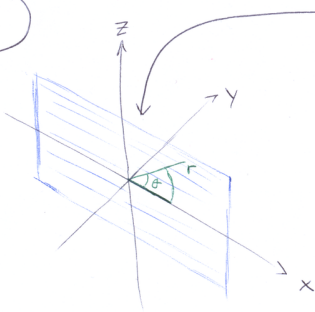
heildar aflræða

$\frac{d}{dt} \left\{ \frac{m}{2} \dot{r}^2 + \frac{l^2}{2 m r^2} + \frac{A}{\alpha} r^\alpha \right\} = 0$

$T + U = E$

↑ heildarorkan, sem er þá
 varðveitt

7-5



"Ögn hreyfist í lörrettri sléttu
 í þyngðarsviði, með kraftinum $f = -A r^{\alpha-1}$
 að miðu í lörrettri sléttunni

\vec{L} sléttunni notum við pólhnit
 þ.a. $T = \frac{m}{2} \{ \dot{r}^2 + (r \dot{\theta})^2 \}$

$U = \frac{A}{\alpha} r^\alpha + m g r \sin \theta$

sjá stýringarmynd
 á síðu 3

$\rightarrow L = \frac{m}{2} \{ \dot{r}^2 + (r \dot{\theta})^2 \} - \frac{A}{\alpha} r^\alpha - m g r \sin \theta$

finnum hreyfijöfnur með Euler-Lagrange $\frac{\partial L}{\partial q_j} - \frac{d}{dt} \frac{\partial L}{\partial \dot{q}_j} = 0$

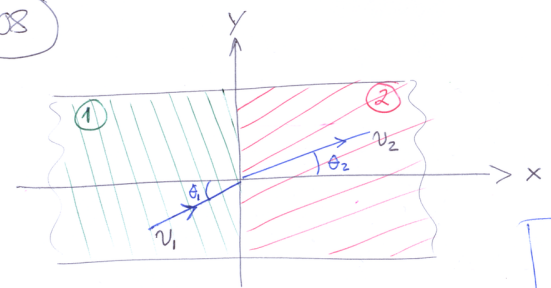
\dot{r} : $m r \ddot{\theta}^2 - A r^{\alpha-1} - m g \sin \theta - m \ddot{r} = 0$

$m \ddot{r} - m r \ddot{\theta}^2 + A r^{\alpha-1} + m g \sin \theta = 0$

θ : $m g \cos \theta - \frac{d}{dt} \{ m r^2 \dot{\theta} \} = 0$

Hverfipunginn í
lörrettri sléttunni
 er ekki varðveittur
 vegna vogis
 þyngðarkraftsins

7-08



$U = \begin{cases} U_1 & \text{ef } x < 0 \\ U_2 & \text{ef } x > 0 \end{cases}$

$L = \frac{m}{2} \{ \dot{x}^2 + \dot{y}^2 \} - U(x)$

Notum að

$U(x) = \Theta(x) U_2 + \Theta(-x) U_1$

Emuþremur $\Theta'(x) = \delta(x)$

↑ δ -fall Diracs

$\int_a^b dx \delta(x) = 1$ ef $a < 0 < b$
 $\int_a^b dx f(x) \delta(x) = f(0)$

$\Theta(x) = \begin{cases} 1 & \text{ef } x > 0 \\ 0 & \text{ef } x < 0 \end{cases}$
 ↑ þröskulur Heaviside

Euler-Lagrange gefur

$$\boxed{\begin{aligned} m\ddot{x} + \frac{dU}{dx} &= 0 & (1) \\ m\ddot{y} &= 0 & (2) \end{aligned}}$$

Notum að $\ddot{x} = \frac{dv_x}{dt} = \frac{dv_x}{dx} \frac{dx}{dt} = \frac{dv_x}{dx} v_x$

Jafna (2) gefur að v_y sé alltaf fasti ($m\frac{dv_y}{dt} = 0$)

líka yfir stílin $x=0$

Stöðum jöfna (1) yfir stílin, hún jafngildir

$$m\ddot{x} = -\delta(x)(U_2 - U_1) \quad \text{þ.s.} \quad \frac{dU}{dx} = \delta(x)(U_2 - U_1)$$

$$\rightarrow v_x \frac{dv_x}{dx} = -\frac{\delta(x)(U_2 - U_1)}{m}$$

(6)

Heitdum

$$\int_{v_{x1}}^{v_{x2}} v_x dv_x = -\frac{(U_2 - U_1)}{m} \int_{x_1}^{x_2} dx \delta(x)$$

$$\frac{1}{2} \{v_{x2}^2 - v_{x1}^2\} = -\frac{(U_2 - U_1)}{m}$$

Það

$$\frac{m}{2} v_{x1}^2 + U_1 = \frac{m}{2} v_{x2}^2 + U_2 \quad (3)$$

Jafna (2) leiðir til $m\dot{y}_1 = m\dot{y}_2$, sem má umrita sem

$$\frac{1}{2} m v_{y1}^2 = \frac{1}{2} m v_{y2}^2 \quad (4)$$

(3) og (4) máleggja saman

$$\rightarrow \frac{1}{2} m v_1^2 + U_1 = \frac{1}{2} m v_2^2 + U_2 \quad (5)$$

(7)

Komum stöðan að $m v_{y1} = m v_{y2}$ má umrita sem

$$v_1 \sin \theta_1 = v_2 \sin \theta_2 \quad (6)$$

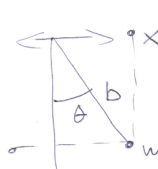
Setjum (6) og (5) saman

$$\begin{aligned} \frac{\sin \theta_1}{\sin \theta_2} &= \frac{v_2}{v_1} = \sqrt{\frac{v_1^2 + (U_1 - U_2) \frac{2}{m}}{v_1^2}} \\ &= \sqrt{1 + \frac{U_1 - U_2}{\frac{m}{2} v_1^2}} = \sqrt{1 + \frac{U_1 - U_2}{T_1}} \end{aligned}$$

(8)

(7-16)

Einfaldur pendúll hengdur upp í $x = a \sin(\omega t)$



$x = a \sin(\omega t)$, veljum hvarfir þefir m

$$\begin{aligned} x &= a \sin(\omega t) + b \sin \theta \\ y &= -b \cos \theta \end{aligned}$$

$$\rightarrow \dot{x} = a\omega \cos(\omega t) + b\dot{\theta} \cos \theta$$

$$\dot{y} = b\dot{\theta} \sin \theta$$

því föst

$$L = T - U = \frac{m}{2} \{ \dot{x}^2 + \dot{y}^2 \} + mgy$$

$$\begin{aligned} L &= \frac{m}{2} \left\{ (a\omega)^2 \cos^2(\omega t) + 2ab\omega\dot{\theta} \cos(\omega t) \cos \theta + (b\dot{\theta})^2 \right\} \\ &\quad + mgb \cos \theta \end{aligned}$$

(9)

Eina rannvænlega breytan sem eftir er, er θ
 Notum Euler-Lagrange

$$\frac{\partial L}{\partial \theta} - \frac{d}{dt} \left(\frac{\partial L}{\partial \dot{\theta}} \right) = 0$$

$$- \frac{m}{2} 2ab\omega \dot{\theta} \cos(\omega t) \sin \theta - mgb \sin \theta$$

$$- \frac{d}{dt} \left\{ \frac{m}{2} 2ab\omega \cos(\omega t) \cos \theta + \frac{m}{2} 2b^2 \dot{\theta} \right\} = 0$$

$$- ab\omega^2 \sin(\omega t) \cos \theta - ab\omega \dot{\theta} \cos(\omega t) \sin \theta + b^2 \ddot{\theta}$$

$$= ab\omega \dot{\theta} \cos(\omega t) \sin \theta - gb \sin \theta$$

$$\rightarrow \ddot{\theta} + \frac{g}{b} \sin \theta - \frac{a\omega^2}{b} \sin(\omega t) \cos \theta = 0$$

(10)

Gerum vörður laust

$$\ddot{\theta} = \frac{d^2 \theta}{dt^2} = \omega^2 \frac{d^2 \theta}{d(\omega t)^2} = \ddot{\theta} \cdot \omega^2, \text{ og notum } \tau\omega$$

sem vörður lausa
+ úna breyftu

því vörður hreyfi jafnan

$$\ddot{\theta} + \left(\frac{\omega_0}{\omega} \right)^2 \sin \theta - \frac{a}{b} \sin(\omega t) \cos \theta = 0$$

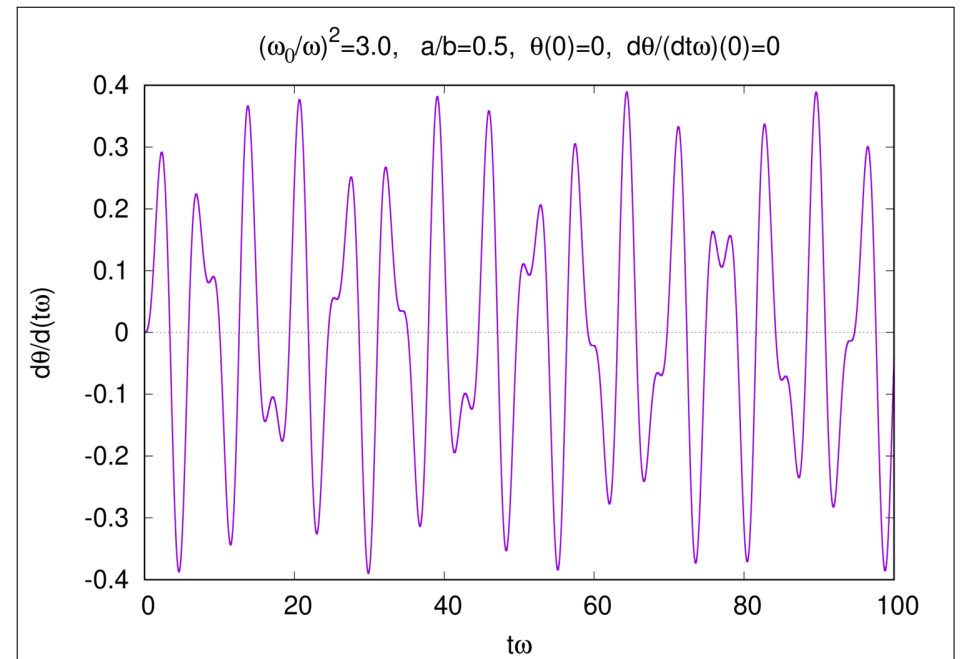
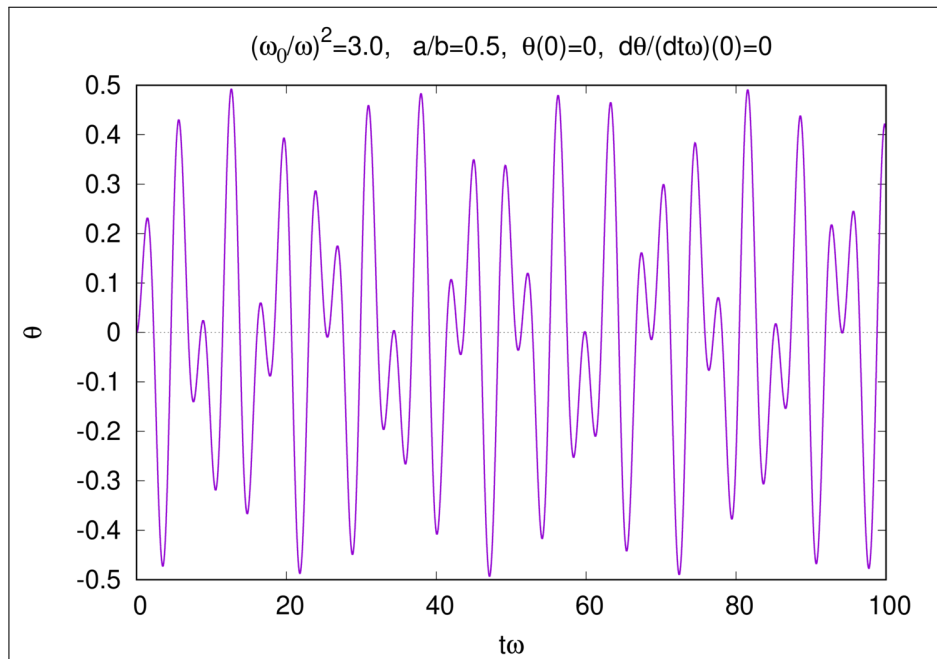
þar sem $\omega_0^2 = \frac{g}{b}$

þá eru einu stítkornir eftir

og $\frac{a}{b}$: hlutfall lengdanna

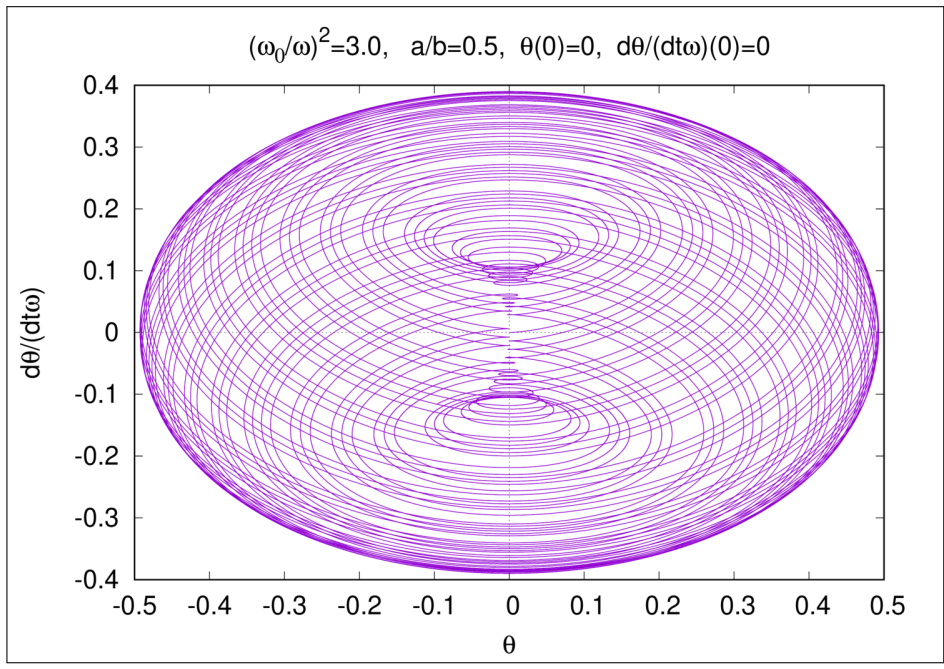
Sjá myndir á næstu þremur síðum

$\frac{\omega_0}{\omega}$: hlutfall náttu-
legu horn tíðni
pendulsins og
horn tíðni yfri
þvingunarrinnar

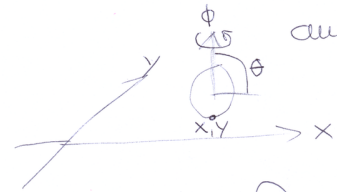


07-01

Skifa veltur á lareflum flatu



Alnit? Við þessum t.d. x og y -stöðuhnit auk hornanna θ og ϕ til að lýsa stöðu hennar algerlega.



Veltustýringi: Veltuenni og "spennanum" z -ásinn má lýsa með skordrum

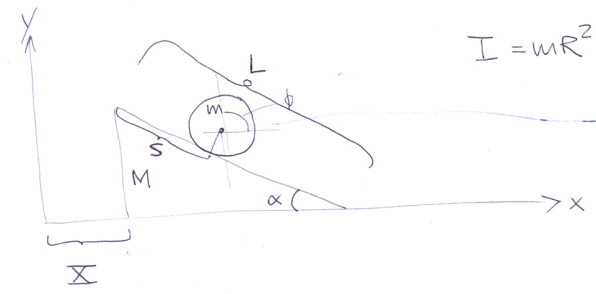
$$Rd\theta = dx \cdot \cos\phi + dy \cdot \sin\phi$$

í stefnu ϕ þ.a. $\frac{dy}{dx} = \tan\phi$

Þessi stýringi er ekki hægt að heilda t.o. finna $f(\theta, \phi, x, y) = 0$ (mýndu ekki heilderaffli) \rightarrow ualldanomic x, y skilgreini θ og ϕ

7-6

Gjörð um m og R veltur niður skáplan með M og α m.v. náningslausu stöðu



$$I = mR^2$$

Spáum að best er að velja upphaf ϕ þ.a. $s = R\phi$

fyrir massamiðu gjörður

$$x = X + s \cos\alpha + R \sin\alpha$$

$$y = R \cos\alpha + (L-s) \sin\alpha$$

16

Hreyfingarkjörður er þú

$$T_g = \frac{m}{2} (\dot{x}^2 + \dot{y}^2) + \frac{I}{2} \dot{\phi}^2$$

$$= \frac{m}{2} \left\{ (\dot{X} + \dot{s} \cos\alpha)^2 + (-\dot{s} \sin\alpha)^2 \right\} + \frac{m}{2} (R\dot{\phi})^2$$

Notum $s = R\phi$ til að losa okkur við ϕ

$$\rightarrow T_g = \frac{m}{2} \left\{ 2\dot{s}^2 + \dot{X}^2 + 2\dot{X}\dot{s} \cos\alpha \right\}$$

Alnitin eru í raun X og s

fyrir skáplanit gildir

$$T_s = \frac{M}{2} \dot{X}^2$$

þú ert heildar hreyfingartíðni

$$T = m\dot{s}^2 + \frac{m+M}{2}\dot{x}^2 + m\dot{x}\dot{s}\cos\alpha$$

Mattisortan er

$$U = mgy = mg\{R\cos\alpha + (L-s)\sin\alpha\}$$

og við sjáum að

$$L = T - U = m\dot{s}^2 + \frac{m+M}{2}\dot{x}^2 + m\dot{x}\dot{s}\cos\alpha - mg\{R\cos\alpha + (L-s)\sin\alpha\}$$

Tví alhnit, notum Euler-Lagrange

$$\frac{\partial L}{\partial q} - \frac{d}{dt}\left(\frac{\partial L}{\partial \dot{q}}\right) = 0$$

(18)

til að finna

$$\underline{s}: \quad mg\sin\alpha - \frac{d}{dt}\{2m\dot{s} + m\dot{x}\cos\alpha\} = 0$$

$$\rightarrow \boxed{2m\ddot{s} + m\dot{x}\cos\alpha - mg\sin\alpha = 0} \quad (1)$$

\underline{x} :

$$-\frac{d}{dt}\left\{2\frac{m+M}{2}\dot{x} + m\dot{s}\cos\alpha\right\} = 0$$

$$\rightarrow \boxed{(m+M)\ddot{x} + m\dot{s}\cos\alpha = 0} \quad (2)$$

p.s. jafna (2) er óhliðuð má einfalda

(19)

(20)

$$\left\{2 - \frac{m\cos^2\alpha}{m+M}\right\}\ddot{s} = g\sin\alpha$$

$$\ddot{x} = -\frac{mg\sin\alpha\cos\alpha}{2(m+M) - m\cos^2\alpha}$$

þegar $M \rightarrow \infty$ stöðugt sköplandi, en gjörðin veltur einfeldlega

og þá

$$\frac{d}{dt}\{(m+M)\dot{x} + m\dot{s}\cos\alpha\} = 0$$

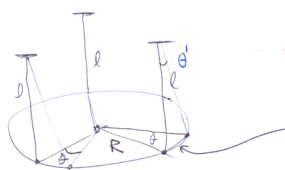
x-þáttur skriðþunga gjörðir niðað við sköplan

heildar x-þáttur skriðþunga kerfis

vegna þess að engin kraftur veltur í x-átt

(20-20)

Hringur hengdur upp í þverpunktum, reiknaðan (1)



suðid um litið hornum miðja sína (vil ekki finna θ), en þessum strenglengd lengd strengs er $2R\sin(\frac{\theta}{2})$, en gjörðin heitir þegar heimi er suðid Beinlengd niður á kanna verður



$$l \rightarrow l^2 - (2R\sin(\frac{\theta}{2}))^2$$

Kalam hæð gjörður í upphafi $z = -l$, notum $z(\theta)$ og setjum $z(0) = -l$

$$\{z(\theta)\}^2 = l^2 - (2R\sin(\frac{\theta}{2}))^2$$

$$\rightarrow z(\theta) = -\sqrt{l^2 - (2R)^2\sin^2(\frac{\theta}{2})}$$

fyrir litla horn fast þá $\sin^2\left(\frac{\theta}{2}\right) \approx \frac{\theta^2}{4} + \dots$ (2)

$$\rightarrow z(\theta) \approx -l \sqrt{1 - \frac{R^2 \dot{\theta}^2}{l^2}} = -l \sqrt{1 - \left(\frac{R\dot{\theta}}{l}\right)^2}$$

$$\approx -l \left[1 - \frac{1}{2} \left(\frac{R\dot{\theta}}{l}\right)^2 \right]$$

þú notum við $U = mgz \approx -mgl \left[1 - \frac{1}{2} \left(\frac{R\dot{\theta}}{l}\right)^2 \right]$

Massa miðja gírdarinnar er kyrr, nema ~~hún~~ hún getur fast til z -átt

$$T = \frac{I}{2} \dot{\theta}^2 + \frac{m}{2} \dot{z}^2, \quad I = mR^2$$

Þerum saman við

$$L = \frac{m}{2} (R\dot{\theta})^2 - \frac{m}{2} \omega_0^2 (R\dot{\theta})^2$$

fyrir hreintöna sveiflu, þar af leiðir

að hreyfi jafnan verður

$$\ddot{\theta} + \frac{g}{l} \theta = 0$$

og $\omega_0 = \sqrt{\frac{g}{l}}$

$$\dot{z} = \frac{dz}{dt} = \frac{dz}{d\theta} \frac{d\theta}{dt} = \frac{R\dot{\theta}}{l} \dot{\theta} \quad (3)$$

$$\rightarrow T = \frac{m}{2} (R\dot{\theta})^2 + \frac{m}{2} \frac{(R\dot{\theta})^2 \dot{\theta}^2}{l^2}$$

$$\rightarrow L = \frac{m}{2} (R\dot{\theta})^2 + \frac{m(R\dot{\theta})^2 \dot{\theta}^2}{2l^2} + mgl \left[1 - \frac{1}{2} \left(\frac{R\dot{\theta}}{l}\right)^2 \right]$$

Þetta fall Lagrange verður aðeins fyrir hreintöna sveifil ef þessi liður $\neq 0$. Hlutfalli milli kans og fyrsta liðsins er $\frac{(R\dot{\theta})^2}{l^2}$ sem við leyfum okkur að jafna við noll þegar það margfaldað við $\frac{m}{2} (R\dot{\theta})^2$

$$L \approx \frac{m}{2} (R\dot{\theta})^2 - \frac{m}{2} \frac{g}{l} (R\dot{\theta})^2 + \text{fasti}$$

(4)

07-32

$U(r) = -\frac{k}{r}$, Hreyfing í mottönu í kulukútnum (5)

Notum jöfnu (1.100) á bls. 32 í bók

$$\vec{v} = \dot{r} \hat{e}_r + r \dot{\theta} \hat{e}_\theta + r \sin\theta \dot{\phi} \hat{e}_\phi$$

til að umskrifa

$$L = T - U = \frac{m}{2} v^2 + \frac{k}{r}$$

sem

$$L = \frac{m}{2} \left\{ \dot{r}^2 + (r\dot{\theta})^2 + (r \sin\theta \dot{\phi})^2 \right\} + \frac{k}{r}$$

þar sem við notum alhnitun r, θ og ϕ . Samsvarandi störfum eru þú

$$P_r = \frac{\partial L}{\partial \dot{r}} = m\dot{r}, \quad P_\theta = \frac{\partial L}{\partial \dot{\theta}} = m r^2 \dot{\theta}, \quad P_\phi = \frac{\partial L}{\partial \dot{\phi}} = m r^2 \dot{\phi} \sin\theta$$

Fall Hamiltons er þá

$$H = p_r \dot{r} + p_\theta \dot{\theta} + p_\phi \dot{\phi} - L$$

$$= \frac{m}{2} \left\{ \dot{r}^2 + (r\dot{\theta})^2 + (r\sin\theta \dot{\phi})^2 \right\} - \frac{k}{r}$$

$$= \left\{ \frac{p_r^2}{2m} + \frac{p_\theta^2}{2mr^2} + \frac{p_\phi^2}{2m(r\sin\theta)^2} \right\} - \frac{k}{r}$$

Hreyfijöfnur Hamiltons

$$\dot{q}_k = \frac{\partial H}{\partial p_k}$$

$$-\dot{p}_k = \frac{\partial H}{\partial q_k}$$

$$\left. \begin{array}{l} \dot{r} = \frac{p_r}{m} \\ \dot{\theta} = \frac{p_\theta}{mr^2} \\ \dot{\phi} = \frac{p_\phi}{m(r\sin\theta)^2} \end{array} \right\} \begin{array}{l} \text{eins og rannur} \\ \text{vor komu á} \\ \text{síðu 5} \end{array}$$

(6)

$$\dot{p}_r = -\frac{k}{r^2} + \frac{p_\theta^2}{mr^3} + \frac{p_\phi^2}{mr^3 \sin^2\theta}$$

$$\dot{p}_\theta = \frac{p_\phi^2 \cos\theta}{mr^2 \sin^2\theta} = \frac{p_\phi^2 \cot\theta}{m(r\sin\theta)^2}$$

$$\dot{p}_\phi = 0 \leftarrow p_\phi \text{ er fasti, } H \text{ er ekki fall of } \phi$$

þú er í raun $H = H(r, \theta, p_r, p_\theta)$ 4 breytur

6 fyrsta stigs hreyfijöfnur fyrir r, θ, ϕ ásamt p_r, p_θ, p_ϕ

Fjörvett fasaáram

$$H = \left\{ \frac{p_r^2}{2m} + \frac{p_\theta^2}{2mr^2} + \frac{\text{fasti}}{(r\sin\theta)^2} - \frac{k}{r} \right\}$$

Skodum ofanverp á r - p_r -slötu fyrir breytilega θ

Orkuvörðveita $H = E$

$$\rightarrow p_r = \sqrt{2mE - \frac{p_\theta^2 \sin^2\theta + \text{fasti}}{(r\sin\theta)^2} + \frac{2mk}{r}}$$

(7)

07-24

Pendill sem stýttist $\frac{d\alpha}{dt} = -\alpha = \text{fasti}$

(8)

Veljum alhvit θ , en munum að stöðsáhringurhvit massa er θ

$$T = \frac{m}{2} \left(\frac{d}{dt}(l\dot{\theta}) \right)^2 = \frac{m}{2} \left\{ (l\dot{\theta})^2 + (\dot{x})^2 \right\} = \frac{m}{2} \left\{ (l\dot{\theta})^2 + (x\dot{\theta})^2 \right\}$$

$$U = -mgl \cos\theta$$

$$\rightarrow L = \frac{m}{2} \left\{ (l\dot{\theta})^2 + (x\dot{\theta})^2 \right\} + mgl \cos\theta$$

$$p_\theta = \frac{\partial L}{\partial \dot{\theta}} = ml^2 \dot{\theta}$$

þá er hagt að mynda $H = p_\theta \dot{\theta} - L$

$$H = ml^2 \dot{\theta}^2 - \frac{m}{2} \left\{ (l\dot{\theta})^2 + (x\dot{\theta})^2 \right\} - mgl \cos\theta$$

$$= \frac{p_\theta^2}{2ml^2} - \frac{m}{2} (x\dot{\theta})^2 - mgl \cos\theta$$

$\vec{v} = \dot{\vec{r}} = \dot{x} \hat{e}_r + l\dot{\theta} \hat{e}_\theta$
og $\hat{e}_r \cdot \hat{e}_\theta = 0$

Heildarorkan er

(9)

$$E = T + U = \frac{m}{2} \left\{ (l\dot{\theta})^2 + (x\dot{\theta})^2 \right\} - mgl \cos\theta$$

$$= \frac{p_\theta^2}{2ml^2} + \frac{m}{2} (x\dot{\theta})^2 - mgl \cos\theta$$

$$\rightarrow E \neq H$$

Skodum aðeins hreyfijöfnuna, fundna með L

$$\frac{d}{dt} \left(\frac{\partial L}{\partial \dot{\theta}} \right) - \frac{\partial L}{\partial \theta} = 0$$

$$\frac{d}{dt} \left\{ ml^2 \dot{\theta} \right\} + mgl \sin\theta = 0$$

$$ml^2 \ddot{\theta} + 2\dot{\theta} m l \dot{x} + mgl \sin\theta = 0$$

$$ml^2 \ddot{\theta} - 2\dot{\theta} m l x + mgl \sin\theta = 0$$

$$\ddot{\theta} - \frac{2x}{l} \dot{\theta} + \frac{g}{l} \sin \theta = 0$$

Ef við höfum smásvæflur

$$\ddot{\theta} - \frac{2x}{l} \dot{\theta} + \frac{g}{l}(1+\epsilon)\theta = 0$$

orkubeltinn er pendulinn (stöðuvorkans eykst)

$$\omega_0 = \sqrt{\frac{g}{l}}$$

orkubeltinninn
letur hann svæflast hraðar

Vand, þú jafnan byrjar á sér, $l = l(t)$!

10

7-25

Gomferill $z = R\theta$, $r = \text{fasti} = b$

Ögn er þyngðarsviði hreyfist á gomferli

Best að nota sívalningshnit r, θ, z

Almennt gæði þá $T = \frac{m}{2} \{ \dot{r}^2 + (r\dot{\theta})^2 + \dot{z}^2 \}$, $U = mgz$

→ Með þessum breytistörðum

$r = b$, $\dot{r} = 0$, höldum z , en setjum $\theta = \frac{z}{R}$

→ $\dot{\theta} = \frac{\dot{z}}{R}$ og $(r\dot{\theta})^2 = b^2 \frac{\dot{z}^2}{R^2}$

$$\rightarrow L = \frac{m}{2} \left\{ \dot{z}^2 + \frac{b^2}{R^2} \dot{z}^2 \right\} - mgz$$

$$= \frac{m}{2} \left\{ 1 + \frac{b^2}{R^2} \right\} \dot{z}^2 - mgz$$

Eina allhútið er þú z

$$P_z = \frac{\partial L}{\partial \dot{z}} = m \left(1 + \frac{b^2}{R^2} \right) \dot{z}$$

$$\dot{z} = \frac{P_z}{m \left(1 + \frac{b^2}{R^2} \right)}$$

11

Fall Hamiltons verður þú

$$H = P_z \dot{z} - L = \frac{P_z^2}{2m \left(1 + \frac{b^2}{R^2} \right)} + mgz$$

litur út eins og ögn er þyngðarkrafti á tæðri hreyfingu með virka massann $m \left(1 + \frac{b^2}{R^2} \right)$

$$\dot{P}_z = -\frac{\partial H}{\partial z} = -mg$$

$$\dot{z} = \frac{\partial H}{\partial P_z} = \frac{P_z}{m \left(1 + \frac{b^2}{R^2} \right)}$$

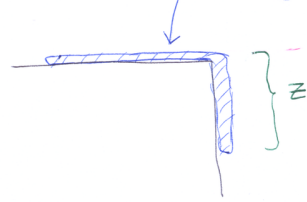
$$\rightarrow \left(1 + \frac{b^2}{R^2} \right) \ddot{z} = g$$

Eins og gista mátti á þegar H eða L er stöðug

12

07-39

Mjög þjall kopall, leiðarlengd b



Setjum $U = 0$ fyrir hlutann á láréttu borðinu

$$U = g \int_z^0 dz' \rho(z') z' \quad \text{þar sem } \rho(z) = \frac{m}{b} \text{ fasti}$$

$$\rightarrow U = g \frac{m}{b} \frac{z'^2}{2} \Big|_z^0 = -g \frac{m}{b} \frac{z^2}{2}$$

Athugið síðan að allur kopallinn hreyfist samtímis
→ hregðu massinn er m , hreyfingin er öðru þú hvort hreyfingin er lárétt eða tæðri

$$\rightarrow T = \frac{m}{2} \dot{z}^2$$

13

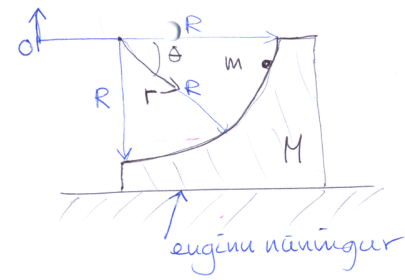
$$\rightarrow L = \frac{m}{2} \dot{z}^2 + \frac{gm}{2b} z^2$$

Notum Euler Lagrange

$$\frac{\partial L}{\partial z} - \frac{d}{dt} \left(\frac{\partial L}{\partial \dot{z}} \right) = 0 \rightarrow \frac{gmz}{b} - \frac{d}{dt} (m\dot{z}) = 0$$

$$\rightarrow \boxed{m\ddot{z} - \frac{gmz}{b} = 0} \quad \text{osa} \quad \boxed{\ddot{z} - \frac{gz}{b} = 0}$$

07-34



- a) Finna hreyfijöfnum m og M
- b) Finna kraft M á m

Alhliðst fyrir M

$$x_M = x \quad (\text{öpartt } y_M = 0)$$

$$\left. \begin{array}{l} x_M = r \cos \theta + x \\ y_M = -r \sin \theta \end{array} \right\} \rightarrow$$

Nýgjarnst líta út almennt r í stað R þ.s. við viljum finna kraftina á m í b-lið

$$T = T_M + T_m$$

$$T_M = \frac{M}{2} \dot{x}^2$$

$$T_m = \frac{m}{2} \{ \dot{x}_m^2 + \dot{y}_m^2 \} = \frac{m}{2} \{ (\dot{r} \cos \theta - r \dot{\theta} \sin \theta + \dot{x})^2 + (-\dot{r} \sin \theta - r \dot{\theta} \cos \theta)^2 \}$$

$$U = mgy_M = -mgr \sin \theta$$

$$T_m = \frac{m}{2} \left[\dot{r}^2 \cos^2 \theta + \dot{x}^2 + r^2 \dot{\theta}^2 \sin^2 \theta - 2r\dot{\theta} \sin \theta \cos \theta + 2r\dot{x} \cos \theta - 2r\dot{\theta} \dot{x} \sin \theta + \dot{r}^2 \sin^2 \theta + r^2 \dot{\theta}^2 \cos^2 \theta + 2r\dot{r} \dot{\theta} \cos \theta \sin \theta \right]$$

$$\rightarrow T_m = \frac{m}{2} \left\{ \dot{r}^2 + (r\dot{\theta})^2 + 2r\dot{x} \cos \theta - 2r\dot{\theta} \dot{x} \sin \theta \right\} + \frac{m}{2} \dot{x}^2$$

þú verður

$$\boxed{L = \frac{(M+m)}{2} \dot{x}^2 + \frac{m}{2} \left\{ \dot{r}^2 + (r\dot{\theta})^2 + 2r\dot{x} \cos \theta - 2r\dot{\theta} \dot{x} \sin \theta \right\} + mgr \sin \theta}$$

og jafnan fyrir brantor stöðum er $f(x, \theta, r) = r - R = 0$

Alhliðst eru x, theta, og r

Hreyfijöfnunir fyrir kerfið fást með Euler-Lagrange

þegar við setjum $r = R$ og $\dot{r} = 0, \ddot{r} = 0$ (eftir stöðu x og theta)

$$L' = \left(\frac{M+m}{2} \right) \dot{x}^2 + \frac{m}{2} \left\{ (R\dot{\theta})^2 - 2R\dot{\theta} \dot{x} \sin \theta \right\} + mgr \sin \theta$$

$$\frac{\partial L'}{\partial x} - \frac{d}{dt} \left(\frac{\partial L'}{\partial \dot{x}} \right) = 0 : \quad \frac{d}{dt} \left\{ (M+m)\dot{x} - mR\dot{\theta} \sin \theta \right\} = 0$$

$$\rightarrow \boxed{(M+m)\ddot{x} - mR\ddot{\theta} \sin \theta - mR\dot{\theta}^2 \cos \theta = 0} \quad (1)$$

$$\frac{\partial L'}{\partial \theta} - \frac{d}{dt} \left(\frac{\partial L'}{\partial \dot{\theta}} \right) = 0 : \quad -mR\dot{\theta} \dot{x} \cos \theta - \frac{d}{dt} \left\{ mR^2 \dot{\theta} - mR\dot{x} \sin \theta \right\} = 0 + mgr \cos \theta$$

$$\rightarrow mR^2 \ddot{\theta} - mR\ddot{x} \sin \theta - mR\dot{x} \dot{\theta} \cos \theta + mR\dot{\theta} \dot{x} \cos \theta - mgr \cos \theta = 0$$

$$\rightarrow \ddot{\theta} - \frac{\ddot{x}}{R} \sin\theta - \frac{g}{R} \cos\theta = 0 \quad (2)$$

b) Brautarstöðurnar

$$f(r) = r - R = 0$$

Atlitunum $\frac{\partial L}{\partial r} - \frac{d}{dt} \left(\frac{\partial L}{\partial \dot{r}} \right) + \lambda \frac{\partial f}{\partial r} = 0$

$$m r \dot{\theta}^2 - m \dot{x} \sin\theta + mg \sin\theta - \frac{d}{dt} \{ m \dot{r} + m \dot{x} \cos\theta \} + \lambda = 0$$

$$\rightarrow m r \dot{\theta}^2 - m \dot{x} \sin\theta + mg \sin\theta - m \dot{r} - m \dot{x} \cos\theta + m \dot{x} \sin\theta + \lambda = 0$$

(18)

$$\lambda = m \ddot{x} \cos\theta + m \ddot{r} - mg \sin\theta - m R \dot{\theta}^2$$

Setjum núna rétta braut, $r=R, \dot{r}, \ddot{r} = 0$

$$\rightarrow \lambda = m \ddot{x} \cos\theta - mg \sin\theta - m R \dot{\theta}^2 \quad (3)$$

Notum núna (1) og (2)

$$\ddot{x} = \mu R \ddot{\theta} \sin\theta + \mu R \dot{\theta}^2 \cos\theta, \quad \mu = \frac{m}{M+m}$$

$$\ddot{\theta} = \frac{\ddot{x}}{R} \sin\theta + \frac{g}{R} \cos\theta$$

$$\ddot{x} = \mu R \left\{ \frac{\ddot{x}}{R} \sin\theta + \frac{g}{R} \cos\theta \right\} \sin\theta + \mu R \dot{\theta}^2 \cos\theta = \mu \ddot{x} \sin^2\theta + \mu g \cos\theta \sin\theta + \mu R \dot{\theta}^2 \cos\theta$$

$$\rightarrow \ddot{x} (1 - \mu \sin^2\theta) = \mu R \dot{\theta}^2 \cos\theta + \mu g \cos\theta \sin\theta$$

(19)

$$\ddot{x} = \frac{\mu \cos\theta \{ R \dot{\theta}^2 + g \sin\theta \}}{1 - \mu \sin^2\theta}$$

Notum (3)

$$\lambda = \frac{\mu \cos^2\theta \{ R \dot{\theta}^2 + g \sin\theta \}}{1 - \mu \sin^2\theta} - mg \sin\theta - m R \dot{\theta}^2$$

$$= \frac{\mu \cos^2\theta \{ R \dot{\theta}^2 + g \sin\theta \} - mg \sin\theta + \mu g \sin^3\theta - m R \dot{\theta}^2 + m R \dot{\theta}^2}{1 - \mu \sin^2\theta}$$

$$= \frac{\mu \mu R \dot{\theta}^2 - mg \sin\theta - m R \dot{\theta}^2 + \mu g \cos^2\theta \sin\theta + \mu g \sin^3\theta}{1 - \mu \sin^2\theta}$$

(20)

$$\rightarrow \lambda = \frac{\mu R \dot{\theta}^2 - m R \dot{\theta}^2 - mg \sin\theta + \mu g \sin\theta}{1 - \mu \sin^2\theta} = \frac{m(\mu - 1) \{ g \sin\theta + R \dot{\theta}^2 \}}{1 - \mu \sin^2\theta}$$

Þar sem θ_0 er upphafs kemur þar sem ögnun hefur engan hliða

$\dot{\theta}$ má finna frá orkuvörðveislunni

$$\left(\frac{M+m}{2} \right) \dot{x}^2 + \frac{m}{2} \{ R^2 \dot{\theta}^2 - 2 \dot{x} R \dot{\theta} \sin\theta \} - mg R \sin\theta = -mg R \sin\theta$$

En hér þarf að losna við \dot{x} , til þess þarf að nota (1) stöðum (3)

$$\ddot{x} = \mu R \{ \ddot{\theta} \sin\theta + \dot{\theta}^2 \cos\theta \} = \mu R \frac{d}{dt} \{ \dot{\theta} \sin\theta \}$$

$$\frac{d}{dt}(\dot{x}) = \mu R \frac{d}{dt} \{ \dot{\theta} \sin\theta \}$$

(21)

þú fast $\dot{x} = \mu R \dot{\theta} \sin \theta$, og ortuvarðveislan (22)

$$\left(\frac{M+m}{2}\right) \mu^2 R^2 \dot{\theta}^2 \sin^2 \theta + \frac{m}{2} \left\{ R \dot{\theta}^2 - 2\mu R \dot{\theta}^2 \sin^2 \theta \right\} - mgR \sin \theta = -mgR \sin \theta_0$$

$$\rightarrow \dot{\theta}^2 = \frac{2g(\sin \theta - \sin \theta_0)}{R(1-\mu \sin^2 \theta)}, \quad \mu = \frac{m}{M+m}$$

Þetta þarf að nota \dot{c}

$$\lambda = \frac{m(\mu-1) \{g \sin \theta + R \dot{\theta}^2\}}{1-\mu \sin^2 \theta}$$

$$\lambda = \frac{m(\mu-1)}{(1-\mu \sin^2 \theta)^2} \left\{ g \sin \theta (1-\mu \sin^2 \theta) + 2g(\sin \theta - \sin \theta_0) \right\}$$

$$= \frac{m(\mu-1)}{(1-\mu \sin^2 \theta)^2} \left\{ 3g \sin \theta - g\mu \sin^3 \theta - 2g \sin \theta_0 \right\}$$

$$= \frac{m(\mu-1)g}{(1-\mu \sin^2 \theta)^2} \left\{ 3 \sin \theta - \mu \sin^3 \theta - 2 \sin \theta_0 \right\}$$

Alkrafturinn $Q_r = \lambda \frac{\partial f}{\partial r} = \lambda$ $\mu = \frac{m}{M+m}$

Ef $M \rightarrow \infty$, þá $M \gg m$ fast $\lambda = -mg \{3 \sin \theta - 2 \sin \theta_0\}$

Ef síðan $\theta_0 = 0 \rightarrow \lambda = -mg 3 \sin \theta$

8-32 Athuga stöðuleika kringbrauta fyrir kraftinn (1)

$$F(r) = -\frac{k}{r^2} e^{-r/a}$$

Sannkræmt (8.93) sýndu að gúla að

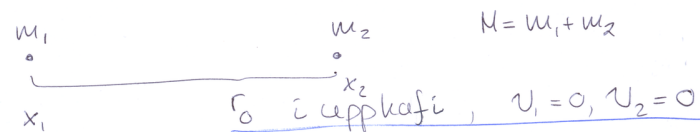
$$\frac{F'(r)}{F(r)} + \frac{3}{r} > 0$$

$$\rightarrow \frac{\left\{ \frac{2k}{r^3} e^{-r/a} + \frac{k}{ar^2} e^{-r/a} \right\}}{-\frac{k}{r^2} e^{-r/a}} + \frac{3}{r} > 0$$

$$\rightarrow \frac{2k + \frac{rk}{a}}{-kr} + \frac{3}{r} > 0 \quad \left| \quad \frac{2 + \frac{r}{a}}{-r} + \frac{3}{r} > 0 \right.$$

$$\rightarrow \frac{3-2-\frac{r}{a}}{r} > 0 \quad \rightarrow \underline{r < a}$$

08-06 Tveir massar (2)



$$r = |x_2 - x_1|, \quad r < r_0 \text{ þegar } t > 0$$

Heildarorkan er þá stöðuorkan í upphafi

$$E_{\text{total}} = -G \frac{m_1 m_2}{r_0}$$

Síðar í tíma: $E_{\text{total}} = \frac{m_1}{2} \dot{x}_1^2 + \frac{m_2}{2} \dot{x}_2^2 - G \frac{m_1 m_2}{r}$

Ortansvörðulett, engin ytri kraftir \rightarrow heildarstreipungin er líka vörðulettur

$$\textcircled{1} \quad \underbrace{p = m_1 \dot{x}_1 + m_2 \dot{x}_2 = 0}_{\text{total}} \quad \left\{ \begin{array}{l} \text{því ogvirnarvona} \\ \text{kyrvar 2 upphafi} \end{array} \right.$$

Ortafærslan:

$$\textcircled{2} \quad -G \frac{m_1 m_2}{r_0} = \frac{m_1 \dot{x}_1^2}{2} + \frac{m_2 \dot{x}_2^2}{2} - G \frac{m_1 m_2}{r}$$

Notum $\textcircled{1} \rightarrow m_1 \dot{x}_1 + m_2 \dot{x}_2 = 0 \rightarrow m_2 \dot{x}_2 = -m_1 \dot{x}_1$

\hat{i} $\textcircled{2}$

$$-G m_1 m_2 \left\{ \frac{1}{r_0} - \frac{1}{r} \right\} = \frac{m_1}{2} \dot{x}_1^2 + \frac{m_1^2}{2m_2} \dot{x}_1^2$$

$$= \frac{m_1^2}{2} \left\{ \frac{\dot{x}_1^2}{m_1} + \frac{\dot{x}_1^2}{m_2} \right\} = \frac{\dot{x}_1^2}{2} m_1^2 \left\{ \frac{m_2 + m_1}{m_1 m_2} \right\}$$

$$\dot{x}_1^2 = 2 \frac{m_1 m_2}{M} \frac{1}{m_1^2} \cdot G m_1 m_2 \left\{ \frac{1}{r} - \frac{1}{r_0} \right\}$$

$$= 2 \frac{m_2}{M} G \left\{ \frac{1}{r} - \frac{1}{r_0} \right\}$$

$$\rightarrow \dot{x}_1 = m_2 \sqrt{\frac{2G}{M} \left\{ \frac{1}{r} - \frac{1}{r_0} \right\}}$$

og vegna $\textcircled{1}$ fæst því stæx

$$\dot{x}_2 = -m_1 \sqrt{\frac{2G}{M} \left\{ \frac{1}{r} - \frac{1}{r_0} \right\}}$$

$\textcircled{3-20}$ Sjáa að fjarir sínd á sporbaug gæli $\textcircled{5}$

Ögn í þyngsbrennelli

$$\left\langle \left(\frac{a}{r} \right)^4 \cos^4 \theta \right\rangle = \frac{E}{(1-e^2)^{5/2}}$$

finna meðaltal

Samkvæmt (8-41)

$$\textcircled{1} \quad \frac{a}{r} = 1 + e \cos \theta, \quad a = \frac{l^2}{\mu k} \quad \mu = \frac{m_1 m_2}{m_1 + m_2}$$

og (8-42)

$$l = \mu r^2 \dot{\theta} = \text{fasti}$$

$$F = -\frac{k}{r^2}$$

$$\textcircled{2} \quad a = \frac{a}{1-e^2} = \frac{k}{21E}$$

Notum $\textcircled{1}$ og $\textcircled{2}$ til að skrifa

$$\frac{a}{r} = 1 + e \cos \theta, \quad a = a(1-e^2)$$

$$\rightarrow \frac{a(1-e^2)}{r} = 1 + e \cos \theta \rightarrow \frac{a}{r} = \frac{1 + e \cos \theta}{(1-e^2)}$$

$$\rightarrow \left(\frac{a}{r} \right)^4 \cos^4 \theta = \left\{ \frac{1 + e \cos \theta}{(1-e^2)} \right\}^4 \cos^4 \theta$$

$$\rightarrow \left\langle \left(\frac{a}{r} \right)^4 \cos^4 \theta \right\rangle = \frac{1}{2\pi} \int_0^{2\pi} dt \left\{ \frac{1 + e \cos \theta}{(1-e^2)} \right\}^4 \cos^4 \theta$$

Eigum eftir að tengja θ og t

Ánnæð lögmál Keplers (8-12)

(7)

$\frac{dA}{dt} = \frac{r^2}{2} \frac{d\theta}{dt} = \text{fasti}$
 cg $\frac{dA}{dt} = \frac{\pi ab}{\tau} = \frac{\text{flötur tímalotu}}{\tau}$
 $dt = \frac{\tau}{\pi ab} dA = \frac{\tau}{\pi ab} \frac{r^2}{2} d\theta$
 $= \frac{\tau}{\pi ab} \frac{x^2}{2(1+e \cos \theta)^2} d\theta$ $x = a(1-e^2)$
 $\rightarrow \left\langle \left(\frac{a}{r}\right)^4 \cos \theta \right\rangle = \frac{1}{\tau} \frac{1}{(1-e^2)^2} \frac{\tau}{\pi ab} \frac{a^2}{2} \int_0^{2\pi} d\theta \cos \theta (1+e \cos \theta)^2$

(8)

$$= \frac{1}{(1-e^2)^2} \frac{a^2}{2\pi ab} \int_0^{2\pi} d\theta \cos \theta (1+e \cos \theta)^2$$

$\underbrace{\hspace{10em}}_{2\pi e}$

$$= \frac{1}{(1-e^2)^2} \frac{ae}{b} = \frac{e}{(1-e^2)^{5/2}}$$

$$b = \frac{x}{\sqrt{1-e^2}} = \frac{a(1-e^2)}{\sqrt{1-e^2}} = a(1-e^2)^{1/2}$$

08-10 Ef braut jörðar væri krúnger, hvað gæðist ef massi sólar helmingast allt í einu (9)

Krúnger $\rightarrow T = \frac{m}{R} (\omega R)^2$ R : geisli brautar jörðar
 m : massi jörðar
 M : massi sólar

$U = -G \frac{Mm}{R}$
 fyrir krúngbraut þarf þyngðakraftinum að vera jafn miðsökuhrkraftinum, sem er hvarfguþega fyrir krúngbraut

$$m\omega^2 R = G \frac{Mm}{R^2}$$

$$\rightarrow \omega^2 = \frac{GM}{R^3}$$

(10)

$$\rightarrow T = \frac{m}{R} \frac{GM R^2}{R^3} = G \frac{Mm}{2R} = -\frac{1}{2} U$$

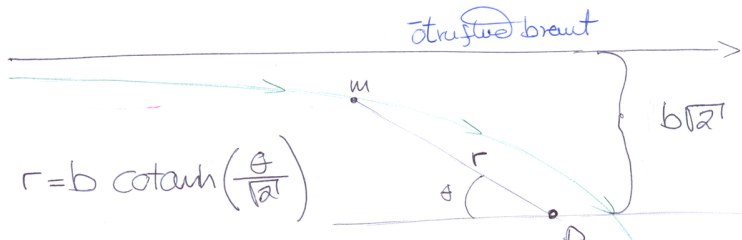
$\rightarrow E = T + U = \frac{U}{2}$
 Ef massi sólar helmingast þá T öbreytt en U helmingast. Nýja orkan væri þá

$$E_2 = T + U_2 = T + \frac{U}{2} = 0$$

\rightarrow brautin breytist í fleygþega og jörðin yfirgæfi sólina

08-15

(11)



sjána að $r = b \coth\left(\frac{\theta}{\sqrt{2}}\right)$

Hverfingum um P er fasti
í upphafi er hann

$$l = m v(b\sqrt{2})$$

hæði massans í mikilli
fjarlægð, upphafs hraði

Ef P er kraftmiðja
með $F = -\frac{k}{r^5}$

og hverfingum um P er $\frac{\sqrt{km}}{b}$

$$l = \frac{\sqrt{km}}{b} = m v(b\sqrt{2})$$

hverfingum er
vörðulegur

Til að
virkja
sé í
lagi

$\rightarrow v = \sqrt{\frac{k}{2m} \frac{1}{b^2}}$, og heildarortan sem líka er
vörðulegt er upphaflega hreyfiortan

$$E = \frac{m}{2} v^2 = \frac{m}{2} \frac{k}{2} \frac{1}{b^4 m} = \frac{k}{4b^4}$$

Gefið $F(r) = -\frac{k}{r^5}$

$$\rightarrow d\theta = \frac{l}{r^2} \frac{dr}{\sqrt{2m \left\{ E + \frac{k}{4r^4} - \frac{l^2}{2mr^2} \right\}}}$$

$\frac{k}{4b^4}$ $U(r)$ $l^2 = \frac{k}{b^2}$

(12)

(13)

$$d\theta = \frac{\sqrt{km}}{br^2} \frac{dr}{\sqrt{\frac{km}{2b^4} + \frac{km}{2r^4} - \frac{km}{b^2 r^2}}} = b\sqrt{2} \frac{dr}{\sqrt{r^4 - 2b^2 r^2 + b^4}}$$

$$= b\sqrt{2} \frac{dr}{(r^2 - b^2)^2} = -b\sqrt{2} \frac{dr}{r^2 - b^2}$$

- græmin á rétlinni er valin þ.s. θ vex þ. r minnkar
samkvæmt myndinni á síðu (11).....

Heildun

$$\theta = b\sqrt{2} \frac{1}{2b} \ln \left\{ \frac{r+b}{r-b} \right\} + \theta_0 = \sqrt{2} \operatorname{Arcoth} \left(\frac{r}{b} \right) + \theta_0$$

þegar $r \rightarrow \infty$, sýnir myndin að $\theta_0 = 0$

stökum

$$r = b \coth \left\{ \frac{\theta - \theta_0}{\sqrt{2}} \right\}$$

$r \rightarrow \infty$ þegar $\theta \rightarrow 0$
ef $\theta_0 = 0$

$$\rightarrow r = b \coth \left(\frac{\theta}{\sqrt{2}} \right)$$

sjá mynd á síðu (15)

08-13

Stöðu hreyfingu ogner í kraftsvæði

$$F(r) = -\frac{k}{r^2} - \frac{\lambda}{r^3}, \quad k > 0, \lambda > 0$$

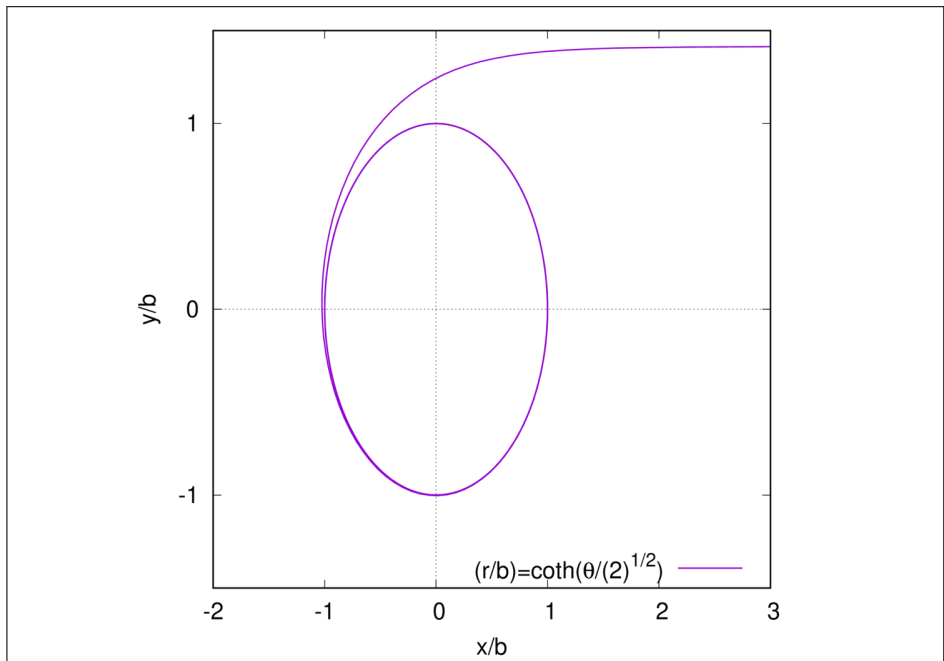
athuga til felli

$$\lambda < \frac{l^2}{\mu}$$

og $\lambda > \frac{l^2}{\mu}$

$$\lambda = \frac{l^2}{\mu}$$

(14)



Notum (8.20) þar sem $u = \frac{1}{r}$

$$\frac{d^2 u}{d\theta^2} + u = -\frac{\mu}{l^2} \frac{1}{u^2} F\left(\frac{1}{u}\right)$$

sem veður þá

$$\frac{d^2 u}{d\theta^2} + u = -\frac{\mu}{l^2 u^2} \{-ku^2 - \lambda u^3\}$$

$$\rightarrow \boxed{\frac{d^2 u}{d\theta^2} + \left\{1 - \frac{\mu\lambda}{l^2}\right\} u = \frac{\mu k}{l^2}}$$

sem er einföld línu afleiðing, sem hefur er að annar hliðin er óháð θ jafnan

sem sást með að skrifa

$$\frac{d^2 u}{d\theta^2} + \left\{1 - \frac{\mu\lambda}{l^2}\right\} \left\{u - \frac{(\mu k/l^2)}{(1 - \mu\lambda/l^2)}\right\} = 0$$

og skilgreina nýtt fall

$$v = u - \frac{(\mu k/l^2)}{(1 - \mu\lambda/l^2)}$$

þetta fall

þá fæst óháð jafnan

$$\boxed{\frac{d^2 v}{d\theta^2} + \left\{1 - \frac{\mu\lambda}{l^2}\right\} v = 0} \quad (1)$$

Eins og jafnan fyrir hringtönu sveifilinum en $\beta^2 = \left\{1 - \frac{\mu\lambda}{l^2}\right\}$ sem er sambærilegt við ω^2 í sveifilinum gefur verið jákvætt, neikvætt, eða 0

$$\frac{\mu\lambda}{l^2} < 1 \rightarrow \beta^2 > 0$$

① hefur þá lausn

$$v = A \cos(\beta\theta + \delta), \text{ veljum } \theta_0 \text{ þ.o. } \delta = 0$$

$$v = A \cos(\beta\theta) = u - \frac{\mu k}{l^2 - \mu\lambda}, \quad u = \frac{1}{r}$$

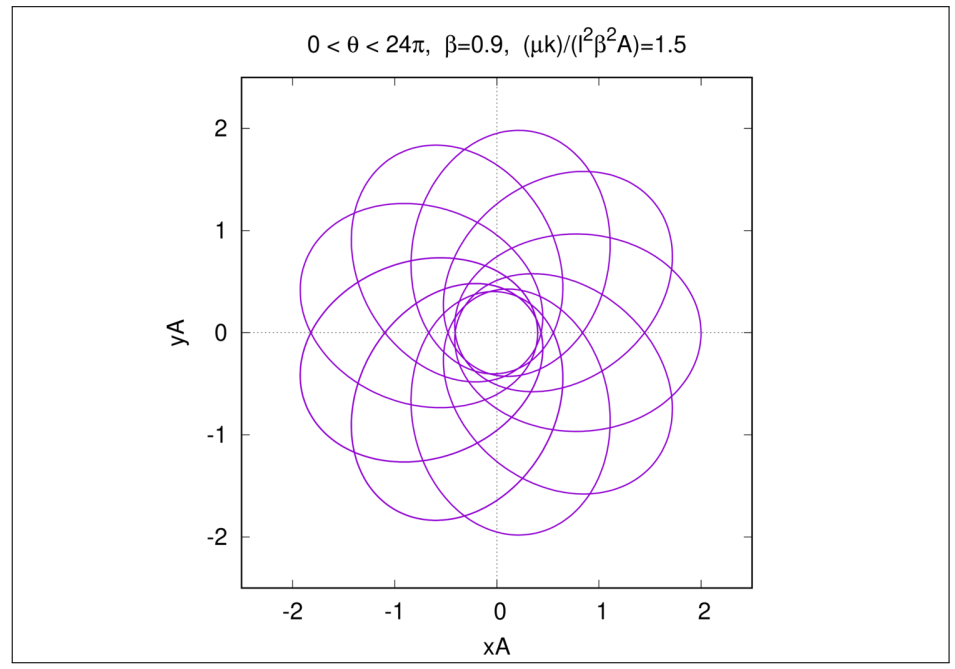
$$\rightarrow \boxed{\frac{1}{r} = A \cos(\beta\theta) + \frac{\mu k}{l^2 - \mu\lambda}}$$

$$\frac{1}{r} = A \cos(\beta\theta) + \frac{\mu k}{l^2 - \mu\lambda}$$

$$\frac{1}{rA} = \cos(\beta\theta) + \frac{\mu k}{l^2 \beta^2 A}$$

$$\rightarrow rA = \frac{1}{\cos(\beta\theta) + \frac{\mu k}{l^2 \beta^2 A}}$$

Sjá stöðing brautarinnar á síðu 20



$$\frac{\mu k}{l^2} = 1 \rightarrow \beta = 0$$

fyrir u veri jafnan þá

$$\frac{d^2 u}{d\theta^2} = \frac{\mu k}{l^2} \rightarrow u = \frac{\mu k}{2l^2} \theta^2 + A\theta + B = \frac{1}{r}$$

→ ögnin fellur inn í kraftmiðjuna með minnkandi gæmkeystíngu

$$\frac{\mu k}{l^2} > 1 \rightarrow \beta^2 < 0$$

$$v = A \cosh\{\beta|\theta - \theta_0\}$$

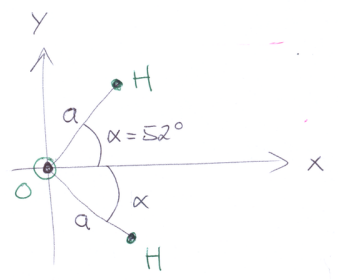
lausnin verður

$$\frac{1}{r} = A \cosh\{\beta|\theta\} + \frac{\mu k}{l^2 - \mu k}$$

→ ögnin fellur í gæmkeystíngu inn að kraftmiðju

09-07

H₂O fínna CM



spjgilsamhverfa um x-ás

-> Y_{CM} = 0

$$X_{CM} = \frac{1}{M} \sum_{i=1}^3 m_i x_i$$

m₀ = 16 m_H

M = m₀ + 2 m_H = (16 + 2) m_H

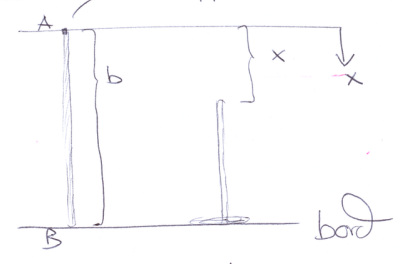
$$X_{CM} = \frac{1}{18 m_H} \cdot 2 m_H \cdot a \cdot \cos \alpha$$

$$= \frac{a}{9} \cos \alpha \approx 0.068 \cdot a$$

1

09-19

sléppt klukkun t=0, lengd b



$$g = \frac{M}{b}$$

Hver er kraftur bordsús F á keðjuna sem fell af x?

fyrir t > 0

{ Þegar hún hefur öll fallið er $\bar{F} = +g b \hat{e}_x$ og massamiðjan kyrr $\rightarrow \frac{dp}{dt} = 0$, þú kraftur bordsús er $-\bar{F}$

þú er $\frac{dp}{dt} = g b - F$ $p = g(b-x)x$

2

3

$$\frac{dp}{dt} = \frac{d}{dt} \{g(b-x)x\} = -g \dot{x} \dot{x} + g(b-x) \ddot{x}$$

Massamiðjan er í þyngdarsviði

$$\rightarrow \ddot{x} - g = 0$$

Orkuskiptaverka $E = \frac{m}{2} \dot{x}^2 - mgx$,

$$\rightarrow \dot{x}^2 = 2gx$$

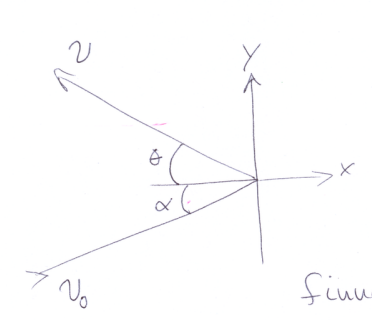
fella er kyrrstöðu með x=0
L > E=0

$$\frac{dE}{dt} = -g \dot{x} g + g(b-x)g = g \{bg - 3gx\}$$

og öðru

$$\frac{dp}{dt} = g b - F \rightarrow F = 3g g x, \text{ og } \bar{F} = -3g g \hat{e}_x$$

09-42



alpha = 30 degrees
v₀ = 5 m/s

$$E = \frac{|v|}{|v_0|} \text{ hér } E = 0.8$$

finna N og theta

Engin breyting í hreyfingu í y-átt

$$\rightarrow \underbrace{v_0 \sin \alpha}_{v_{y0}} = \underbrace{v \sin \theta}_{v_y} \rightarrow v = v_0 \frac{\sin \alpha}{\sin \theta}$$

Vagna öfþjodandi áætsturs, ljóst með E $v_y = v_0 \sin \alpha$ þetta

$$\rightarrow \left| \frac{v_x}{v_{x0}} \right| = \left| \frac{v \cos \theta}{v_0 \cos \alpha} \right| = E$$

4

$$v_x = E v_0 \cos \alpha$$

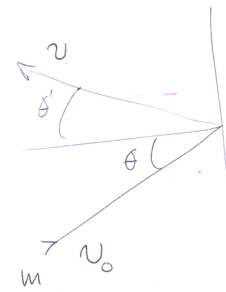
$$\rightarrow v = \sqrt{v_x^2 + v_y^2} = v_0 \sqrt{E^2 \cos^2 \alpha + \sin^2 \alpha} = v_0 \cdot 0,8544$$

$$\frac{v_y}{v_x} = \frac{v_0 \sin \alpha}{E v_0 \cos \alpha} = \tan \theta$$

$$\rightarrow \theta = \arctan \left\{ \frac{\sin \alpha}{E \cos \alpha} \right\} = 0,62513 \text{ rad} \\ \approx 35,82^\circ$$

(5)

09-37



E gefið með θ og mi
finna v og θ'

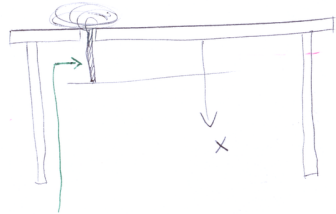
samadhanu og dæmið að
undir, og nú sést hvers vegna
elli var gott að setja strax
in tölur þar

$$v = v_0 \sqrt{E^2 \cos^2 \theta + \sin^2 \theta'}$$

$$\theta' = \arctan \left\{ \frac{1}{E} \tan \theta \right\}$$

(6)

09-15



Hlutur $t=0$ fellur reipið niður um gattit
Ekkert viðham, finna v og a
sem föll af x
Heitast lengd reipis er L

$$g = \frac{M}{L}$$

$m = gx$ er massi reipis
sem hangir

$$\frac{dp}{dt} = mg = gx$$

$$\frac{d}{dt}(mv) = m\dot{v} + m\dot{v}v \\ = g\dot{x}v + m\dot{v} \\ = gv^2 + m\dot{v}$$

$$gv^2 + g\dot{x}v = gx \rightarrow v^2 + x\dot{v} = gx$$

$$\rightarrow v^2 + x \frac{dv}{dt} = gx \rightarrow v^2 + x \frac{dv}{dx} \frac{dx}{dt} = gx$$

(7)

$$v^2 + x \frac{dv}{dx} = gx$$

límbu af v og x fyrir v sem
falli af x (t er kortið)

lepphatsstýrði $v(0)=0, x(0)=0$, reynum þú velbistaðan

$v = cx^\alpha$, setjum inn í jöfnu

$$(cx^\alpha)^2 + x(cx^\alpha)(c\alpha x^{\alpha-1}) = gx$$

$$\rightarrow c^2 x^{2\alpha} + c^2 \alpha x^{2\alpha} = gx$$

$$c^2 \{1 + \alpha\} x^{2\alpha} = gx$$

$$c^2 \{1 + \alpha\} x^{2\alpha} = gx$$

þú fast $2\alpha = 1$
og

$$c^2 \{1 + \alpha\} = g$$

$$c^2 \frac{3}{2} = g$$

$$\rightarrow c = \sqrt{\frac{2g}{3}}$$

(8)

færi er leysunin

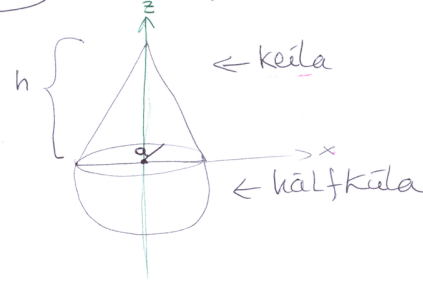
$$v = \sqrt{\frac{2gx}{3}}$$

$$a = \frac{dv}{dt} = \frac{dv}{dx} \frac{dx}{dt} = v \frac{dv}{dx} = \sqrt{\frac{2gx}{3}} \cdot \frac{1}{2} \sqrt{\frac{2g}{3x}}$$

$$= \frac{2g}{3} \cdot \frac{1}{2} = \frac{g}{3}$$

9

09-03 CM fyrir



Samhverft um z-ás
 $\rightarrow Y_{cm} = 0, X_{cm} = 0$
 Þessum að finna Z_{cm}

10

Sívalingur:

$$Z_{cm} = \frac{1}{M} \int_A z dm$$

$$Z_{cm} = \frac{\int_0^{2\pi} d\theta \int_0^a r dr \int_0^{h-\frac{hr}{a}} dz \rho z}{\int_0^{2\pi} d\theta \int_0^a r dr \int_0^{h-\frac{hr}{a}} dz \rho}$$

11

$$Z_{cm} = \frac{\frac{h^2}{2} \int_0^a r dr (1 - \frac{r}{a})^2}{h \int_0^a r dr (1 - \frac{r}{a})} = \frac{\frac{h^2}{2} \frac{a^2}{12}}{h \frac{a^2}{6}} = h \cdot \frac{1}{4}$$

Hálfkúla:

$$Z_{cm} = \frac{\int_0^{2\pi} d\phi \int_{\pi/2}^{\pi} \sin\theta d\theta \int_0^a r^2 dr \rho z}{\int_0^{2\pi} d\phi \int_{\pi/2}^{\pi} \sin\theta d\theta \int_0^a r^2 dr \rho}$$

$z = r \cos\theta$

12

$$Z_{cm} = \frac{\int_{\pi/2}^{\pi} \sin\theta \cos\theta d\theta \int_0^a r^3 dr \cdot \rho}{\frac{4\pi}{6} a^3 \rho} = \frac{-\frac{1}{2} \cdot \frac{a^4}{4} \rho}{\frac{2}{3} a^3 \rho}$$

$$= -\frac{3}{8} a$$

\rightarrow Ef klutirnir eru með sama massafjölgunum fast


$$Z_{cm} = \frac{M_K (Z_{cm})_K + M_{HK} (Z_{cm})_{HK}}{M_K + M_{HK}}$$

$$Z_{\text{ax}} = \frac{(2\pi \frac{h a^2}{6} g) \cdot \frac{h}{4} - (\frac{4\pi}{6} a^3 g) \frac{3a}{8}}{2\pi \frac{h a^2}{6} g + \frac{4\pi}{6} a^3 g}$$

$$= \frac{h^2 - 3a^3}{4(h + 2a)}$$

(13)

(10-12)

A breiddargræðu λ reikna þrævik lóðtímu ①
 frá "lóðrettu" stílgræðu án súningu
 sýna 

$$E = \frac{R\omega^2 \sin\lambda \cos\lambda}{g_0 - R\omega^2 \cos^2\lambda}$$

Notum (10.32)

$$\vec{F}_{\text{eff}} = \vec{S} + m\vec{g}_0 - m\vec{\omega} \times (\vec{\omega} \times \vec{r}) - 2m\vec{\omega} \times \vec{v}_r$$

Setjum

$$\vec{S} = 0 \quad \text{þvír kraftur}$$

$$\vec{v}_r = 0 \quad \text{enginn hraði lóðs}$$

$$\vec{r} = (0, 0, R) \quad \text{geisti fæður}$$

$$\vec{\omega} = (-\omega \cos\lambda, 0, \omega \sin\lambda) \quad \leftarrow \vec{\omega} \text{ í local miðrum } r$$



$$\vec{g}_0 = (0, 0, -g_0)$$

því fast æt

$$\vec{\omega} \times \vec{r} = (-\omega \cos\lambda, 0, \omega \sin\lambda) \times (0, 0, R)$$

$$= \omega R \cos\lambda \cdot \hat{e}_y$$

$$-m\vec{\omega} \times (\vec{\omega} \times \vec{r}) = -m(-\omega \cos\lambda, 0, \omega \sin\lambda) \times (0, 1, 0) \omega R \cos\lambda$$

$$= m\omega^2 R \left\{ \sin\lambda \cos\lambda \cdot \hat{e}_x + \cos^2\lambda \cdot \hat{e}_z \right\}$$

og því

$$\vec{F}_{\text{eff}} = -m g_0 \hat{e}_z + m\omega^2 R \left\{ \sin\lambda \cos\lambda \cdot \hat{e}_x + \cos^2\lambda \cdot \hat{e}_z \right\}$$

sem hefur bæði \hat{e}_x og \hat{e}_z þatti

(2)

því gildir um þrævik æt

$$\tan E = \frac{(\vec{F}_{\text{eff}})_x}{(\vec{F}_{\text{eff}})_z} = \frac{\omega^2 R \sin\lambda \cos\lambda}{g_0 - \omega^2 R \cos^2\lambda}$$

$$= \frac{\sin\lambda \cos\lambda}{\frac{g_0}{\omega^2 R} - \cos^2\lambda}$$

$$\frac{g_0}{\omega^2 R} = \frac{9.81 \text{ m/s}^2}{(7.3 \cdot 10^{-5} \frac{1}{s})^2 \cdot 6.4 \cdot 10^5 \text{ m}} \sim 2.9 \cdot 10^3$$

$$\rightarrow E \approx \frac{\sin\lambda \cos\lambda}{\frac{g_0}{\omega^2 R} - \cos^2\lambda} \approx \frac{\sin\lambda \cos\lambda}{\frac{g_0}{\omega^2 R}}$$

$$= \frac{\omega^2 R}{g_0} \sin(2\lambda)$$

(3)

10-03 μ_s , $\vec{r}' = \vec{R} + \vec{r}$ fast kerfi

↑ ↑ ↑
 uppkaf snúningskerfis snúningskerfi

Jafna (10.25) gefur í fasta kerfinu

$$\vec{F}_{\text{eff}} = \vec{F} - m\ddot{\vec{R}}_f - m\vec{\omega} \times \vec{r} - m\vec{\omega} \times (\vec{\omega} \times \vec{r}) - 2m\vec{\omega} \times \vec{v}_r$$

↑ í snúningskerfinu

Einu kreftumir eru miðsökuur og viðnáms
 Hversu langt þá vægja getur þökturinn legið á
 þess ~~æð~~ semna til

$$\rightarrow \mu_s mg = m\omega^2 r \rightarrow r = \frac{\mu_s g}{\omega^2}$$

10-05 Eins og nefnt er í Ex. 10.2 í bókinni

$$\vec{F}_{\text{eff}} = m\vec{\omega} \times (\vec{\omega} \times \vec{r}) - 2m\vec{\omega} \times \vec{v}_r$$

$$\vec{a}_{\text{eff}} = -\vec{\omega} \times (\vec{\omega} \times \vec{r}) - 2\vec{\omega} \times \vec{v}_r$$

$$\vec{\omega} = \omega \hat{e}_z \quad \vec{\omega} = (0, 0, \omega)$$

$$\vec{r} = (x, y, 0)$$

$$\vec{v}_r = (\dot{x}, \dot{y}, \dot{z})$$

$$\rightarrow \vec{a}_{\text{eff}} = (\ddot{x}, \ddot{y}, 0) = \omega^2(x, y, 0) - 2\omega(\dot{x}, -\dot{y}, 0)$$

$$\rightarrow \begin{cases} \ddot{x} = \omega^2 x + 2\omega \dot{y} \\ \ddot{y} = \omega^2 y - 2\omega \dot{x} \end{cases}$$

Um skrifum sem

$$y_1 = x \rightarrow \dot{y}_1 = \dot{x} = y_2$$

$$y_2 = \dot{x} \rightarrow \dot{y}_2 = \ddot{x} = \omega^2 x + 2\omega \dot{y} = \omega^2 y_1 + 2\omega y_4$$

$$y_3 = y \rightarrow \dot{y}_3 = \dot{y} = y_4$$

$$y_4 = \dot{y} \rightarrow \dot{y}_4 = \ddot{y} = \omega^2 y - 2\omega \dot{x} = \omega^2 y_3 - 2\omega y_2$$

Hneppid er þú

$$\begin{cases} \dot{y}_1 = y_2 \\ \dot{y}_2 = \omega^2 y_1 + 2\omega y_4 \\ \dot{y}_3 = y_4 \\ \dot{y}_4 = \omega^2 y_3 - 2\omega y_2 \end{cases}$$

uppkafsstærðir

$$y_1 = -0,5m$$

$$y_3 = 0 \text{ m}$$

$$y_2 = \frac{v_0}{\sqrt{2}} \frac{m}{s}$$

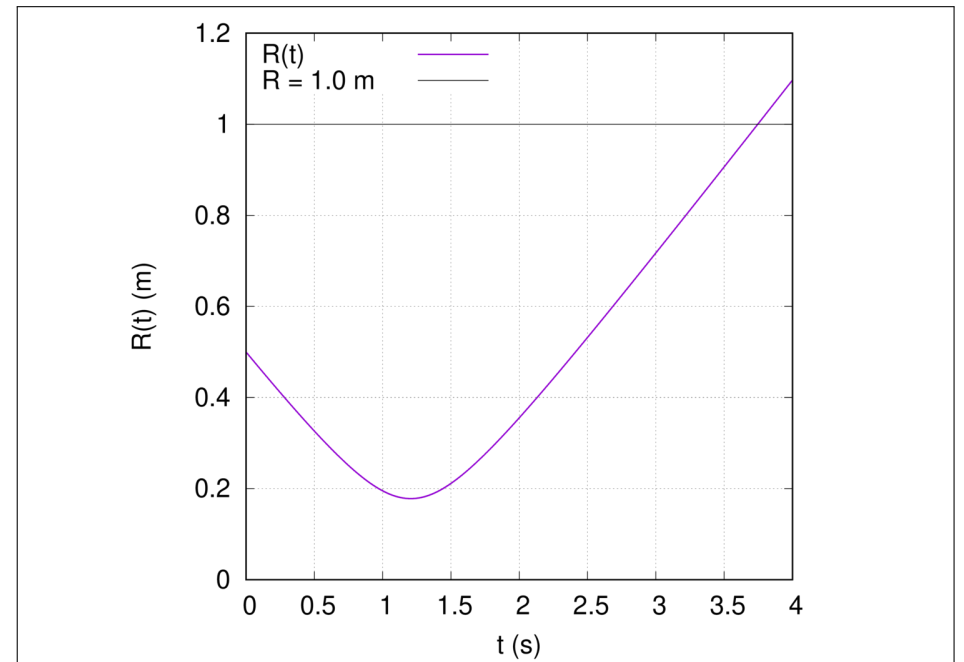
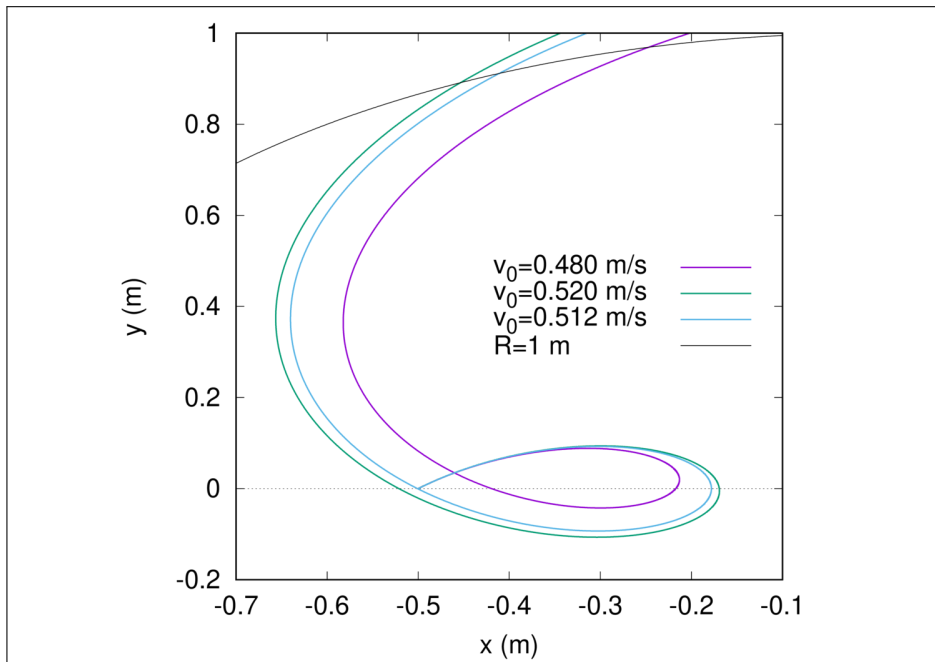
$$y_4 = \frac{v_0}{\sqrt{2}} \frac{m}{s}$$

Samkvæmt Ex 10.2 þarf ~~æð~~ reyna v_0 á bilinu

$$0,47 \frac{m}{s} < v_0 < 0,53 \frac{m}{s}, \quad \omega = 1 \frac{rad}{s}, \quad R = 1m$$

Viljum finna v_0 sem fær þökturinn til ~~æð~~ koma aftur í gegnum
 uppkafs punktinu, og tíman þar til hann þar út af

Sjá gröf á tveimur næstu síðum



10-15) Höfum fasta kerfi með hnit x_f , og snuningskerfi með x_r .
 Gerum það fyrir að upphafspunktur kerfanna fallisaman

$$\rightarrow \bar{v}_f = \bar{v}_r + \bar{\omega} \times \bar{r}_r$$

og í fasta kerfinu er

$$L = \frac{m}{2} \bar{v}_f^2 - U(r_f)$$

með breyttum hnitum fast

$$L = \frac{m}{2} \left\{ (\bar{v}_r + \bar{\omega} \times \bar{r}_r)^2 \right\} - U(r_f)$$

10

$$\rightarrow L = \frac{m}{2} \left\{ v_r^2 + 2 \bar{v}_r \cdot (\bar{\omega} \times \bar{r}_r) + (\bar{\omega} \times \bar{r}_r)^2 \right\} - U(r_f)$$

\bar{p}_r verðum við að skilgreina sem

$$\bar{p}_r = \frac{\partial L}{\partial \bar{v}_r} = m \bar{v}_r + m (\bar{\omega} \times \bar{r}_r)$$

og fall Hamiltons verður

$$H = \bar{v}_r \cdot \bar{p}_r - L = \frac{m}{2} v_r^2 - \frac{m}{2} (\bar{\omega} \times \bar{r}_r)^2 - U(r_f)$$

H er ekki fall af t , ekki heldur L

$$\rightarrow \frac{\partial H}{\partial t} = 0 \quad \frac{\partial L}{\partial t} = 0$$

11

En kúttin \vec{r}_F og \vec{r}_r tengjast á tímahorðum hátt

$\rightarrow H \neq E$

Skodum áðinn

$$U_c = -\frac{m}{2} (\vec{\omega} \times \vec{r}_F)^2$$

$$-\nabla_r U_c = \frac{m}{2} \nabla_r \left[\omega^2 r^2 - (\vec{\omega} \cdot \vec{r}_F)^2 \right]$$

$$= m \left\{ \omega^2 \vec{r}_F - (\vec{\omega} \cdot \vec{r}_F) \vec{\omega} \right\} =$$

$$= -m \vec{\omega} \times (\vec{\omega} \times \vec{r}_F)$$

Miðstökuorkrefturinn

$$\vec{a} \times (\vec{b} \times \vec{c}) = (\vec{a} \cdot \vec{c}) \vec{b} - (\vec{a} \cdot \vec{b}) \vec{c}$$

$$(\vec{a} \times \vec{b}) \cdot (\vec{c} \times \vec{d}) = (\vec{a} \cdot \vec{c})(\vec{b} \cdot \vec{d}) - (\vec{a} \cdot \vec{d})(\vec{b} \cdot \vec{c})$$

$$(\vec{a} \times \vec{b}) \cdot (\vec{a} \times \vec{b}) = (\vec{a}^2 \vec{b}^2 - (\vec{a} \cdot \vec{b})(\vec{a} \cdot \vec{b}))$$

$$\vec{\nabla}(\vec{a} \cdot \vec{b})$$

$$= (\vec{a} \cdot \vec{\nabla}) \vec{b} + (\vec{b} \cdot \vec{\nabla}) \vec{a}$$

$$+ \vec{a} \times (\vec{\nabla} \times \vec{b})$$

$$+ \vec{b} \times (\vec{\nabla} \times \vec{a})$$

$$\vec{\nabla} \times \vec{r} = 0$$

14

Falltími blýsins er $t = \sqrt{\frac{2h}{g}}$

$$\rightarrow X_c(t) = \omega \cos \lambda \frac{g}{3} \left(\frac{2h}{g} \right)^{3/2}$$

$$= \omega \cos \lambda \frac{1}{3} \sqrt{\frac{8h^3}{g}}$$

$$= (7.3 \cdot 10^{-5} \frac{1}{s}) \cos(42^\circ) \sqrt{\frac{8(27m)^3}{9.81 \frac{m}{s^2}}}$$

$$\approx 0.0023 \text{ m}$$

10-22

Við $\lambda = 42^\circ N$ fellur blý $h = 27m$

reikna háuð þá Lóðrettu...

13

Coriolis hröðun $\vec{a}_c = 2\vec{v} \times \vec{\omega}$

\rightarrow háuð í austur með $|\vec{a}_c| = a_c = 2v\omega \cos \lambda$

$$\rightarrow v_c(t) = \int_0^t a_c dt' = \int_0^t dt' 2v(t') \omega \cos \lambda$$

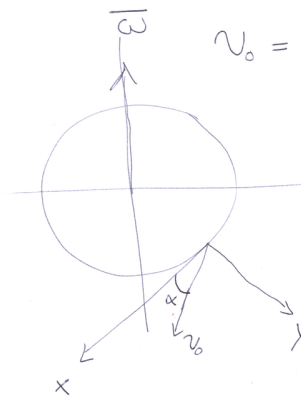
$$= 2\omega \cos \lambda \int_0^t dt' (gt) = \omega \cos \lambda \cdot gt^2$$

$$\rightarrow X_c(t) = \int_0^t dt' v_c(t') = \omega \cos \lambda \frac{gt^3}{3}$$

10-18

$\lambda = 50^\circ S$ skatið stöður $\alpha = 37^\circ$

$v_0 = 800 \text{ m/s}$ hve stór er Coriolis geigun



$$\vec{v} = \begin{pmatrix} v_x \\ v_y \\ 0 \end{pmatrix} = \begin{pmatrix} v_0 \cos \alpha \\ v_0 \sin \alpha - gt \\ 0 \end{pmatrix}$$

$$\vec{\omega} = \begin{pmatrix} -\omega \cos \lambda \\ -\omega \sin \lambda \\ 0 \end{pmatrix}$$

$$\vec{a}_c = 2\vec{v} \times \vec{\omega}$$

$$= \hat{e}_z \left\{ -2v_0 \omega \cos \alpha \sin \lambda + 2(v_0 \sin \alpha - gt) \omega \cos \lambda \right\}$$

15

$$v_c = \int_0^t a_c(t') dt' = \hat{e}_z \left\{ 2v_0 \omega t (\sin \lambda \cos \lambda - \cos \lambda \sin \lambda) - \omega \cos \lambda \cdot g t^2 \right\}$$

flugtími $\rightarrow t = \frac{2v_0 \sin \lambda}{g}$

Greigunin \rightarrow

$$z_c = \int_0^t v_c dt' = v_0 \omega t^2 (\sin \lambda \cos \lambda - \cos \lambda \sin \lambda) - \omega \cos \lambda \frac{g t^3}{3}$$

$$\rightarrow z_c = -272 \text{ m}$$

um \hat{e} blöð til austurs

(16)

(11-12)

Sýna að engin hver fjögur um höfuðs geti verið meiri en summa hinna tveggja

flugsam um I_i

$$I_j + I_k = \int dv \{x_i^2 + x_k^2\} g + \int dv \{x_i^2 + x_j^2\} g$$

þess sem við höfum notað (11.15)

$$I_{ij} = \int dv \rho(F) \left\{ \delta_{ij} \sum_k x_k^2 - x_i x_j \right\}$$

og $I_i = I_{ii}, \dots$

$$\rightarrow I_j + I_k = \int dv \{x_j^2 + x_k^2\} g + 2 \int dv x_i^2 g$$

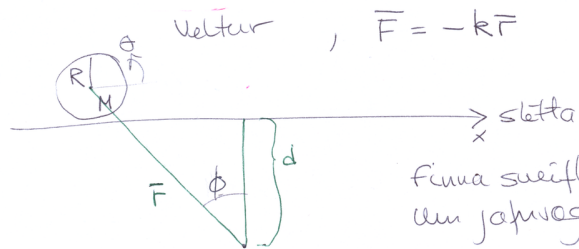
$$= I_i + 2 \int dv x_i^2 g > 0$$

því fast að

$$I_i \leq I_j + I_k$$

(2)

(11-07)



Veltur, $\vec{F} = -k\vec{x}$

finna sveiflutíma ásts um jafnvægispunktina

Velta eftir x-ás \rightarrow Kæstun $\bar{\alpha}$ og stíkur ω

$$F_x = -kR \sin \phi = -kx, \quad I = \frac{MR^2}{2}, \quad U = \frac{kx^2}{2}$$

Hreyfistær ω

$$T = \frac{M}{2} \dot{x}^2 + \frac{I}{2} \dot{\theta}^2 = \frac{M}{2} \dot{x}^2 + \frac{M(R\dot{\theta})^2}{4}$$

Eu

$$R\dot{\theta} = \dot{x}$$

$$T = \frac{3M}{4} \dot{x}^2$$

(3)

$$L = T - U = \frac{3M}{4} \dot{x}^2 - \frac{kx^2}{2}$$

Notum jöfnu Lagrange

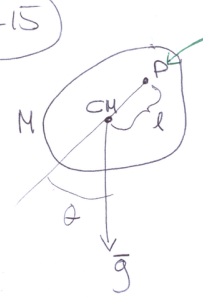
$$\frac{\partial L}{\partial x} - \frac{d}{dt} \left(\frac{\partial L}{\partial \dot{x}} \right) = 0 \rightarrow -kx - \frac{d}{dt} \left(\frac{3M}{2} \dot{x} \right) = 0$$

$$\rightarrow \frac{3}{2} M \ddot{x} + kx = 0 \quad \text{eða} \quad \ddot{x} + \frac{2k}{3M} x = 0$$

og því $\omega = \sqrt{\frac{2k}{3M}}$

11-15

4



upphengipunktur
 Setning steinvers (11.49)
 $\rightarrow I = MR_0^2 + Ml^2$ fættum ekki endilega R_0

$T = \frac{I}{2} \dot{\theta}^2, U = Mgl(1 - \cos\theta)$

$\rightarrow L = \frac{I}{2} \dot{\theta}^2 - Mgl(1 - \cos\theta)$

$\frac{\partial L}{\partial \theta} - \frac{d}{dt} \left(\frac{\partial L}{\partial \dot{\theta}} \right) = 0 \rightarrow -Mgl \sin\theta - \frac{I}{2} 2\ddot{\theta} = 0$

$\rightarrow \ddot{\theta} + \frac{Mgl}{I} \theta = 0$ < lítsveifla
 $= \frac{Mgl}{MR_0^2 + Ml^2} = \frac{gl}{R_0^2 + l^2} = \omega^2$

Ef ω finnum annan punkt fyrir upphengju með sama vög með l' þá gildir

$\frac{gl}{R_0^2 + l^2} = \frac{gl'}{R_0^2 + (l')^2}$

$\rightarrow l \{R_0^2 + (l')^2\} = l' \{R_0^2 + l^2\}$

$\rightarrow R_0^2 \{l - l'\} = l^2 l' - (l')^2 l = ll' \{l - l'\} \rightarrow \underline{R_0^2 = ll'}$

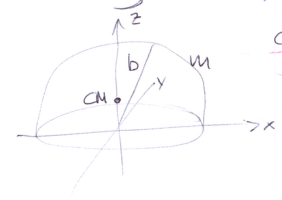
$\rightarrow \omega = \sqrt{\frac{gl}{R_0^2 + l^2}} = \sqrt{\frac{gl}{ll' + l^2}} = \sqrt{\frac{g}{l' + l}}$

þarf ekki að mæla I , finna þarf tvo punkta með sömu tíðni

5

11-14

6



Gagnheit hálfkúla, finna hverjtreghæðis höfuðása, og höfuð ása u, v, CM

Kartískt lútt í gegnum miðju kúluvar em (x, y, z) . Miðað við þann er hverjtreghæðisfulka J

fyrir CM vitum við að $x_{cm} = 0, y_{cm} = 0$

$\rho = \frac{m}{V} = \frac{m}{\left(\frac{4}{3}\pi b^3\right)\frac{1}{2}} = \frac{3m}{2\pi b^3}$ fasti

$Z_{cm} = \frac{1}{m} \int dv \rho \cdot z = \frac{\rho}{m} 2\pi \int_0^{\pi/2} \underbrace{\sin\theta \cos\theta}_r \int_0^b r^2 dr$ $r \cos\theta = z$
 $= \frac{3}{2\pi b^3} 2\pi \left(\frac{1}{2}\right) \frac{b^4}{4} = \frac{3b}{8}$

7

Sambærfa $J_{11} = J_{22}$

$J_{11} = \rho \int dv \{y^2 + z^2\}$
 $= \rho \int_0^b r^2 dr \int_0^{\pi/2} d\theta \sin\theta \int_0^{2\pi} d\phi \{ \sin^2\theta \sin^2\phi + \cos^2\theta \} r^2$
 $= \frac{3m}{2\pi b^3} \frac{b^5}{5} \int_0^{\pi/2} d\theta \sin\theta \{ \pi \sin^2\theta + 2\pi \cos^2\theta \}$
 $= \frac{3m}{2\pi b^3} \frac{b^5}{5} \left[\pi \cdot \frac{2}{3} + 2\pi \cdot \frac{1}{3} \right] = \frac{mb^2}{2 \cdot 5} [2 + 2]$
 $= \frac{2mb^2}{5}$ sem er líka J_{22}

$$J_{33} = \int dV \{x^2 + y^2\} = \rho \int_0^b r^4 dr \int_0^{2\pi} d\phi \int_0^{\pi/2} \sin\theta d\theta$$

$$\cdot \left\{ \sin^2\theta (\underbrace{\sin^2\phi + \cos^2\phi}_{=1}) \right\}$$

$$= \frac{3M}{2\pi b^3} \frac{b^5}{5} 2\pi \int_0^{\pi/2} d\theta \sin^3\theta = \frac{3M}{2\pi b^3} \frac{b^5}{5} 2\pi \cdot \frac{2}{3}$$

$$= \frac{2Mb^2}{5}$$

$$\left. \begin{aligned} x &= r \sin\theta \cos\phi \\ y &= r \sin\theta \sin\phi \\ z &= r \cos\theta \end{aligned} \right\} \rightarrow \begin{aligned} I_{ij} &= 0 \text{ ef } i \neq j \\ I &\text{ er } \bar{a} \text{ hornlínuleikun} \end{aligned}$$

(8)

þarfum II miðað um CM

$$II_{33} = J_{33}$$

en fyrir hún er notað setning Steiners

$$II_{11} = J_{11} - m z_{cm}^2 = J_{11} - m \left(\frac{3b}{8}\right)^2$$

$$= \frac{2}{5} mb^2 - m \frac{9b^2}{64} = \frac{83}{320} mb^2 = II_{22}$$

og aður var komið

$$II_{33} = \frac{2mb^2}{5}$$

Höfuð áskurir eru þau hnitakerfið, kortasta, sem lyftur upp í Z_{cm} , en áskurir eru samsíða (x, y, z)

(9)

11-11



a) velta án þess að hann renni til

(10)

finna hornlínuleið þessur kubbur "lengdir"

$$① \text{ Hæð CM yfir stöðu } \frac{l}{\sqrt{2}}$$

$$② \text{ ———— } \frac{l}{2}$$

$$① \text{ Einnungis stöðu orka } U_1 = mg \frac{l}{\sqrt{2}}$$

$$② \text{ stöðu orka } U_2 = mg \frac{l}{2}$$

$$\text{Hreyfiorka } T_2 = \frac{m}{2} v_{cm}^2 + \frac{I}{2} \omega^2$$

$$\text{Af mynd } \left(\frac{1}{\sqrt{2}} \right) v_{cm} = \frac{l}{\sqrt{2}} \omega$$

Samskrátt Ex. 11.5 í bók er I hér um CM þvert á einu flötinu $I = \frac{m}{6} l^2$, og Steiner leiðir þá til I' um ásum í gegnum P

$$I' = I + m \left(\frac{l}{\sqrt{2}}\right)^2 = \frac{2}{3} ml^2$$

$$\text{Þaða } U_1 = U_2 + T_2$$

Stöppun hlöðun vassandi, einungis snæringur um P

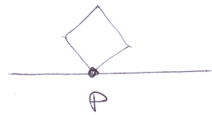
$$mg \frac{l}{\sqrt{2}} = mg \frac{l}{2} + 0 + \frac{2m}{6} l^2 \omega^2$$

$$\rightarrow gl \left\{ \frac{1}{\sqrt{2}} - \frac{1}{2} \right\} = (\omega l)^2 \left\{ 0 + \frac{1}{3} \right\} = (\omega l)^2 \frac{1}{3}$$

$$gl \left\{ \sqrt{2} - 1 \right\} = (\omega l)^2 \frac{2}{3} \rightarrow \omega^2 = \frac{3g}{2l} \left\{ \sqrt{2} - 1 \right\}$$

(11)

b) Enginn Töðunarskiptur



Enginn lætst kræftur
CM fellur lóðrætt
í fallinu stýst

Kubburinn um θ frá 0 í $\frac{\pi}{4}$

$$\rightarrow y_{cm} = \frac{l}{\sqrt{2}} \cos \theta \quad (\text{Hreyfingin er ekki með jöfnu hvarföngu})$$

$$\dot{y}_{cm} = -\frac{l}{\sqrt{2}} \dot{\theta} \sin \theta$$

og í lotapunkturinum gildir $(\dot{y}_{cm})_2 = -\frac{l}{2} \dot{\theta}^2 = -\frac{l}{2} \omega^2$
þegar $\theta = \frac{\pi}{4}$

(12)

Orkuvörðslan er þá

$$U_1 = U_2 + T_2$$

$$mgl \frac{l}{\sqrt{2}} = \frac{mgl}{2} + \frac{m}{2} (\dot{y})_2^2 + \frac{I}{2} \omega^2$$

úna I um miðju

$$= \frac{mgl}{2} + \frac{m}{2} \left(\frac{-l\omega}{2} \right)^2 + \frac{ml^2}{12} \omega^2$$

$$\rightarrow gl \left\{ \frac{1}{\sqrt{2}} - \frac{1}{2} \right\} = (\omega l)^2 \left\{ \frac{1}{8} + \frac{1}{12} \right\}$$

þá

$$gl \{ \sqrt{2} - 1 \} = (\omega l)^2 \left\{ \frac{1}{4} + \frac{1}{6} \right\} = (\omega l)^2 \frac{5}{12}$$

$$\rightarrow \omega^2 = \frac{12}{5} \frac{g}{l} \{ \sqrt{2} - 1 \}$$

(13)

11-13

þrjár massar í hnitum

$$m_1 = 3m \hat{i} \quad (b, 0, b)$$

$$m_2 = 4m \hat{i} \quad (b, b, -b)$$

$$m_3 = 2m \hat{i} \quad (-b, b, 0)$$

fluma II, höfuðása
og höfuðhverfuþéttur

(14)

$$II = mb^2 \begin{pmatrix} 13 & -2 & 1 \\ -2 & 16 & 4 \\ 1 & 4 & 15 \end{pmatrix}$$

Eigingildi

$$17 - \sqrt{7} \approx 14.354 mb^2$$

$$17 + \sqrt{7} \approx 19.646 mb^2$$

$$10 = 10.000 mb^2$$

*höfuðhverfi-
tölur*

Eiginlíngur

$$(1, 1, -1)$$

$$(1, -\sqrt{7}-3, -\sqrt{7}-2)$$

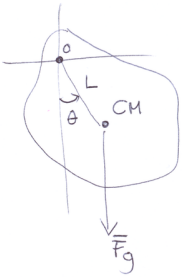
$$(1, \sqrt{7}-3, 2-2)$$

höfuðásar

ekki nauðgildir, en eru með viki b

(15)

11-32 leysa Ex. 11.2 þegar sveiflur eru ekki smáar



$$\theta(0) = 67^\circ$$

finna $\dot{\theta}(t)$ þegar $\theta = 1^\circ$

$$M = 340 \text{ g}, L = 13 \text{ cm}, k = 17 \text{ cm}$$

$$T = \frac{I}{2} \dot{\theta}^2, U = -MgL \cos \theta$$

$$I = Mk^2$$

$$\frac{\partial L}{\partial \theta} - \frac{d}{dt} \left(\frac{\partial L}{\partial \dot{\theta}} \right) = 0 \rightarrow -MgL \sin \theta - I \ddot{\theta} = 0$$

$$\rightarrow \ddot{\theta} + \frac{MgL}{Mk^2} \sin \theta = 0$$

þaða

$$\ddot{\theta} + \frac{g}{k^2} L \sin \theta = 0$$

1

Umkriftum hreyfijöfnu

$$\frac{d}{dt} (\dot{\theta}) = \frac{gL}{k^2} \frac{d(\cos \theta)}{d\theta} \rightarrow d\theta \frac{d}{dt} (\dot{\theta}) = \frac{gL}{k^2} d(\cos \theta)$$

$$\rightarrow \dot{\theta} d\dot{\theta} = \frac{gL}{k^2} d(\cos \theta)$$

Heildum

$$\int_{\dot{\theta}(0)=0}^{\dot{\theta}} \dot{\theta}' d\dot{\theta}' = \frac{gL}{k^2} \int_{\cos \theta_0}^{\cos \theta} d(\cos \theta)' \rightarrow \frac{\dot{\theta}^2}{2} = \frac{gL}{k^2} [\cos \theta - \cos \theta_0]$$

$$\rightarrow \dot{\theta} = \sqrt{\frac{2gL}{k^2} (\cos \theta - \cos \theta_0)}$$

Höfum séð áður að $\dot{\theta}$ og þú líka lotan eru hæð útslaginu

$$\dot{\theta} = \dot{\theta}(\theta, \theta_0), \quad \dot{\theta}(1^\circ, 67^\circ) = \sqrt{\frac{2 \cdot 9.81 \cdot 0.13}{(0.17)^2} (\cos 1^\circ - \cos 67^\circ)} \approx 7.33$$

2

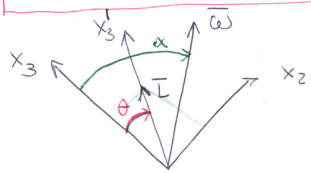
11-27 x_3 er samhvertúas hlutar, agirkættar ~~svæði~~ $I_1 = I_2$

L kvæðingunni um x_3'

Hönd milli $\bar{\omega}$ og x_3 er α

$\bar{\omega}$ og L eru upphaflega í x_2 - x_3 -slattu

Hver er hornhröðin x_3 um L (mv. I_1, I_3, ω, α)?



$\dot{\phi}$?

$$L_1 = I_1 \omega_1 = 0$$

$$L_2 = I_2 \omega_2 = I_1 \omega_2 = L \sin \theta = I_1 \omega \sin \alpha$$

$$L_3 = I_3 \omega_3 = L \cos \theta = I_3 \omega \cos \alpha$$

lausnavigislausu stundisins sýnir að L sé í slattu $\bar{\omega}$ og $\hat{e}_3 \rightarrow \hat{e}_3$ og $\bar{\omega}$ velta um $L \parallel \hat{e}_3$

þegar \hat{e}_2 er í slattu $\hat{e}_3, \bar{\omega}$ og $L \leftarrow$ upphöfsgildi
 $\rightarrow \phi = 0$ og (11.102) gefur $\omega_2 = \dot{\phi} \sin \theta$

$$\dot{\phi} = \frac{\omega_2}{\sin \theta} = \frac{\omega \sin \alpha}{\sin \theta} \quad (\text{sem er líka jafna (11.147) í bók})$$

En við höfum frá síðu (3) Og komu frá því

$$\tan \theta = \frac{L_2}{L_3} = \frac{I_1}{I_3} \tan \alpha \quad \left| \quad \sin \theta = \pm \frac{\tan \theta}{\sqrt{1 + \tan^2 \theta}} \right.$$

$$\omega_3 = \omega \cos \alpha$$

$$\rightarrow \dot{\phi} = \frac{\omega \sin \alpha}{\sin \theta} = \pm \omega \sin \alpha \frac{1 + \tan^2 \theta}{\tan \theta}$$

4

5

$$\begin{aligned} \dot{\phi} &= \pm \omega \sin \alpha \frac{\sqrt{1 + \tan^2 \theta}}{\tan \theta} \\ &= \pm \omega \sin \alpha \frac{\sqrt{1 + \left(\frac{I_1}{I_3}\right)^2 \tan^2 \alpha}}{\frac{I_1}{I_3} \tan \alpha} \\ &= \pm \omega \sin \alpha \frac{I_3}{I_1} \sqrt{\cot^2 \alpha + \left(\frac{I_1}{I_3}\right)^2} \\ &= \pm \omega \frac{I_3}{I_1} \sqrt{\cos^2 \alpha + \left(\frac{I_1}{I_3}\right)^2 \sin^2 \alpha} \\ &= \pm \frac{\omega}{I_1} \sqrt{I_3^2 \cos^2 \alpha + I_1^2 \sin^2 \alpha} \end{aligned}$$

6

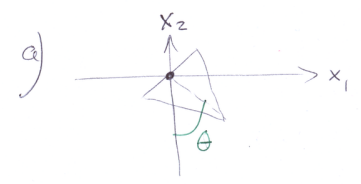
11-24) Jafn anna þríhyrningur hengdur upp:



Stærðleing a

$$\hookrightarrow \text{hæð } h: \sqrt{\frac{a^2}{4} + h^2} = a \rightarrow h = \sqrt{a^2 - \frac{a^2}{4}} = \frac{\sqrt{3}a}{2}$$

$$\text{Flötur: } A = \frac{a}{2} \cdot h = \frac{\sqrt{3}a^2}{4} \rightarrow \rho = \frac{m}{A} = \frac{4m}{\sqrt{3}a^2}$$

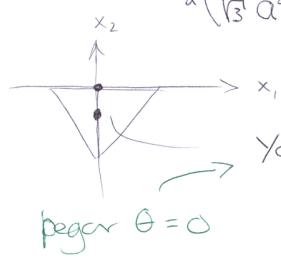


$$\begin{aligned} I_3 &= \rho \int dx dy (x^2 + y^2) \\ &= 2\rho \int_0^{a/2} dx \int_{-\frac{\sqrt{3}}{2}(a-2x)}^0 dy (x^2 + y^2) \end{aligned}$$

7

$$\begin{aligned} I_3 &= 2\rho \int_0^{a/2} dx \left\{ \left(x^2 y + \frac{y^3}{3} \right) \Big|_{-\frac{\sqrt{3}}{2}(a-2x)}^0 \right\} \\ &= 2\rho \int_0^{a/2} dx \left\{ x^2 \cdot \frac{\sqrt{3}}{2}(a-2x) + \frac{1}{3} \left(\frac{\sqrt{3}}{2}(a-2x) \right)^3 \right\} = 2\rho \frac{a^4}{16\sqrt{3}} \end{aligned}$$

$$= 2 \left(\frac{4m}{\sqrt{3}a^2} \right) \frac{a^4}{16\sqrt{3}} = \frac{m}{6} a^2$$



$$\begin{aligned} Y_{cm} &= \frac{2\rho}{m} \int_0^{a/2} dx \int_{-\frac{\sqrt{3}}{2}(a-2x)}^0 y dy \\ &= -\frac{2\rho}{m} \int_0^{a/2} dx \left\{ \frac{1}{2} \left(\frac{\sqrt{3}}{2}(a-2x) \right)^2 \right\} = -\frac{8}{m} \frac{a^3}{8} \end{aligned}$$

8

$$Y_{cm} = -\frac{\rho}{m} \frac{a^3}{8} = -\frac{4}{\sqrt{3}a^2} \frac{a^3}{8} = -\frac{a}{2\sqrt{3}}$$

Hreyfiorta: $T = \frac{I_3}{2} \dot{\theta}^2 = \frac{m}{12} a^2 \dot{\theta}^2$ lengd sveifluáss

Stöðvorka $U = mg|Y_{cm}|(1 - \cos \theta) = +\frac{mga}{2\sqrt{3}}(1 - \cos \theta)$

$$\rightarrow L = T - U = \frac{m}{12} (a\dot{\theta})^2 - \frac{mga}{2\sqrt{3}} (1 - \cos \theta)$$

þú leidir Euler-Lagrange til hreyfjöfnu

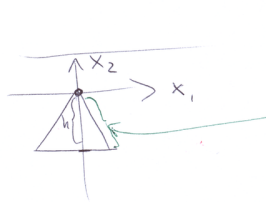
$$\frac{\partial L}{\partial \theta} - \frac{d}{dt} \left(\frac{\partial L}{\partial \dot{\theta}} \right) = 0$$

$$\rightarrow -\frac{mga}{2\sqrt{3}} \sin \theta - \frac{ma^2}{6} \ddot{\theta} = 0$$

$\rightarrow \ddot{\theta} + \sqrt{3} \frac{g}{a} \sin\theta = 0$

berenn = aman við einfalt punkti $\ddot{\theta} + \omega^2 \sin\theta = 0$

$\rightarrow \omega = \sqrt{\sqrt{3} \frac{g}{a}}$



$I'_3 = 2\rho \int dy \int dx (x^2 + y^2)$

$= 2\rho \int_{-\frac{\sqrt{3}a}{2}}^0 dy \left[\left(\frac{x^3}{3} + xy^2 \right) \Big|_0^{-\frac{y}{\sqrt{3}}} \right] = -2\rho \int_{-\frac{\sqrt{3}a}{2}}^0 dy \left[\frac{y^3}{3(\sqrt{3})^3} + \frac{y^3}{\sqrt{3}} \right]$

$I'_3 = 2\rho \left\{ \frac{\left(\frac{\sqrt{3}a}{2}\right)^4}{4 \cdot 3 \left(\frac{\sqrt{3}}{2}\right)^3} + \frac{\left(\frac{\sqrt{3}a}{2}\right)^4}{4 \cdot \sqrt{3}} \right\} = 2\rho a^4 \left\{ \frac{1}{12 \cdot 16} + \frac{3}{4 \cdot 16} \right\} \sqrt{3}$

$= 2\rho a^4 \sqrt{3} \frac{10}{12 \cdot 16} = a^2 m \frac{10}{6 \cdot 4} = \frac{5}{12} ma^2$

og þú

$L = \frac{5}{24} m (a\dot{\theta})^2 - U$

þar sem

$U = mg(1 - \cos\theta) \cdot (h - y_{cm}) = mg \frac{a}{\sqrt{3}} (1 - \cos\theta)$

$\rightarrow L = \frac{5}{24} m (a\dot{\theta})^2 - mg \frac{a}{\sqrt{3}} (1 - \cos\theta)$

$\rightarrow \ddot{\theta} + \frac{12g}{5\sqrt{3}a} \sin\theta = 0 \rightarrow \omega = \sqrt{\frac{12}{5\sqrt{3}} \frac{g}{a}}$

11-21 (11.54) - (11.61) í fylgjandi þannig var þetta aðlagð í fyrri bók 18

Endur bestum $\bar{L} = I \bar{\omega}$

fylgt sem stendur fyrir þannu vigur

\bar{I} sámu hlita kerfi

$\bar{L}' = I' \bar{\omega}'$

$\bar{L} = \mathbb{X}^t \bar{L}', \quad \bar{\omega} = \mathbb{X}^t \bar{\omega}'$

$\mathbb{X}' = \mathbb{X} \bar{\mathbb{X}}$
 $\bar{\mathbb{X}} = \mathbb{X}^t \bar{\mathbb{X}}$
 $\mathbb{X} \mathbb{X}^t = \mathbb{1}$
 $\mathbb{X}^t = \bar{\mathbb{X}}^{-1}$

kommitt fjaki

$\mathbb{X}^t \bar{L}' = \mathbb{X}^t I' \bar{\omega}$
 $\bar{L} = (\mathbb{X}^t I' \mathbb{X}) \bar{\omega}$

$I = \mathbb{X}^t I' \mathbb{X}$
 og $\mathbb{X} I \mathbb{X}^t = I'$

11-29 Samhverfur sundur þegar x'_3 og x_3 eru í sömu átt

Sjá mynd 11-15 $\rightarrow \theta = 0$

$\rightarrow P_\phi = I_3 \{ \dot{\phi} + \dot{\psi} \}$
 $P_\psi = I_3 \{ \dot{\phi} + \dot{\psi} \}$

$= I_3 \omega_3$

og (11.59) \rightarrow

fyrir okkur fast ($\theta = 0, \dot{\theta} = 0$)

$E = \frac{I_3}{2} \omega_3^2 + Mgh$

$\rightarrow E' = E - \frac{I_3}{2} \omega_3^2 = Mgh$

Ávæ með stöðubita snúning?

(13)

Notum (11.161)

$$E' = \frac{I_1}{2} \dot{\theta}^2 + \frac{[P_\phi - P_\phi \cos\theta]^2}{2I_1 \sin^2\theta} + Mgh \cos\theta = Mgh$$

$$= \frac{I_1}{2} \dot{\theta}^2 + \frac{(I_3 \omega_3)^2 \{1 - \cos\theta\}^2}{2I_1 \sin^2\theta} + Mgh \cos\theta = Mgh$$

Beypu skipti $z = \cos\theta$

$$\frac{d \cos\theta}{dt} = -\sin\theta \frac{d\theta}{dt} \rightarrow \frac{dz}{dt} = -\sin\theta \frac{d\theta}{dt}$$

$$\frac{I_1}{2} \frac{\dot{z}^2}{\sin^2\theta} + \frac{(I_3 \omega_3)^2 (1-z)^2}{2I_1 \sin^2\theta} - Mgh(1-z) = 0$$

$$\frac{I_1}{2} \frac{\dot{z}^2}{(1-z^2)} + \frac{(I_3 \omega_3)^2 (1-z)^2}{2I_1 (1-z^2)} - Mgh(1-z) = 0$$

(14)

$$\rightarrow \dot{z}^2 = \frac{(I_3 \omega_3)^2 (1-z)^2}{I_1^2} - \frac{2Mgh(1-z)(1-z^2)}{I_1}$$

$$= \frac{(1-z)^2}{I_1^2} \left\{ 2Mgh I_1 (1+z) - (I_3 \omega_3)^2 \right\}$$

þarfaum $\dot{z}^2 \geq 0$, gefum það fyrir að snúningur snúist hratt þ.a. $\{ \dots \} < 0 \rightarrow z=1 \rightarrow \theta=0$

\rightarrow stöðug hreyfing af $\rightarrow 4Mgh I_1 - (I_3 \omega_3)^2 < 0$

$$\rightarrow \frac{4Mgh I_1}{(I_3 \omega_3)^2} < 1$$

Stöðug snúningur gerst af ω_3 er ekki stöðug.

(11-31)

þann einsbet plötu

x-kerfi plötu

(15)

$$I_1, I_2 > I_1 \quad \text{um höfuð ásanna}$$

$$I_3 = I_1 + I_2$$

O og O' falla saman við CM plötu

t=0 sett á snúing í kraftfríu umhverfi með Ω um ás sem hefur α frá flöt slöttu og þvert á x_2 -ás

$$Eft \frac{I_1}{I_2} = \cos(2\alpha) \text{ sýna að}$$

$$\omega_2(t) = \Omega \cos\alpha \cdot \tanh\{\Omega t \sin\alpha\}$$

$$I_1 = I_2 \cos(2\alpha)$$

$$I_3 = I_1 + I_2 = I_2 \{1 + \cos(2\alpha)\} = 2I_2 \cos^2\alpha$$

$$I_1 - I_2 = I_2 \{ \cos(2\alpha) - 1 \} = -I_2 \{1 - \cos(2\alpha)\}$$

$$= -2I_2 \sin^2\alpha$$

(16)

Kraft frítt umhverfi

(11.114)

$$\{I_2 - I_3\} \omega_2 \omega_3 - I_1 \dot{\omega}_1 = 0 \quad (1)$$

$$\{I_3 - I_1\} \omega_3 \omega_1 - I_2 \dot{\omega}_2 = 0 \quad (2)$$

$$\{I_1 - I_2\} \omega_1 \omega_2 - I_3 \dot{\omega}_3 = 0 \quad (3)$$

Notam upplýsingar um \mathbb{I}

$$\{-2I_2 \sin^2 \alpha\} \omega_1 \omega_2 - 2I_2 \cos^2 \alpha \cdot \dot{\omega}_3 = 0 \quad (3)$$

$$I_2 \{1 - 2 \cos^2 \alpha\} \omega_2 \omega_3 - I_2 \cos(2\alpha) \cdot \dot{\omega}_1 = 0 \quad (1)$$

$$I_2 \{2 \cos^2 \alpha - \cos(2\alpha)\} \omega_3 \omega_1 - I_2 \dot{\omega}_2 = 0 \quad (2)$$

$$(3) \rightarrow \dot{\omega}_3 = -\omega_1 \omega_2 \tan^2 \alpha$$

$$(1) \rightarrow \dot{\omega}_1 = -\omega_2 \omega_3$$

$$(2) \rightarrow \dot{\omega}_2 = \omega_3 \omega_1$$

(17)

$$\begin{aligned} \rightarrow \omega_1 \omega_2 \omega_3 &= \dot{\omega}_2 \omega_2 && \leftarrow (2) \\ &= -\dot{\omega}_1 \omega_1 && \leftarrow (1) \\ &= -\dot{\omega}_3 \cdot \omega_3 \cot^2 \alpha && \leftarrow (3) \end{aligned}$$

Þetta er

$$\omega_2^2 - \omega_2^2(0) = -\omega_1^2 + \omega_1^2(0) = -\omega_3^2 \cot^2 \alpha + \omega_3^2(0) \cdot \cot^2 \alpha$$

upplýsingar

$$\omega_2(0) = 0 \quad \leftarrow \text{punkt } \bar{a} \times 2$$

$$\omega_1(0) = \Omega \cos \alpha$$

$$\omega_3(0) = \Omega \sin \alpha$$

(18)

því fast

$$\omega_2^2 = -\omega_1^2 + \Omega^2 \cos^2 \alpha = -\omega_3^2 \cot^2 \alpha + \Omega^2 \cos^2 \alpha$$

$$(2) \rightarrow \dot{\omega}_2^2 = \omega_3^2 \omega_1^2 \quad \text{og} \quad \omega_1^2 = \omega_3^2 \cot^2 \alpha$$

$$\dot{\omega}_2 = \omega_3^2 \cot \alpha$$

$$\omega_3^2 = \Omega^2 \sin^2 \alpha - \omega_2^2 \tan^2 \alpha$$

$$\dot{\omega}_2 = -(\cot \alpha) \cdot \left\{ \omega_2^2 \tan^2 \alpha - \Omega^2 \sin^2 \alpha \right\}$$

$$\rightarrow \frac{\dot{\omega}_2}{\left\{ \omega_2^2 \tan^2 \alpha - \Omega^2 \sin^2 \alpha \right\}} = -\cot \alpha$$

(19)

Notum að $\dot{\omega}_2 = \frac{d\omega_2}{dt}$

$$\rightarrow \int_0^{\omega_2} \frac{d\omega_2}{\omega_2^2 \tan^2 \alpha - \Omega^2 \sin^2 \alpha} = \cot \alpha \int_0^t dt$$

$$(E.4c) \rightarrow -\frac{1}{\tan \alpha \cdot \Omega \sin \alpha} \text{Arctanh} \left\{ \frac{\omega_2 \tan \alpha}{\Omega \sin \alpha} \right\} = -t \cot \alpha$$

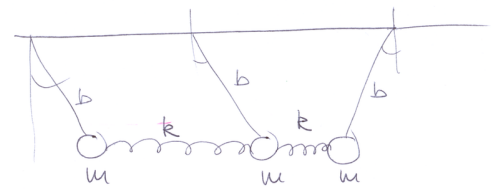
$$\rightarrow \omega_2(t) = \Omega \cos \alpha \cdot \text{tanh} \left\{ \Omega t \sin \alpha \right\}$$

ef $\omega_2^2 \tan^2 \alpha < \Omega^2 \sin^2 \alpha$

sumar
ítt

(20)

12-26



$$k = 0.2 \frac{N}{m}$$

$$m = 0.25 \text{ kg}$$

$$b = 0.47 \text{ m}$$

$$T = \frac{m}{2} \sum_{i=1}^3 (b\dot{\theta}_i)^2$$

$$U = mgb \left\{ (1 - \cos\theta_1) + (1 - \cos\theta_2) + (1 - \cos\theta_3) \right\}$$

$$+ \frac{kb^2}{2} \left[(\sin\theta_2 - \sin\theta_1)^2 + (\sin\theta_3 - \sin\theta_2)^2 \right]$$

$$\approx \frac{mgb}{2} \left\{ \theta_1^2 + \theta_2^2 + \theta_3^2 \right\} + \frac{kb^2}{2} \left\{ \theta_1^2 + \theta_3^2 + 2\theta_2^2 - 2\theta_1\theta_2 - 2\theta_2\theta_3 \right\}$$

1

$$M = \frac{mb^2}{2} \begin{pmatrix} 1 & 0 & 0 \\ 0 & 1 & 0 \\ 0 & 0 & 1 \end{pmatrix}$$

$$A = \frac{1}{2} \begin{pmatrix} mgb + kb^2 & -kb^2 & 0 \\ -kb^2 & mgb + 2kb^2 & -kb^2 \\ 0 & -kb^2 & mgb + kb^2 \end{pmatrix}$$

þurfunnað leysa eigingildis verkefnið

Hægt er að láta þetta $\frac{1}{2}$ í M og A falla úr

$$A\bar{a} = \omega^2 M\bar{a}$$

M er \bar{a} hornalínu formi, þú er eigingildis verkefnið venjulegt

2

$$A = \frac{1}{2} mgb \begin{pmatrix} 1+\epsilon & -\epsilon & 0 \\ -\epsilon & 1+2\epsilon & -\epsilon \\ 0 & -\epsilon & 1+\epsilon \end{pmatrix}, \quad \epsilon = \frac{kb^2}{mgb} = \frac{kb}{mg}$$

$$\rightarrow \omega_i^2 = \begin{cases} \frac{mgb}{mb^2} \{1+3\epsilon\} & i=1 \\ \frac{mgb}{mb^2} \{1\} & i=2 \\ \frac{mgb}{mb^2} \{1+\epsilon\} & i=3 \end{cases}$$

$$\rightarrow \omega_1 = \sqrt{\frac{g}{b} + \frac{3k}{m}} \quad \omega_3 = \sqrt{\frac{g}{b} + \frac{k}{m}}$$

$$\omega_2 = \sqrt{\frac{g}{b}}$$

3

Eiginvægið eru

$$\bar{a} = \begin{cases} \frac{1}{\sqrt{6}} (\theta_1, -2\theta_2, \theta_3) & i=1 \\ \frac{1}{\sqrt{3}} (\theta_1, \theta_2, \theta_3) & i=2 \\ \frac{1}{\sqrt{2}} (\theta_1, 0, -\theta_3) & i=3 \end{cases}$$

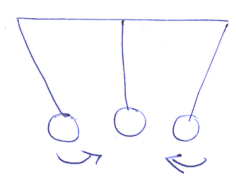
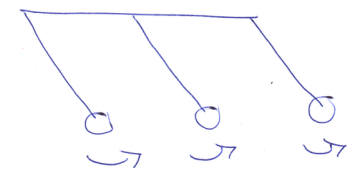
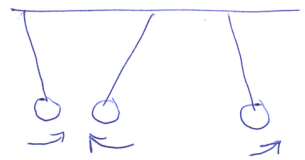
með sveifluhatti

logstorkan, minnst vöxlorkan

1

2

3



↳ kasta orkan

4

12-19 Þrjár þentúlar með

5

$$U = \frac{1}{2} \{ \theta_1^2 + \theta_2^2 + \theta_3^2 - 2\epsilon_{12}\theta_1\theta_2 - 2\epsilon_{13}\theta_1\theta_3 - 2\epsilon_{23}\theta_2\theta_3 \}$$

Öll ϵ_{ij} mismunandi

EKKI þaa uostgrannur vörðast
eins í dominu að undan

Setjum

$$T = \frac{1}{2} \{ \dot{\theta}_1^2 + \dot{\theta}_2^2 + \dot{\theta}_3^2 \} \Rightarrow M = \begin{pmatrix} 1 & 0 & 0 \\ 0 & 1 & 0 \\ 0 & 0 & 1 \end{pmatrix}$$

$$A = \begin{pmatrix} 1 & -\epsilon_{12} & -\epsilon_{13} \\ -\epsilon_{12} & 1 & -\epsilon_{23} \\ -\epsilon_{13} & -\epsilon_{23} & 1 \end{pmatrix}$$

Sýna að margfeldni verði aðeins ef öll ϵ_{ij} eru þau sömu

Eigingildin mæ finna með $w \times \max(w)$, en þau eru slökkin. Þeyrum þú

6

$$\{ A - \omega^2 M \} \bar{a} = 0$$

linulegar öhlitredar jöfnur $\rightarrow \det \{ A - \omega^2 M \} = 0$

$$\rightarrow \begin{vmatrix} 1 - \omega^2 & -\epsilon_{12} & -\epsilon_{13} \\ -\epsilon_{12} & 1 - \omega^2 & -\epsilon_{23} \\ -\epsilon_{13} & -\epsilon_{23} & 1 - \omega^2 \end{vmatrix} = 0$$

$$\rightarrow (1 - \omega^2)^3 - (1 - \omega^2)(\epsilon_{12}^2 + \epsilon_{13}^2 + \epsilon_{23}^2) - 2\epsilon_{12}\epsilon_{13}\epsilon_{23} = 0$$

setjum $1 - \omega^2 = x$

$$x^3 - x \cdot B - C = 0$$

7

$$\Delta = -4B^3 - 27C^2 = 4(\epsilon_{12}^2 + \epsilon_{13}^2 + \epsilon_{23}^2)^3 - 108(\epsilon_{12}\epsilon_{13}\epsilon_{23})^2$$

Ef $\Delta > 0$ þá eru þrjár mismunandi rótur

$$(\epsilon_{12}^2 + \epsilon_{13}^2 + \epsilon_{23}^2)^3 - 27(\epsilon_{12}\epsilon_{13}\epsilon_{23})^2 > 0$$

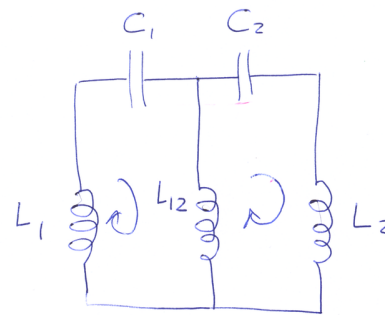
Ef $\Delta = 0$ þá er ein rót tvöföld

$$\rightarrow \text{ef } (\epsilon_{12}^2 + \epsilon_{13}^2 + \epsilon_{23}^2)^3 = 27(\epsilon_{12}\epsilon_{13}\epsilon_{23})^2$$

geist aðeins ef $\epsilon_{12} = \epsilon_{13} = \epsilon_{23}$

12-13

8



Lögmál Faradays

$$\frac{q}{C} = -L \frac{di}{dt}$$

(ekki Kirchhoff)

$$L_1 \frac{di_1}{dt} + \frac{q_1}{C_1} + L_{12} \left(\frac{di_1}{dt} - \frac{di_2}{dt} \right) = 0$$

$$L_2 \frac{di_2}{dt} + \frac{q_2}{C_2} + L_{12} \left(\frac{di_2}{dt} - \frac{di_1}{dt} \right) = 0$$

Tvær vörur með einfaldri meintöku sveiflu tengdur saman

Notum $\dot{q} = i$ ($\frac{dq}{dt} = i$) og tökum tíma aflöðu (9)

$$L_1 \frac{di_1}{dt} + \frac{i_1}{C_1} + L_{12} \left(\frac{di_1}{dt} - \frac{di_2}{dt} \right) = 0$$

$$L_2 \frac{di_2}{dt} + \frac{i_2}{C_2} + L_{12} \left(\frac{di_2}{dt} - \frac{di_1}{dt} \right) = 0$$

Umritum

$$\{L_1 + L_{12}\} \frac{di_1}{dt} + \frac{i_1}{C_1} - L_{12} \frac{di_2}{dt} = 0$$

$$\{L_2 + L_{12}\} \frac{di_2}{dt} + \frac{i_2}{C_2} - L_{12} \frac{di_1}{dt} = 0$$

Gerum ráð fyrir lausum

$$i_1(t) = A e^{i\omega t}, \quad i_2(t) = B e^{i\omega t}$$

pá fast

$$\left[\omega^2 \{L_1 + L_{12}\} - \frac{1}{C_1} \right] A - L_{12} \omega^2 B = 0$$

$$\left[\omega^2 \{L_2 + L_{12}\} - \frac{1}{C_2} \right] B - L_{12} \omega^2 A = 0$$

$$\begin{pmatrix} \omega^2 \{L_1 + L_{12}\} - \frac{1}{C_1} & -L_{12} \omega^2 \\ -L_{12} \omega^2 & \omega^2 \{L_2 + L_{12}\} - \frac{1}{C_2} \end{pmatrix} \begin{pmatrix} A \\ B \end{pmatrix} = 0$$

öskilnað línuþing jafna \rightarrow ákveðni af fylkingu verður \neq hverja

(10)

$$\left\{ \omega^2 [L_1 + L_{12}] - \frac{1}{C_1} \right\} \left\{ \omega^2 [L_2 + L_{12}] - \frac{1}{C_2} \right\} - L_{12}^2 \omega^4 = 0$$

$$\rightarrow \omega^2 = \frac{(L_1 + L_{12})C_1 + (L_2 + L_{12})C_2 \pm \sqrt{[(L_1 + L_{12})C_1 - (L_2 + L_{12})C_2]^2 - 4L_{12}^2 C_1 C_2}}{2C_1 C_2 [(L_1 + L_{12})(L_2 + L_{12}) - L_{12}^2]}$$

ef $L_{12} \rightarrow 0$, og $L_1 = L_2 = L$, $C_1 = C_2 = C$

$$\rightarrow \omega^2 = \frac{1}{LC}$$

(11)


12-12

Höfum

$$L \ddot{I}_1 + \frac{I_1}{C} + M \ddot{I}_2 = 0$$

$$L \ddot{I}_2 + \frac{I_2}{C} + M \ddot{I}_1 = 0$$

fyrir kerfið



notum þessa jöfnur og einu.....

$$L \ddot{I}_1 + \frac{I_1}{C} + M \left\{ -\frac{I_2}{LC} - \frac{M}{L} \ddot{I}_1 \right\} = 0$$

$$\rightarrow \left\{ L - \frac{M^2}{L} \right\} \ddot{I}_1 + \frac{I_1}{C} - \frac{M}{LC} I_2 = 0$$

einsfast

$$\left\{ L - \frac{M^2}{L} \right\} \ddot{I}_2 + \frac{I_2}{C} - \frac{M}{LC} I_1 = 0$$

tengingin er nánna ekki um línu með \ddot{I}_i

(12)

Bennt samandið (12.1) og (12.8) fyrir massa tengda gornu

(13)

setjum



$$m = L - \frac{M^2}{L}, \quad k_{12} = \frac{M}{LC}, \quad k = \frac{1}{C} \left(1 - \frac{M}{L}\right)$$

pá fast

$$m \ddot{I}_1 + (k + k_{12}) I_1 - k_{12} I_2 = 0$$

$$m \ddot{I}_2 + (k + k_{12}) I_2 - k_{12} I_1 = 0$$

og þú

$$\omega_1 = \sqrt{\frac{k + 2k_{12}}{m}} = \sqrt{\frac{1 + \frac{M}{L}}{C(L - \frac{M^2}{L})}} = \sqrt{\frac{1}{C(L - M)}}$$

$$\omega_2 = \sqrt{\frac{k}{m}} = \sqrt{\frac{1 - \frac{M}{L}}{C(L - \frac{M^2}{L})}} = \sqrt{\frac{1}{C(L + M)}}$$

Þú fæm þú eiginfærni og normal sveifluhættuna

(15)

$$\omega_1 = 0 \iff \vec{v}_1 \sim (1, -\frac{1}{2} \sqrt{\frac{k_1}{k_2}}, 1)$$

$$\omega_2 = \sqrt{\frac{k_2 + k_1}{m}} \iff \vec{v}_2 \sim (1, +\frac{1}{2} \sqrt{\frac{k_2}{k_1}}, 1)$$

$$\omega_3 = \sqrt{\frac{k_1}{m}} \iff \vec{v}_3 \sim (1, 0, -1)$$

$$\omega_1 \rightarrow \ddot{v}_1 = 0 \text{ með lausn } \vec{v}_1(t) = at + b$$

$$\text{þú } \ddot{v}_i + \omega_i v_i = 0 \text{ } \leftarrow \text{seð ástæða}$$

$$\text{þessu fylgir } \nabla U = (kx_1 + k_3x_3, k_2x_2 + k_3(x_1 + x_3), kx_3 + k_3x_2)$$

$$\text{og } \nabla U \Big|_{(x,y,z) = \alpha \cdot \vec{v}_i} = (0, 0, 0) \text{ fyrir öll } \alpha \in \mathbb{R}$$

$(x,y,z) = \alpha \cdot \vec{v}_i$ \leftarrow leiðir til sömu ákvarðana sem fást til að finna eiginfærni

(12-21)

þrjú sveiflu tengdir þ.a.

(14)

$$U = \frac{1}{2} \left\{ k_1(x_1^2 + x_3^2) + k_2x_2^2 + k_3(x_1x_2 + x_2x_3) \right\}$$

$$k_3 = \sqrt{2k_1k_2}$$

$$M = \frac{1}{2} \begin{pmatrix} m & 0 & 0 \\ 0 & m & 0 \\ 0 & 0 & m \end{pmatrix} \quad A = \frac{1}{2} \begin{pmatrix} k_1 & \frac{k_3}{2} & 0 \\ \frac{k_3}{2} & k_2 & \frac{k_3}{2} \\ 0 & \frac{k_3}{2} & k_1 \end{pmatrix}$$

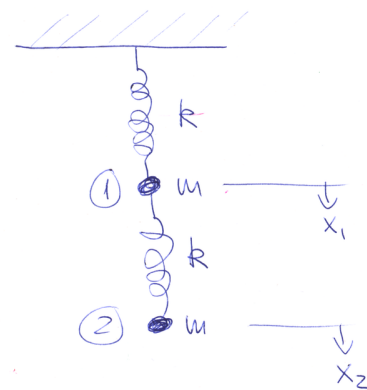
$$\omega_1^2 = - \frac{\sqrt{2(2k_1k_2) + k_2^2 - 2k_1k_2 + k_1^2} - k_1 - k_2}{2m} = 0$$

$$\omega_2^2 = \frac{\sqrt{2(2k_1k_2) + k_2^2 - 2k_1k_2 + k_1^2} + k_2 + k_1}{2m} = \frac{k_2 + k_1}{m}$$

$$\omega_3^2 = \frac{k_1}{m}$$

(12-07)

(16)



Þyngdarkrafturinn er inni í jafnvægisstöðu massanna

$$m \ddot{x}_1 = -kx_1 + k(x_2 - x_1) = -2kx_1 + kx_2$$

$$m \ddot{x}_2 = -k(x_2 - x_1) = -kx_2 + kx_1$$

Reynnum lausn

$$x_1(t) = Ae^{i\omega t}, \quad x_2(t) = Be^{i\omega t}$$

(17)

$$\begin{aligned} \rightarrow -m\omega^2 A + 2kA - kB &= 0 \\ -m\omega^2 B + kB - kA &= 0 \end{aligned}$$

$$\begin{pmatrix} -m\omega^2 + 2k & -k \\ -k & -m\omega^2 + k \end{pmatrix} \begin{pmatrix} A \\ B \end{pmatrix} = 0$$

$$\begin{aligned} \rightarrow (-m\omega^2 + 2k)(-m\omega^2 + k) - k^2 &= 0 \\ m^2\omega^4 - 2km\omega^2 - km\omega^2 + 2k^2 - k^2 &= 0 \\ m^2\omega^4 - 3km\omega^2 + k^2 &= 0 \end{aligned}$$

(18)

$$\omega^4 - \frac{3k}{m}\omega^2 + \left(\frac{k}{m}\right)^2 = 0$$

$$\omega_{1,2}^2 = \left\{ \frac{3}{2} \pm \frac{\sqrt{5}}{2} \right\} \frac{k}{m}$$

$$\omega_1 = \sqrt{\left(\frac{3}{2} - \frac{\sqrt{5}}{2}\right) \frac{k}{m}}, \quad \omega_2 = \sqrt{\left(\frac{3}{2} + \frac{\sqrt{5}}{2}\right) \frac{k}{m}}$$

$$a_1 \sim \left(1, \frac{1+\sqrt{5}}{2}\right)$$

$$a_2 \sim \left(1, \frac{1-\sqrt{5}}{2}\right)$$

Ef x_2 er fast, $x_2 = 0$ \rightarrow

$$m\ddot{x}_1 = -2kx_1$$

$$\rightarrow \omega_1^0 = \sqrt{\frac{2k}{m}}$$

(19)

Ef x_1 er fast, $x_1 = 0$

$$\rightarrow m\ddot{x}_2 = -kx_2$$

$$\rightarrow \omega_2^0 = \sqrt{\frac{k}{m}}$$

Berum saman

$$\omega_1 = \sqrt{\left(\frac{3}{2} - \frac{\sqrt{5}}{2}\right) \frac{k}{m}} \approx 0,618 \cdot \sqrt{\frac{k}{m}} \quad \omega_1^0 = 1,414 \cdot \sqrt{\frac{k}{m}}$$

$$\omega_2 = \sqrt{\left(\frac{3}{2} + \frac{\sqrt{5}}{2}\right) \frac{k}{m}} \approx 1,618 \cdot \sqrt{\frac{k}{m}} \quad \omega_2^0 = \sqrt{\frac{k}{m}}$$

Tíðir övixlverandi kerfisins finnast ekki í vöxlverandi kerfinu, vöxlverkan hlíðir eigin tíðum

(20)

Eigin vörur vöxlverandi kerfis

$$a_1 \sim (1, 1,618) \quad \text{samsamhverf sveiflukættur}$$

$$a_2 \sim (1, -0,618) \quad \text{andtsamhverf sveiflukættur}$$

hættir ortu vegna
hreyfingar ~~vegna~~ gornu

↓ ↑
↑ ↓